

CLASS III EVS HW WORKSHEET



SUBMISSION DATE:

Q1: Give two examples of food items having each of the following nutrients:



- a) Fats:
- b) Carbohydrates:
- c) Vitamins:
- d) Proteins:
- e) Minerals:

Q2: Draw/ Paste 2 pictures of the following parts of plant that we eat:

SEEDS



UNDERGROUND STEM



Q3: Give two reasons as to why we should say NO to junk food

- a)
.....
- b).....
.....