
CBSE Sample Paper-04 (Unsolved)
SUMMATIVE ASSESSMENT –II
Class – IX Social Science

Time allowed: 3 hours

Maximum Marks: 90

General Instructions:

- a) The question paper has 30 questions. All Questions are compulsory.
 - b) Question numbers 1-8 are Multiple Choice Questions. Each question carries one each.
 - c) Question numbers 9-20 are three marks questions. Answers of these questions should not exceed 80 words.
 - d) Question numbers 21-26 are five marks questions. Answers of these questions should not exceed 100 words.
 - e) Question number 27 and 28 are map questions of three marks each.
 - f) Question numbers 29-30 are based on OPEN TEXT ASSESSMENT BASED.
-

1. What was Taungya Cultivation?

OR

Name the country to which the nomadic cattle herders of Kaokoland belonged.

OR

Who said, "Plant more wheat, wheat will win the war"?

2. What are endemic species?

3. What is the number of Lok Sabha constituencies in your states?

4. In which house a money bill can be originate?

5. Who was Milosevic?

6. In how many districts National Food for work Programme was introduced?

7. Who supervises and coordinates the NFWP at district level?

8. Name two different kinds of ration cards.

9. How tendu leaves enhance the income of people living in forests?

OR

What were the major concerns of the Report of the Royal commission on Agriculture in India, 1928?

OR

How far it is correct to say that the end of Napoleonic war created the situation of tremendous unemployment in England? Explain.

10. Explain any three factors which are responsible for the commercialization action of the game of cricket.

OR

Who were Shanars? What kind of restrictions was put on them by the upper caste Nairs?

11. How the centre of gravity in cricket has shifted from the old Anglo-Australian axis? Explain.

OR

What was shoe respect case? Why was it opposed by the Indian?

12. How location and relief are important factors in determining the climate of India? Explain.
13. Name the forest which is found in Ganga-Brahmaputra delta? Mention its two features
14. What is census? When was the first census held in India? Which type of information can we get through census?
15. Can you illustrate the election result of Gulberga Constituency during the General Election to Lok Sabha, 2001?
16. What makes the upper chamber more powerful than lower chamber of Indian Parliament?
17. What is PIL? How is it helpful for the public?
18. How would you explain the 'Rationing System'?
19. How did India aim at self-sufficiency in food grains after Independence?
20. Can you illustrate the current status of Public Distribution System?
21. Elaborate the cultural and social life of the people of Bastar before colonialism.

OR

Bring out any five similar problems faced by the Indian Pastoral Communities and African Pastoralist Communities.

OR

What were the tactics adopted by Britishers to make the Chinese addicted to opium?

22. "The cricket in the colonial India reflected the British policy of divide and rule". Explain the statement with examples.

OR

State any five impacts of Industrial Revolution on the clothing material.

23. Study the following climatic data and answer the questions that follow.

Month	Jan	Feb	mar	Apr	May	June	July	Aug	Sep	Oct	Nov	Dec
Tem in (degree Celsius)	15.0	16.0	22.1	25.8	33.2	34.8	28.8	27.7	25.8	22.6	19.4	15.7
Rainfall (in cm)	2.4	1.7	4.5	3.2	10.5	29.1	30.2	35.5	24.4	9.8	1.8	1.2

- A. Name the rainiest month of the year. How much is the rainfall this month?
- B. What is the annual range of temperature here?
- C. Name the hottest month and write the temperature?
- D. Explain the meaning of annual range of rainfall.
24. Differentiate between dry deciduous forest and moist deciduous forests.
25. Suppose you are a government officer and officer in-charge for ensuring free and fair elections. What should you focus on during the following stages of elections?
 - A. Preparation of voting lists
 - B. Nomination of forms
 - C. Election campaign
 - D. Polling day
 - E. Counting of votes
26. Dr B R Ambedkar said, "Right to constitutional Remedies is the heart and soul



of our Constitution.” Explain how this Right ensures and guarantees the enforcement of our fundamental Rights.

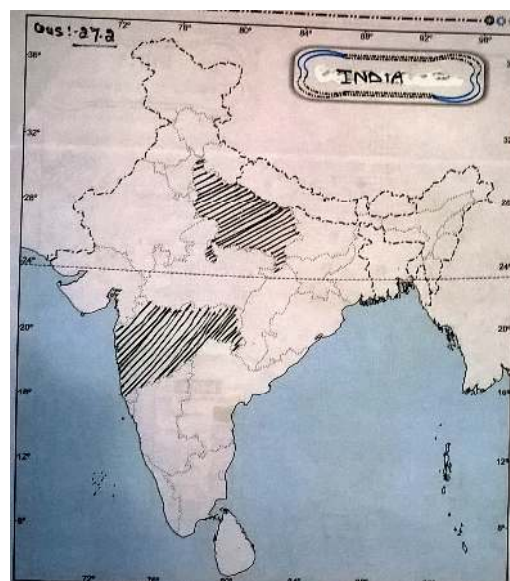
27.1 (a) On the Given outline Map of Indonesia mark and show the following

- A. Malaya States
- B. Borneo Island
- C. Celebes Island

OR

27.2 (a) Two features A and B are marked in the given political map of India. Identify these features with the help of the following information and write their correct names on the lines marked on the map

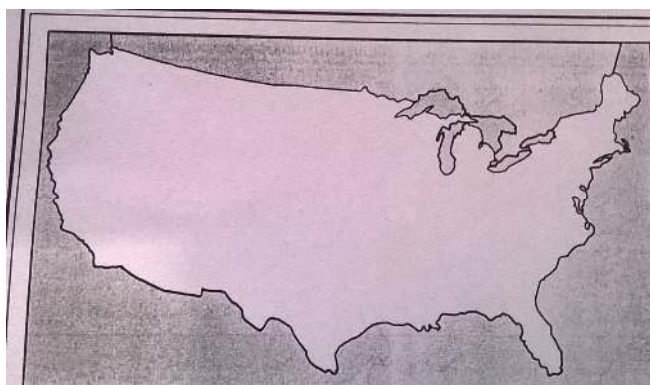
- A. Write the name of shepherded community of Uttar Pradesh
- B. A pastoral community of Maharashtra
- (b) On the same political map locate and label the following
- C. A state to which Monpas belong



OR

27.3 (a) on the given outline map of United States of America locate and mark the following

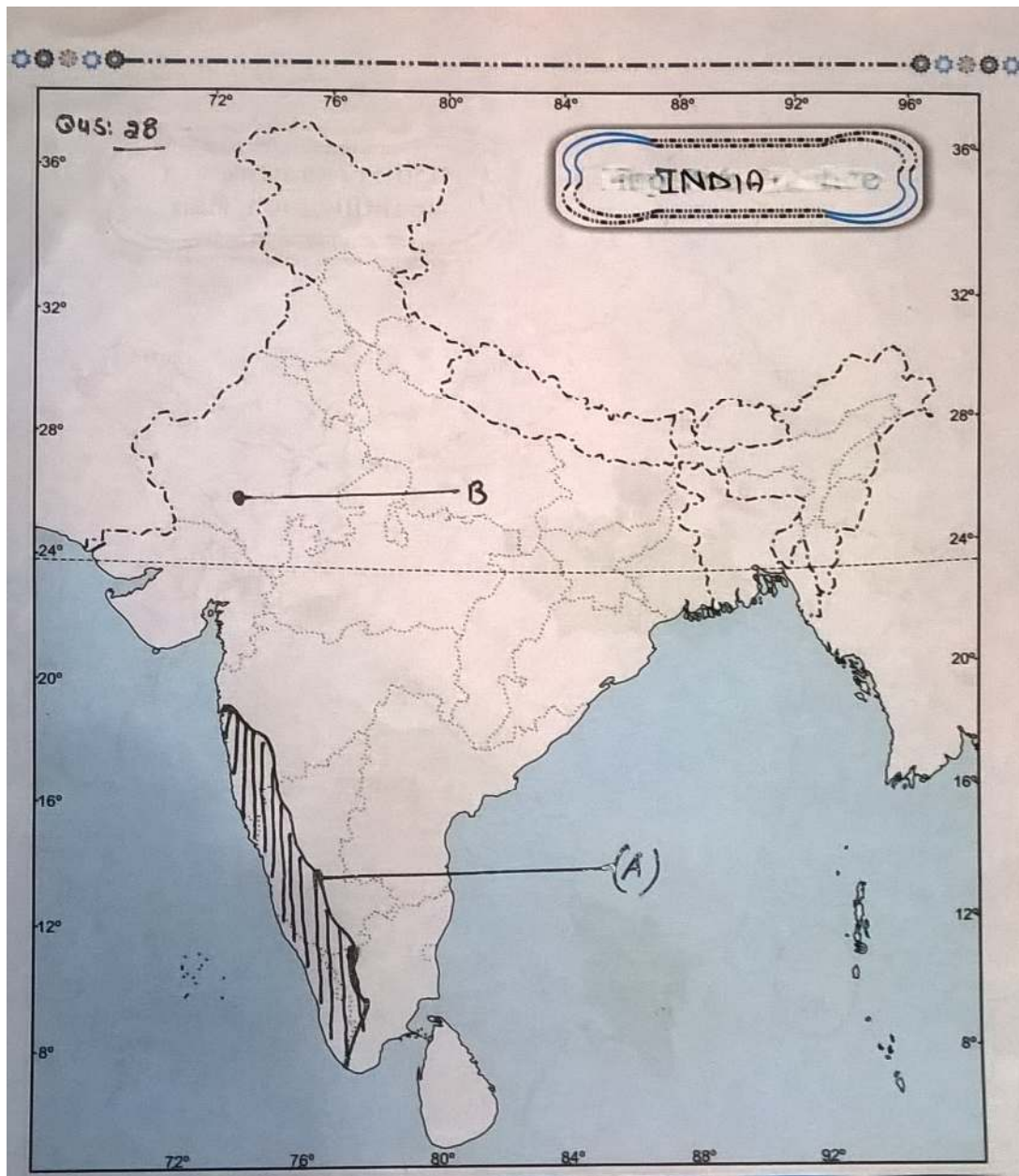
- A. The cotton belt
- B. The wheat area
- C. Pasture region



28.1. Two features A and B are marked in the given political map of India. Identify these features with the help of the following information and write their correct names on the lines marked on the map.

- A. A type of Vegetation
- B. Meteorological station

28.2. Locate and Label **the state having lowest density of population** with appropriate symbols on the same map given for identification.



29. Question Based on OTBA

30. Question Based on OTBA