

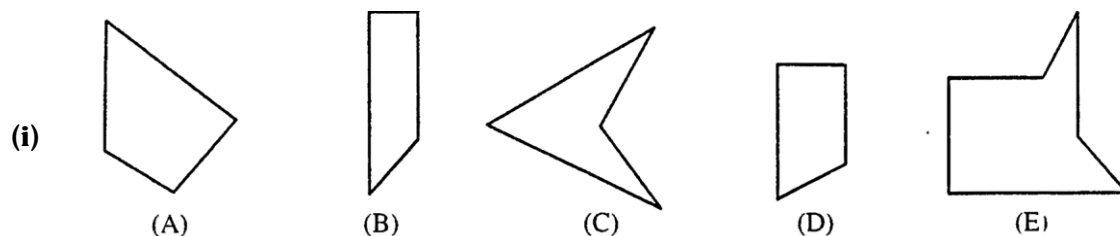
Figure Formation

Application Based Questions

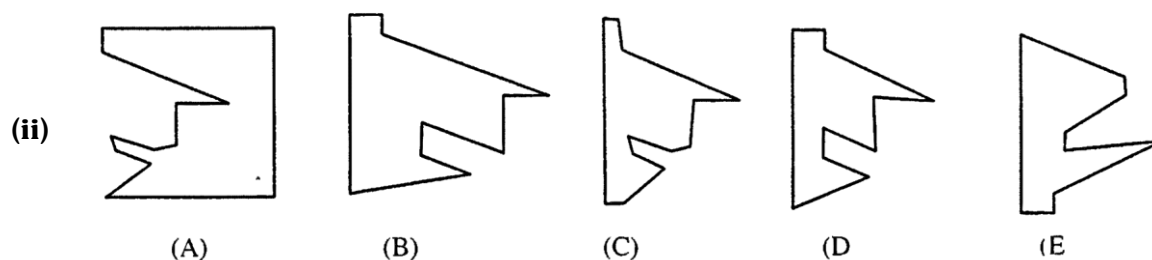
Q.1. Multiple choice questions:

Directions: Read the following questions and choose the answer that best answer the question.

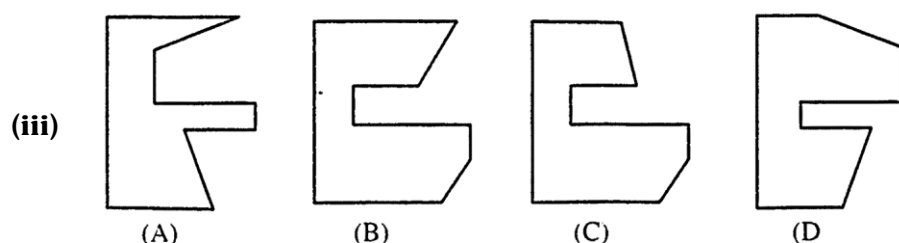
1. In each of the following questions, a set of five figures (A), (B), (C), (D) and (E) are followed by four alternatives (a), (b), (c) and (d). select the alternative which represents the combination of figures which if fitted together, will form a complete square.



- (a) ABC (b) BCE (c) BDF (d) ADE

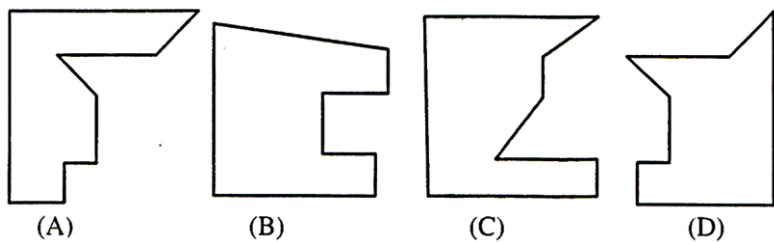


- (a) AB (b) BD (c) AC (d) DA



- (a) AC (b) CD (c) BD (d) AD

(iv)



(a) AB

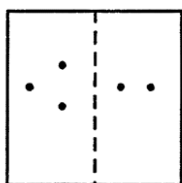
(b) BC

(c) CD

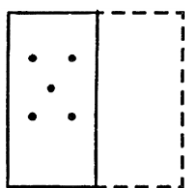
(d) AD

- 2.** In each of the following questions, a figure marked as transparent sheet is given and followed by four answer figures. One out of these four options resembles the figure which is obtained by folding transparent sheet along the dotted line. That option is your answer.

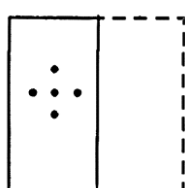
(i)



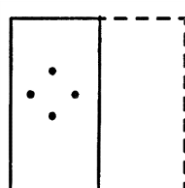
(a)



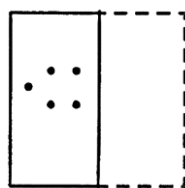
(b)



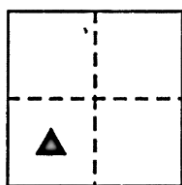
(c)



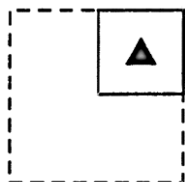
(d)



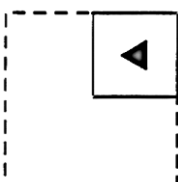
(ii)



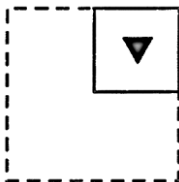
(a)



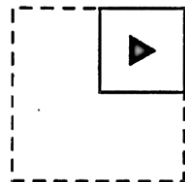
(b)



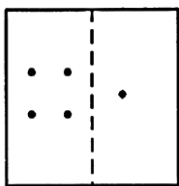
(c)



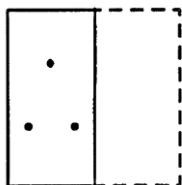
(d)



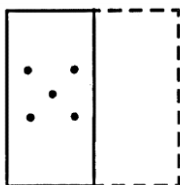
(iii)



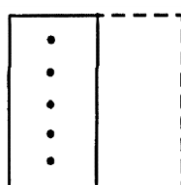
(a)



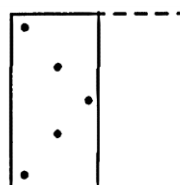
(b)



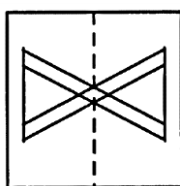
(c)



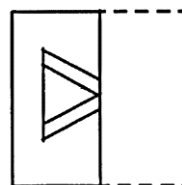
(d)



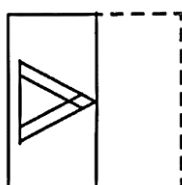
(iv)



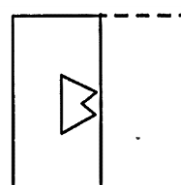
(a)



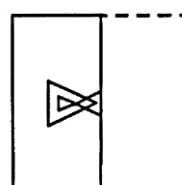
(b)



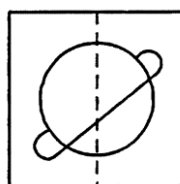
(c)



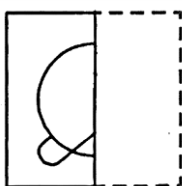
(d)



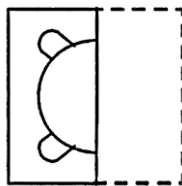
(v)



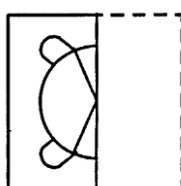
(a)



(b)



(c)



(d)

