

CLASS II MATHS. HW WORKSHEET

SUBMISSION DATE: _____

Q1 PUZZLE

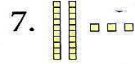

Complete the puzzle

1.		2.		3.	
		4.			
5.	6.			7.	8.
9.		10.		11.	
		12.			

Across


1. $500 + 30 + 9$

4. 60 tens



9. 4 hundreds 9 tens 6 ones

11. Fifty




Down

1. 5 hundreds 1 ten 1 one

2. $900 + 60 + 2$

3. $800 + 2$



8. 30 tens

9. 4 hundreds 6 tens 2 ones

10. $600 + 20 + 1$

11. Five hundred seventy-five

Q2. From the numbers in the puzzle write the number that has:-

a. 7 in the tens place

b. 8 in the hundreds place

c. 7 in the ones place

d. 5 in the tens place
