



1. According to the given picture how much money is left with Mandeep after giving Rs 400 to his sister?




- a) 475 b) 750 c) 375 d) 770
2. Choose the correct answer for the given picture ?



- a) $6+6$ b) $6+5$ c) $6-5$ d) 6×5

3. What is the number of point of intersection shown below ?



a) 18

b) 24

c) 12

d) 30

4. How will you find total children in the bus if 32 boys and 16 girls are there in a bus ?



a) $32+10+6$

b) $30+16$

c) $32-10+6$


d) $16-10+32$

5. Which is the correct answer according to the given picture?



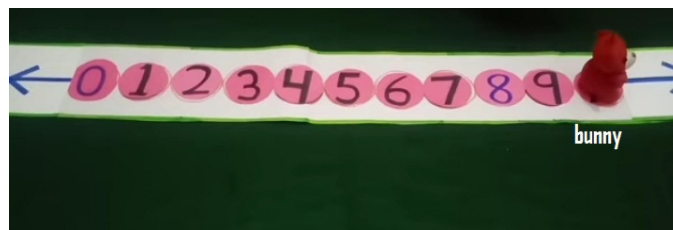
- a) 9 times 3 b) 3 times 9 c) 3 times 6 d) 3 times 3

6. If 5 persons can sit in one car then how many cars are required for the persons standing as shown in the picture .



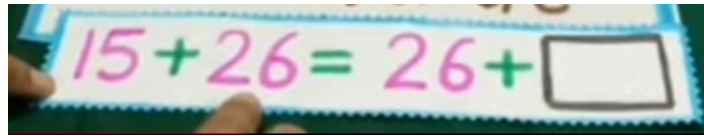
- a) four b) five c) three d) two

7. Bunny standing on a particular number and moving seven steps backward. It will be reach on which number?



- a) Four b) five c) three d) two

8. Choose the correct number for the blank box.


$$15 + 26 = 26 + \boxed{}$$

a) 26

b) 15

c) 10

d) 5

9. Which will be the correct answer as per following picture?



a) $6+1$

b) $1+6$

c) $6-1$

d) 6×1

10. How many blocks will each child get when such blocks are distributed among them as shown in the following picture?




- a) Three b) Four c) Two d) Five

11. How much total amount is deposited in Sandeep's bank passbook?



- a) 2807 b) 1238 c) 1083 d) 9983

12. Which is the correct answer as per following picture?



a) 0

b) 8

c) 18

d) 180

13. Sandeep has Rs. 785 in his bank account. How much money should be deposit so that is his total balance becomes Rs.1000?

DATE	DESCRIPTION	WITHDRAWALS	DEPOSITS	BALANCE
03-10-16	ATM	**21.25		**474.11
15.02.20			311.00	** 785.00
				** 1000.00

Please refer to the back cover for the list of common transaction codes.

Please verify your account activity regularly. If there is an error, notify the bank within 48 days.


a) 239

b) 215

c) 329

d) 293

14. How much more money did uncle give to Satnam?



a) 250

b) 105

c) 100

d) 765

15. Choose the correct answer according to the currency notes shown in the picture.



a) $12+5$

b) $12-5$

c) 12×5

d) $5-12$

Answer key

Question no.	answer
1	c
2	d
3	b
4	a
5	b
6	c
7	c
8	a
9	d
10	a
11	d
12	c
13	b
14	a
15	c

