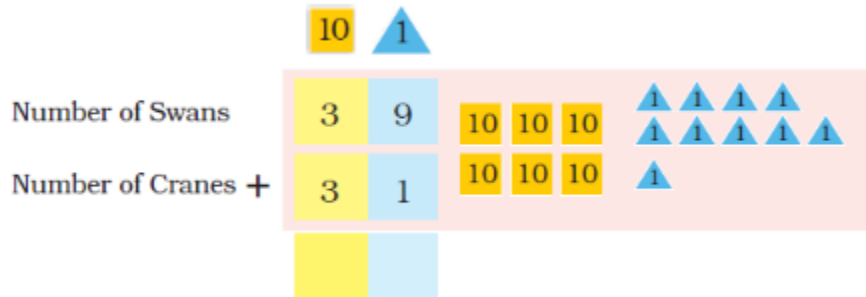


## Birds Come, Birds Go

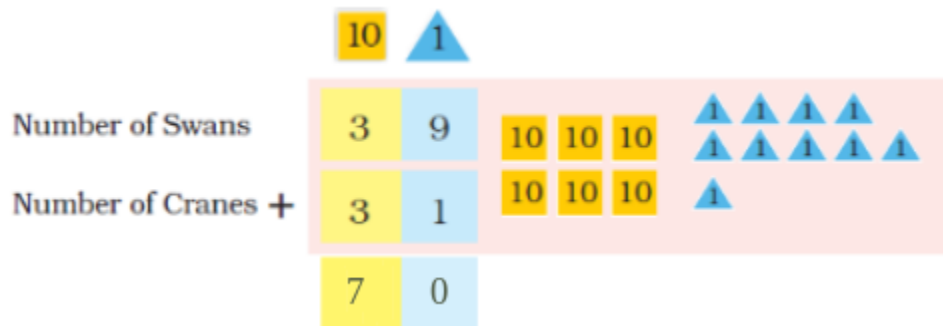
Page No 114:

**Question 1:** In the same way, we will add the number of swans and cranes.



The total number of swans and cranes is \_\_\_\_\_.

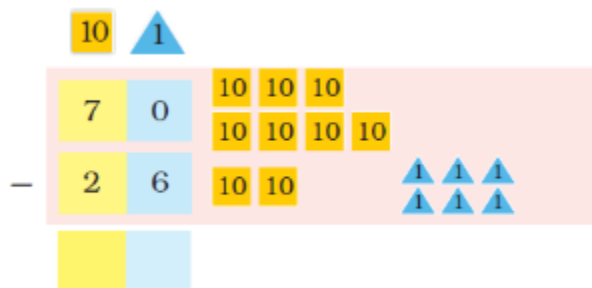
**Answer:**



The total number of swans and cranes is 70.

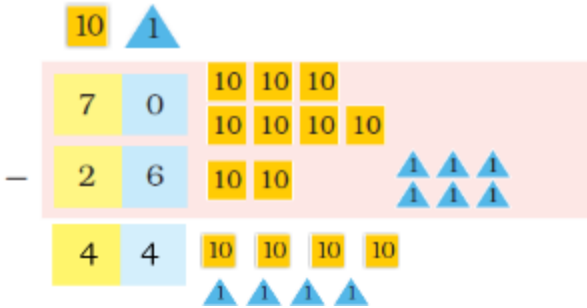
Page No 115:

**Question 1:** One morning, Suraj saw that out of 70 birds, only 26 birds were left. The rest had gone away. • How many birds have gone away?



\_\_\_\_\_ birds have gone away.

**Answer:**



44 birds have gone away.

### Page No 116:

**Question 1: Rahul scored 23 runs in a cricket match and Dhoni scored 69. How many runs did they make in all?**



They made \_\_\_\_\_ runs in all.

**Answer:**



They made 92 runs in all.

**Question 2: Dema sold 48 shawls in a fair. Next day, he sold 17 more shawls. How many shawls in all did he sell?**

	10	1
<input type="checkbox"/>		

Dema sold \_\_\_\_\_ shawls in all.

Answer:

	10	1
	4	8
<input type="checkbox"/>	1	7
	6	5

Dema sold 65 shawls in all.

**Question 3: Bunnu rabbit can eat 29 carrots in one week. Munnu rabbit can eat 42 carrots in one week. Who eats more in a week and by how much?**

	10	1
<input type="checkbox"/>		

\_\_\_\_\_ eats \_\_\_\_\_ more carrots.

Answer:

	10	1
	4	2
<input type="checkbox"/>	2	9
	1	3

Munnu eats 13 more carrots.

### Page No 117:

**Question 1:** Neha is 29 years old. Her mother is 58 years old. How many years older is Neha's mother?

	10	1
<input type="checkbox"/>		

Mother is \_\_\_\_\_ years older than Neha.

**Answer:**

	10	1
	5	8
<input type="checkbox"/>	2	9
	2	9

Mother is 29 years older than Neha.

**Question 2:** Find the answer.

	2	4		3	2		6	8		1	9
+	1	7	-	2	7	+	1	3	+	3	9
	5	4		7	3		8	0		4	3
+	4	3	-	5	9	-	6	7	-	2	7
	3	9		4	8		9	4		7	6
-	2	5	+	3	8	-	8	7	-	2	8

**Answer:**

	2	4		3	2		6	8		1	9
+	1	7	-	2	7	+	1	3	+	3	9
	4	1		0	5		8	1		5	8
	5	4		7	3		8	0		4	3
+	4	3	-	5	9	-	6	7	-	2	7
	9	7		1	4		1	3		1	6
	3	9		4	8		9	4		7	6
-	2	5	+	3	8	-	8	7	-	2	8
	1	4		8	6		0	7		4	8

Question 1:

**Catch the Right Bus!**

Solve to get the bus number on each card. Match the card with the bus number and see who will sit in which bus.

Card No. 27  
 $+ 22$   
49

Card No. 48  
 $+ 19$

Card No. 88  
 $- 21$

Card No. 47  
 $+ 28$

Card No. 93  
 $- 18$

Card No. 37  
 $+ 12$

Card No. 38  
 $+ 37$

Card No. 25  
 $+ 24$

Card No. 99  
 $- 32$

Answer:

Catch the Right Bus!

Solve to get the bus number on each card. Match the card with the bus number and see who will sit in which bus.

Card No. 27  
+ 22  
49

Card No. 48  
+ 19  
67

Card No. 88  
- 21  
67

Card No. 47  
+ 28  
75

Card No. 93  
- 18  
75

Card No. 37  
+ 12  
49


Card No. 38  
+ 37  
75

Card No. 25  
+ 24  
49

Card No. 99  
- 32  
67


Page No 119:

Question 1:



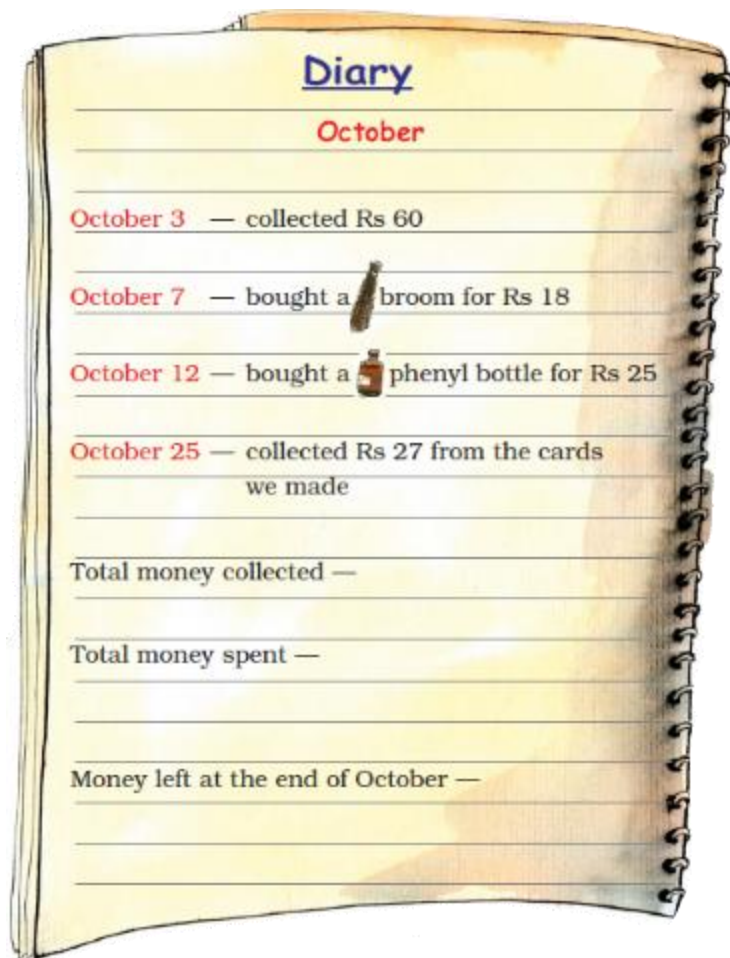
**Answer:** Disclaimer: This is a sample answer wherein two different numbers are considered for each problem. Students, however, can choose their own numbers to obtain the desired results.



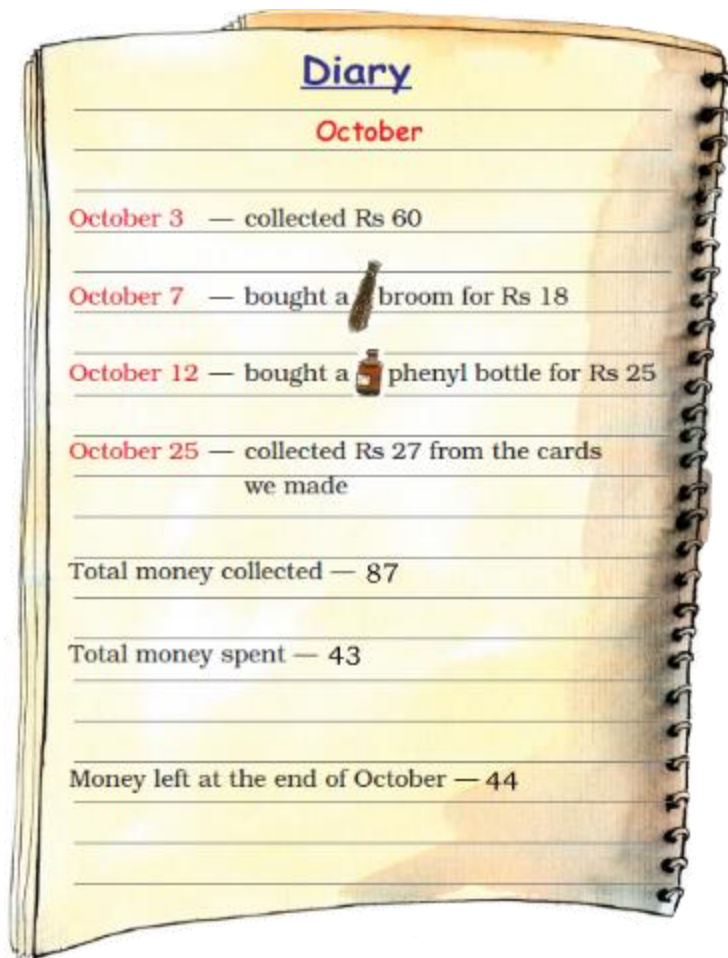


**Page No 122:**

**Question 1: Shreya collects the money and writes it in her diary. Help Shreya to find how much money is left at the end of the month.**








**Answer:**




**Page No 123:**

**Question 1:** Children of *Chakachak Toli* counted the number of trees in the park.



<i>Trees</i>	<i>Number of trees</i>
	90
	75
	82
	68
	94

-  Trees were more than  trees. How many more? \_\_\_\_\_
- 

Draw the tree which is least in number. • Draw the tree which is most in number.

- Children planted some more  trees to make 100.  
How many more did they plant? \_\_\_\_\_

Answer:

-  Trees were 8 more than  trees.

- The tree which is least in number is



- The tree which is most in number is



- Children planted 15 more



trees to make 100.