

FA-IV worksheet 2013-14

class - I

subject - eVs

Look at the picture and write uses of water.










Name the picture.




Jumbled Words :


1. INNGID OOMR




2. ATHB OORM




3. ITCHENK



4. RDAWING OOMR



5. EDB OORM



This is a _____ house.

It is made up of _____


_____, _____ and

_____. It is mostly


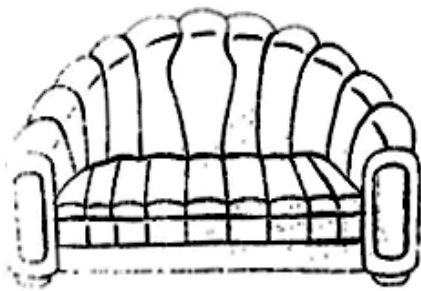
found in _____.

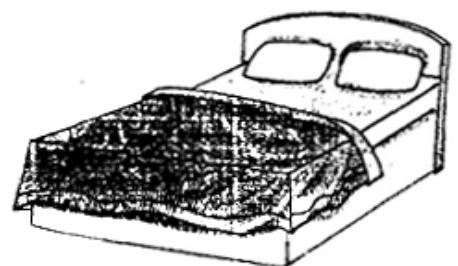
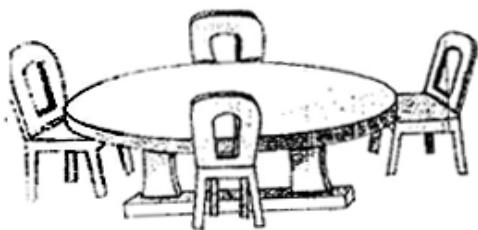


Look at the picture and write who need water to live




Write the name of the room where these things are used.





What does a house protect us from. Name them



Name 2 each



1. Two kinds of houses.

2. Pucca house.

3. neighbourhood places

4. 2 things we use in bathroom.

Name these neighbourhood places.



Fill in the blanks :

1. Plants cannot live without _____.
2. We should never _____ water.
3. We use water in many _____.
4. _____ need water to live.
5. We _____ our guest in _____.
6. We keep our _____ in the store room.
7. We keep our house _____ and _____.
8. There are different rooms for _____.
9. We get _____, _____ and send _____
from post office.
10. _____ let in fresh air and _____.

Question and Answer

Q.1 What is a pucca house ?

Q.2 What is a house ?

Q.3 What is neighbourhood ?

Q.4 What is a Kutcha house ?

Name 2 each

1. Uses of Water

2. need water to live

Answer in one word .

1. Where do we keep our money safe ?

2. From where do we buy our daily need things.

3. From where do we catch a bus ?

4. From where do we buy stamps and postcards ?

Draw colour and label a Kutcha house.