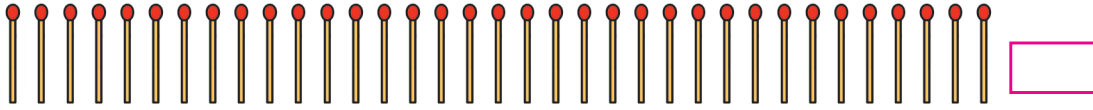


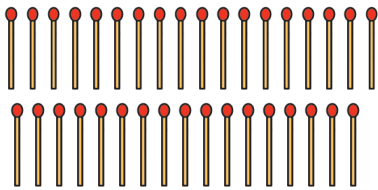


Counting in groups

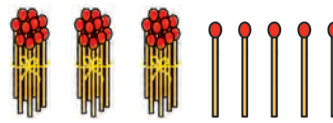
Count and write.



Yash and Rama counted these sticks by two different methods.



Like this : 1, 2, 3, 4, 35.



And like this :

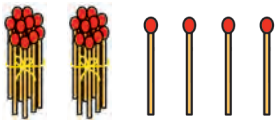
3 tens and 5 units or singles.



It is easier to count if we make groups of ten.

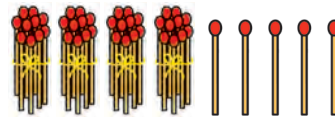
Ahmed's friends have some sticks. They have been counted by making groups of ten.

Salma had 24 sticks



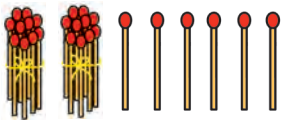
$$2 \text{ T} + 4 \text{ U} = 24$$

Sharad had 45 sticks

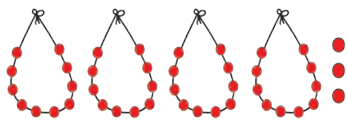


$$\square \text{ T} + \square \text{ U} = \square$$


Let us also count the things shown below, in the same way.



$$\square \text{ Tens} + \square \text{ Units} = \square$$



$$\square \text{ Tens} + \square \text{ Units} = \square$$



$$\square \text{ Tens} + \square \text{ Units} = \square$$

