

**Session 2013-2014**

Worksheet

Term : First


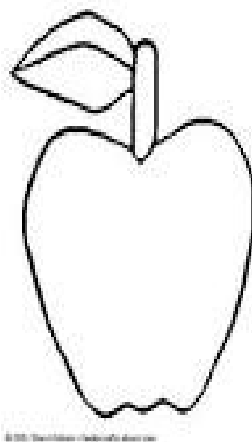

Subject : Maths

Name .....Date :..... Class/Sec: I, .....

**Q1. Tick the taller and encircle the shorter figure given below:**




**Q2. Colour the biggest object with blue and smallest with green.**





**Q3. Shade the longer object with blue and shorter with red.**



**Q4. Tick the thicker object and cross the thinner object.**

