


CLASS II MATHS HW WORKSHEET

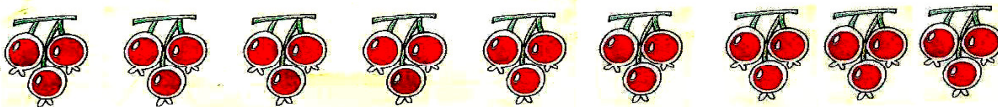
SUBMISSION DATE: _____

Multiplication
is repeated
addition.



'x' shows
the sign for
multiplication.

◆ Fill in the blanks.



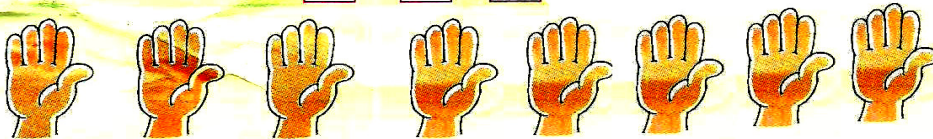
$$3 + \square + \square + \square + \square + \square + \square + \square + \square = \square$$

$$\square \times \square = \square$$



$$\square + \square + \square + \square + \square + \square + \square = \square$$

$$\square \times \square = \square$$



$$\square + \square + \square + \square + \square + \square + \square + \square = \square$$

$$\square \times \square = \square$$

Complete the following by filling the box with correct numbers:

1+1+1+1	$\square \times \square = \square$
4x3	$\square + \square + \square + \square = \square$
2+2+2+2+2	$\square \times \square = \square$