

## Grade 8 Visualising Solid Shapes Worksheets

### Grade 8 Maths Visualising Solid Shapes Multiple Choice Questions (MCQs)

1. An iron almirah is an example of a

- (a) Cuboid
- (b) Cube
- (c) Cylinder
- (d) Rectangular pyramid

2. Two cubes of dimensions  $2\text{ cm} \times 2\text{ cm} \times 2\text{ cm}$  are placed side by side, the length of resulting cuboid is:

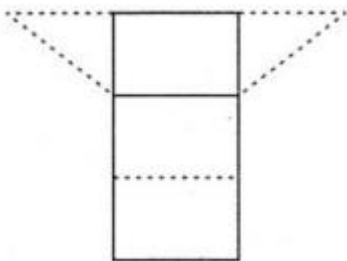
- (a) 2 cm
- (b) 3 cm
- (c) 4 cm
- (d) 6 cm

3. What is the minimum number of faces a pyramid can have?

- (a) 1
- (b) 3
- (c) 5
- (d) 4

4. The net given alongside is of

- (a) Triangular pyramid
- (b) Triangular prism
- (c) Square pyramid
- (d) Pentagonal pyramid



5. Which of the following solids has the maximum number of vertices?

- (a) Tetrahedron
- (b) Cuboid
- (c) Octahedron
- (d) Cylinder

6. The number of faces of a triangular prism is .....

- (a) 6

- (b) 8
- (c) 4
- (d) 5

7. The number of faces of a square pyramid is .....

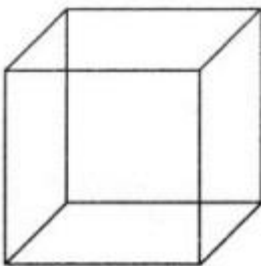
- (a) 6
- (b) 8
- (c) 4
- (d) 5

8. What will be the number of edges if there are 12 vertices and 20 faces?

- (a) 32
- (b) 28
- (c) 30
- (d) 42

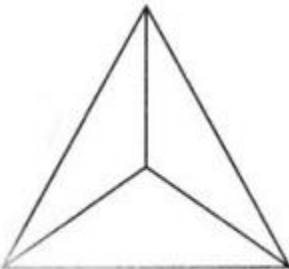
9. Name of the solid given alongside

- (a) Pyramid
- (b) Cone
- (c) Cube
- (d) Cuboid



10. Name of the solid given alongside

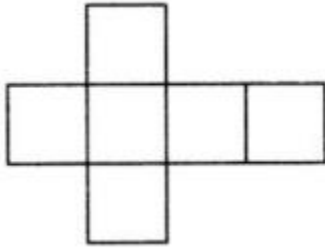
- (a) Pyramid
- (b) Cone
- (c) Cube
- (d) Cuboid



11. Name of the solid whose net diagram is given alongside

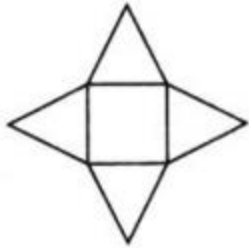
- (a) Pyramid
- (b) Cone
- (c) Cube

(d) Cuboid



12. Name of the solid whose net diagram is given alongside

- (a) Pyramid
- (b) Cone
- (c) Cube
- (d) Cuboid




13. Name of the solid whose net diagram is given alongside

- (a) Cylinder
- (b) Cone
- (c) Sphere
- (d) Cuboid



14. Name of the solid whose net diagram is given alongside

- (a) Cylinder
- (b) Cone
- (c) Sphere
- (d) Cuboid



15. Two dice are placed side by side with 5 + 2, what is the total on the face opposite to the given numbers?

- (a) 3
- (b) 7
- (c) 11
- (d) 6

16. **What cross-sections do you get when you give a vertical cut to the brick?**

- (a) rectangle
- (b) square
- (c) circle
- (d) triangle

17. **What cross-sections do you get when you give a vertical cut to a die?**

- (a) rectangle
- (b) square
- (c) circle
- (d) triangle

18. **What cross-sections do you get when you give a vertical cut to the circular pipe?**

- (a) rectangle
- (b) square
- (c) circle
- (d) triangle

19. **What cross-sections do you get when you give a vertical cut to an ice-cream cone?**

- (a) rectangle
- (b) square
- (c) circle
- (d) triangle

20. **What cross-sections do you get when you give a horizontal cut to an ice-cream cone?**

- (a) rectangle
- (b) square
- (c) circle
- (d) triangle

### Class 8 Maths Visualising Solid Shapes Fill In The Blanks

1. A cube has ..... verices, ..... edges and ..... faces.
2. The point at which three faces of a 3-D figure meet is known as its .....
3. A cuboid is also known as a rectangular .....
4. A triangular pyramid is also called as .....
5. A square prism is same as a .....
6. The corners of a solid shape are called its .....

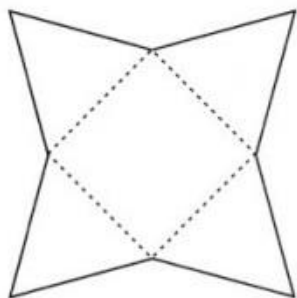
7. A ..... is a skeleton-outline of a solid that can be folded to make it.
8. A cuboid has ..... rectangular faces.
9. The number of faces of a cylinder is .....
10. The number of faces of a cone is .....

### Class 8 Maths Visualising Solid Shapes Very Short Answer Type Questions

1. What will be the number of faces if there are 6 vertices and 12 edges?
2. Two dice are placed side by side with 5 + 6, what is the total on the face opposite to the given numbers?
3. Two dice are placed side by side with 6 + 2, what is the total on the face opposite to the given numbers?
4. What cross-sections do you get when you give a horizontal cut to the brick?
5. What is the other name of a triangular pyramid?
6. State the Euler's formula for polyhedrons.

### Class 8 Maths Visualising Solid Shapes Short Answer Type Questions

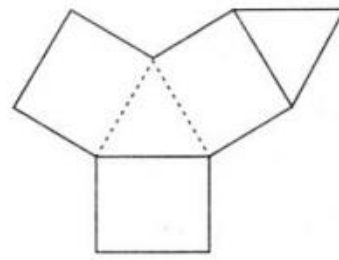
1. Name the polyhedron that can be made by folding each net:



(i)

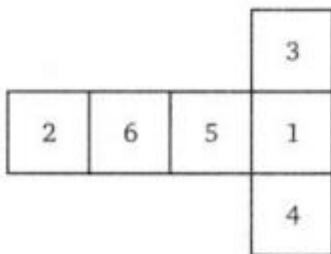


(ii)

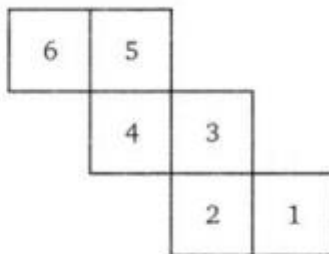


(iii)

2. Dice are cubes where the numbers on the opposite face must total 7 which of the following are dice?




(i)



(ii)

3. Draw the front, side and top view of a brick.



4. How are prisms are cylinders alike?

### Class 8 Maths Visualising Solid Shapes Long Answer Type Questions

1. Using Euler's formula, complete the following:

Faces (F)	6	5	8
Vertices (V)	$V_1 = \dots\dots\dots$	$V_2 = \dots\dots\dots$	12
Edges (E)	12	8	$E_1 = \dots\dots\dots$

2. Can a polyhedron have 8 faces, 14 edges and 6 vertices? Specify reason.
3. Draw the net of a cone.