

WORK SHEET

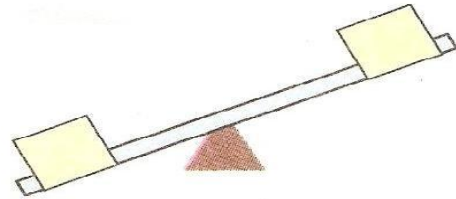
Date_____

Month_____

Competency: Understanding Basic Concepts

1. Which of the things will make the see – saw go up and go down? Write the correct number in the box.

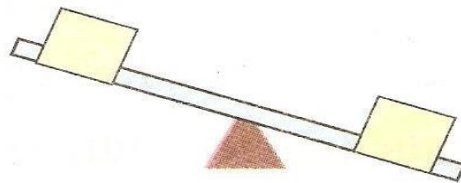
1



1




2



1




2



1



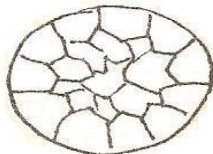
2



1




2



Tennis Ball

Football



Teacher's signature

Parent's signature