

SUMMATIVE ASSESSMENT-II, 2012

Subject : EVS

Time : 1 hrs.

Class : IVth

M.M. : 23

Name : Roll No.

PART-A

Q.1 Multiple Choice Questions. Tick (✓) the correct answer. 8×1=8

1.

The part of a plant that is below the surface of the earth.

(a) steam

☐

(b) root

☐

(c) fruit

☐
2.

The most attractive part of a flower

(a) sepals

☐

(b) stamen

☐

(c) petals

☐
3.

A four wheeled luxury coach pulled by one or two horses.

(a) tonga

☐

(b) buggy

☐

(c) safari

☐
4.

The bird which can't fly.

(a) sparrow

☐

(b) pigeon

☐

(c) ostrich

☐
5.

The currency of India.

(a) Dinar

☐

(b) Rupee

☐

(c) Dollar

☐
6.

The famous dance of Kerala

(a) Kalbeliya

☐

(b) Kathakali

☐

(c) Ghoomar

☐
7.

We can replace plastic bags by _____ bags.

(a) polythene

☐

(b) paper

☐

(c) cloth

☐
8.

The earth completes one rotation in _____ hours.

(a) 32

☐

(b) 24

☐

(c) 48

☐

Q.2 Fill in the blanks : 5×1=5

1.

Water changing into ice is an example of _____ .
2.

An apple falling from a tree is due to _____ force.

Cont....

3. _____ is described as 'Heaven on Earth'.
4. We take the help of a _____ to locate a house in a colony.
5. Dal Lake is a famous tourist spot of _____ .

Q.3 Circle the odd one and give reason for your answer : 4×1=4


1. geyser oven bicycle refrigerator
-
-
2. water sugar ice steam
-
-
3. aeroplane train cycle bus
-
-
4. saffron clove caper cashew
-
-

Q.4 Understand the relationship and complete the following : 2×1=2


1. running bird : ostrich : : swimming bird :
2. storage foot : radish : : storage stem :

Q.5 Identifiy the picture : 4×1=4


(a)



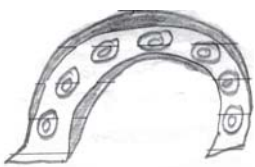
(b)



(c)



(d)



SUMMATIVE ASSESSMENT-II, 2012

Subject : **EVS**

Time : **1 hrs.**

Class : **IVth**

M.M. : **37**

PART-B

Q.1 Answer the following questions in one sentence. 5×1=5

1. Name any two arboreal animals ?
2. What are the main modes of transport in villages ?
3. Who sells flowers in the ?
4. What is force ?
5. Name the three layers of the earth.

Q.2 Answer the following questions in two sentences : 6×1½=9

6. Why is open dumping a harmful method of disposing garbage ?
7. What places do the following colours on a map represent ?
(a) white (b) blue (c) green (d) brown
8. Where does the code number figure on our bank notes ?
9. Why do vultures have strong and curved beaks ?
10. What are aquatic animals ? Name any three.
11. What is a horse shoe ? How is it helpful ?

Q.3 Answer any of eight of the following questions in three/four sentences. 8×2=16

12. Why is the camel called 'ship of the desert' ?
13. What is the function of a flower in a plant ?
14. What are the functions of a root ?
15. How are beaks useful to birds ?

Cont....

16. What is the difference between a coin and a note ?
17. How are bricks made ?
18. How can we help to reduce waste ?
19. How are land and sea breeze caused ?
20. Name four sources of energy and four forms of energy.
21. Why should we look after public property and public spaces ?

Q.4 Draw the diagram**1×3=3**

Draw a labelled diagram the 'Water Cycle'.

OR

Draw a labelled diagram of 'A Flower'.

Q.5 On the given political map of India mark the following :**1×4=4**

- | | |
|---------------|------------|
| * Delhi | * Jaipur |
| * Gandhinagar | * Srinagar |
