

Class IV

Maths

Q 1. With the help of match stick write down the following roman numbers:

22, 50, 49, 03, 31, 18, 19, 14, 36, 20

Q 2. See the calendar and write answers:


JUNE 2012						
SUN	MON	TUE	WED	THU	FRI	SAT
					1	2
3	4	5	6	7	8	9
10	11	12	13	14	15	16
17	18	19	20	21	22	23
24	25	26	27	28	29	30

(i) See the calendar. Write any ten six digits numbers using each digit once. Find greatest number and the smallest number also.

(ii) Learn the table from 1 to 20

(iii) Write the name of all triangles. Cut and paste it.

Q 4. Play the snakes and ladder game. Use two dice.



(i) How many snakes are there?

(ii) How many ladders are there?

(iii) The longest snake's head is on number.

(iv) The longest snake's tail is on number.

(v) Which snake is climbing the ladder? What is the starting number of the ladder?

.....

(vi) The ladder starting at 9 goes up to number.


(vii) The snake's tail is at 24. Where is it's head.....

(viii) The ladder starts at 28. It ends at number


(ix) What do you find between 80 to 100.....

(x) The tail is at 19. Where is the head?


Q 4. Draw the hands to show the time.




6.00




4.30




2.15




9.45




8.45



2.45



6.45



2.50