





Name Date : Class/Sec: II,

1. How much does each cost? Add the notes and coins and write (along with the symbol) in the tag:

•  ₹ (50, 100)

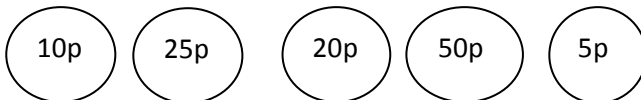
•  ₹ (2, 5, 10)

•  ₹ (20,10)

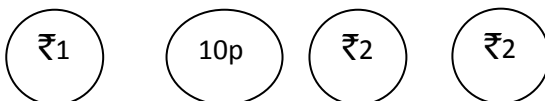
•  ₹ (1,5,10)

2. Read and do them

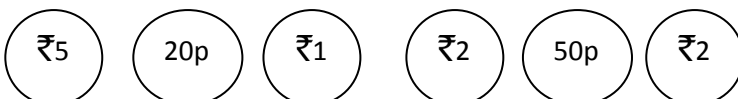
- Shade two coins worth 70p



- Shade three coins worth ₹ 5



- Shade four coins worth ₹10



3. Convert rupees into paise:

- ₹ 10 = p
- ₹ 25 = p
- ₹ 14 = p
- ₹ 7 = p

4. Solve:

	2	5	P
+	1	0	p

	5	5	P
-	1	0	p

		₹			p
	3	5		2	5
+	1	0		1	0

		₹			P
	5	9		2	5
-	4	3		1	1

5. Write the total money(write the total amount with the symbol):

- Rahul has three ₹10 notes and a ₹5 note
- Charu has five ₹1 notes and two ₹10 notes
- Tanmay has six ₹20 notes and one ₹2 notes
