

Class: VI
Subject : Social Science

Holiday Homework
(Geo: Ls 3& 4, Civics: Ls 2)

Q.1 Taking help of your atlas find out the latitudes and longitudes of the following:-




Place	Latitudes	Longitudes
1. Japan		
2. Newyork		
3. Moscow		
4. Dubai		
6. New Delhi		

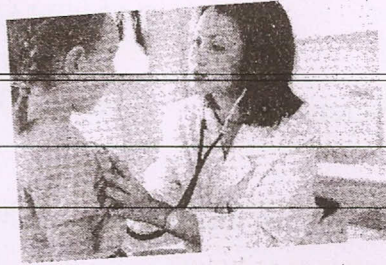


Q.2 On the basis of your knowledge of seasons in the southern and northern hemisphere, tick the places where you find the Indian cricket team wearing pullovers and warm clothes and places they wear their regular jersey in June

City	Warm clothes	Regular jersey
1. Islamabad		
2. Melbourne		
3. Sharjah		
4. New Zealand		
5. Dhaka		
6. England		



Q.3 Categorise the following according to the type of activity (Tertiary, Primary, Secondary)





Q.4 Read the passage and answer the following.

Mr. Kumar is a school teacher. He gave up a successful career in the city as a banker, to return to his village, to start a school for the village children.

1. Why did Mr. Kumar want to start a school in the village?

2. What values does Mr. Kumar's actions reflect?

Q.5 Subroto Das is a fan of soccer and wants to view the match between Italy and Argentina, his two favourite teams. The match starts at 4.00 pm U.K. time. When he switches his T.V on there is no telecast. So he calls Rajat who tells the time is 9.30 pm IST.

1. Why is there a difference in the timings? :

2. What value of Rajat is reflected here?