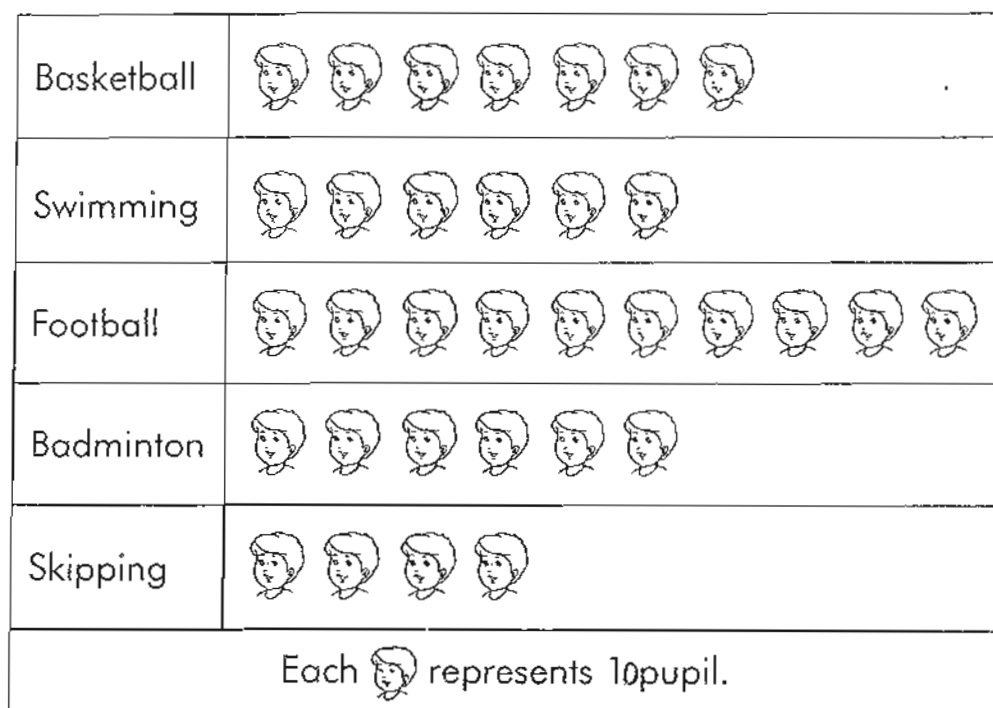


MATHS WORKSHEET
CLASS IV

- Q 1. This graph shows the favourite sports of the pupils in a class. Study the graph carefully and fill in each blank with the correct answer.



- _____ pupils like badminton.
- _____ pupils like football.
- The most popular sport is _____.
- The least popular sport is _____.
- The number of pupils who like _____ and _____ is the same.
- There are _____ more pupils who like basketball than skipping.
- There are _____ fewer pupils who like skipping than football.
- There are _____ pupils in the class altogether.

Q2. Complete the Following.

1. 81 367 is _____ more than 80 000. _____
2. By how much is 500 less than 22 000? _____
3. By how much is 6106 tens more than 30 300? _____
4. 23 000 is _____ less than 39 600. _____
5. _____ is smaller than $60\,000 + 1000$.
The largest possible whole number that makes the statement true is _____. _____
6. 58 510 is _____ less than 70 000. _____
7. 80 000 is 20 000 more than _____. _____
8. 4500 more than _____ is 10 000. _____
9. 1500 more than 60 670 is _____. _____
10. 38 hundreds and 19 tens is _____
more than 3270. _____
11. The smallest 5-digit number is _____. _____
12. The greatest 5-digit even number is _____. _____
13. Write down the largest 4-digit odd number. _____
14. Write down the smallest 4-digit even number. _____
15. Form the largest 5-digit even number from
7, 0, 2, 3, 8. _____
16. Write down the even numbers given in the box.

2006, 1000, 3167, 43 689

17. $67\ 423 = \boxed{} + 20 + 400 + 7000 + 60\ 000$

18. $8792 = 8000 + \boxed{} + 90 + 2$

19. $73\ 425 = 70\ 000 + 3000 + \boxed{} + 5$

20. $10\ 060 = \boxed{} + 60$

21. $8 + 700 + 8000 + 70\ 000 = \boxed{}$

22. 56 thousands and 27 tens written as a $\boxed{}$

23. 28 hundreds + 36 thousands = $\boxed{} + 1500$

24. 187 tens + 68 hundreds = $\boxed{} - 2347$

Q3

Write the correct answer in each blank.

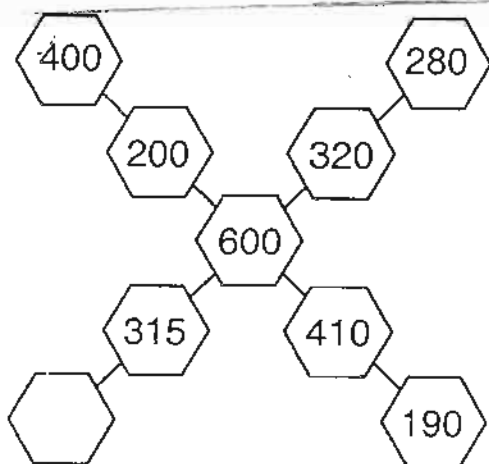
1. 200 less than 30 000 is ____.

2. 5500 more than 17 600 is ____.


3. 350 more than 29 988 ____.

Q4

Study the diagram carefully. What is the answer in the hexagon?



Look at the given digits carefully.
Use each digit once only.

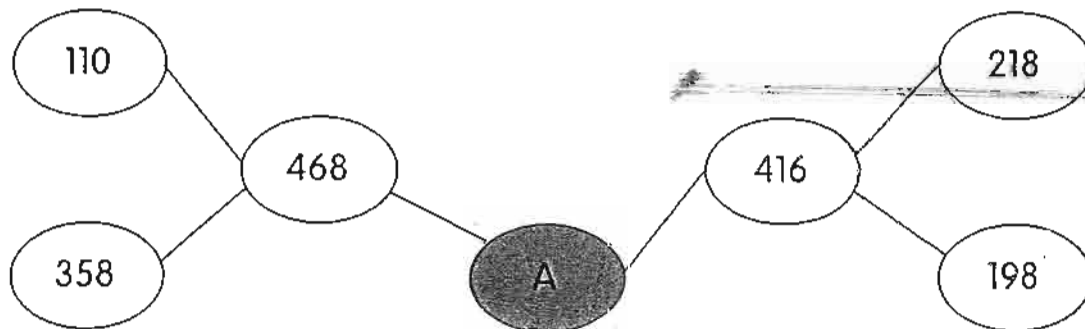


- Form the smallest 5-digit even number. _____
- Form the smallest 5-digit number. _____
- Write down a 5-digit odd number greater than 87 513. _____
- Which is the greatest 5-digit number smaller than 70 000? _____
- What is the smallest 5-digit number with 7 in the thousands place and 0 in the tens place? _____

Q6 I am a 4-digit whole number. The greatest digit is in the ones place. My thousands digit is four times the hundreds digit. My hundreds digit is twice the tens digit. What number am I? _____

Q7. I am a 5-digit even whole number. My thousands and hundreds digits are the greatest. My ten thousands digit is 4 less than the hundreds digit. My tens digit is 6 more than the ones digit and 1 more than 5. What number am I? _____

Q8 What number does A stand for in the diagram below?



Answer: _____