



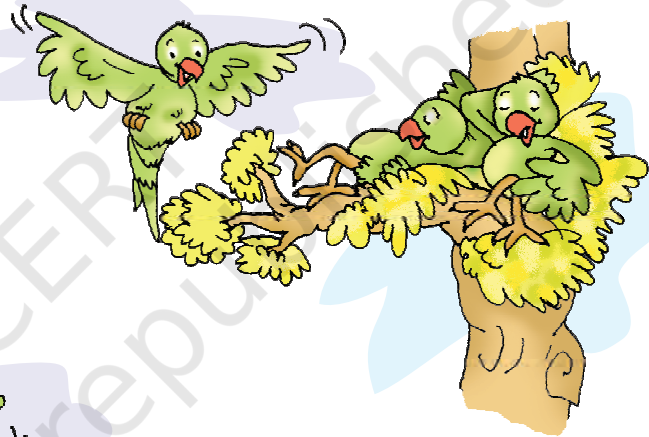
Addition

One more




One little parrot,
singing I love you,
One more joins in,
making them two.

Two little parrots,
resting on a tree,
One more joins in,
making them three.



Three little parrots,
looking for more,
One more joins in,
making them four.

Four little parrots,
wanting to dive,
One more joins in,
making them five.




Teachers Note

Refer to page no. 138 to develop understanding of addition.






How many altogether ?



2 cows and 1 cow is equal to 3 cows



3 children and 2 children is equal to 5 children








Flowers and Flowers = Flowers








Birds and Birds = Birds

How many altogether?

				
6	and	2	=	8

				
<input type="text"/>	and	<input type="text"/>	=	<input type="text"/>

				
<input type="text"/>	and	<input type="text"/>	=	<input type="text"/>

				
<input type="text"/>	and	<input type="text"/>	=	<input type="text"/>





How many altogether?


4	+	3	=	7

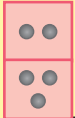
<input type="text"/>	+	<input type="text"/>	=	<input type="text"/>

<input type="text"/>	+	<input type="text"/>	=	<input type="text"/>



Addition


 $2 + 3 = 5$


 $2 + 3 = 5$

$4 + 2 =$

$5 + 1 =$

$3 + 6 =$

$7 + 0 =$

$0 + 9 =$

$4 + 2 =$

$5 + 1 =$

$3 + 6 =$


$7 + 0 =$

$0 + 9 =$






Addition




$$3 + 2 = \boxed{5} \text{ balloons}$$



$$3 + 0 = \boxed{3} \text{ balloons}$$




$$0 + 2 = \boxed{}$$



$$4 + 0 = \boxed{}$$



$$5 + 0 = \boxed{}$$




$$3 + 4 = \boxed{}$$






Addition



3


+




4

=


7



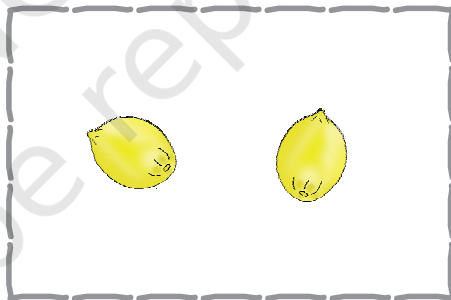
+




=




+



=



+



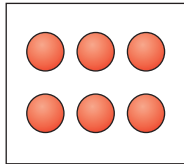
=





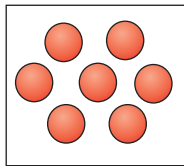
Add and Match

$3 + 2$



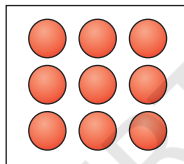
$3 + 3$

$4 + 2$



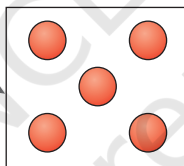
$2 + 3$

$3 + 4$



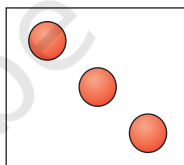
$0 + 8$

$8 + 0$



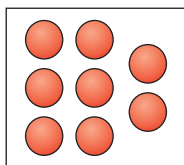
$3 + 6$

$6 + 3$



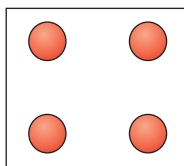
$5 + 2$

$2 + 1$



$1 + 2$

$1 + 3$



$3 + 1$



 Add

$2 + 7 = \square$

$3 + 5 = \square$

$4 + 0 = \square$

$2 + 2 = \square$



$1 + 3 = \square$

$4 + 1 = \square$

$0 + 2 = \square$

$3 + 4 = \square$

$$\begin{array}{r} 3 \\ + 6 \\ \hline \end{array}$$

$$\begin{array}{r} 5 \\ + 2 \\ \hline \end{array}$$

$$\begin{array}{r} 3 \\ + 3 \\ \hline \end{array}$$

$$\begin{array}{r} 0 \\ + 8 \\ \hline \end{array}$$

$$\begin{array}{r} 6 \\ + 3 \\ \hline \end{array}$$

$$\begin{array}{r} 1 \\ + 7 \\ \hline \end{array}$$

$$\begin{array}{r} 2 \\ + 3 \\ \hline \end{array}$$

$$\begin{array}{r} 5 \\ + 0 \\ \hline \end{array}$$

$$\begin{array}{r} 3 \\ + 4 \\ \hline \end{array}$$





Write the missing numerals

$$\square + \square = 5$$

$$\square + \square = 6$$

$$\square + \square = 7$$

$$\square + \square = 3$$

$$\square + \square = 4$$

$$\square + \square = 9$$

$$\square + \square = 8$$

$$\square + \square = 1$$

