




CLASS IV SOCIAL SCIENCE HW WORKSHEET

TOPIC-THE SOUTHERN PLATEAUS

SUBMISSION DATE-

Q1. Given below are some pictures of important monuments/places. Look at them carefully . Name the place/monument and the state in which it is located.

Q2.Match the following using different colours in the blank columns(use light shades only):

Panna city		Godavari	
Alphonso mangoes		Andhra Pradesh	
Bidri work		Orissa	
Rath yatra		Mumbai	
Ganga of the south		Diamonds	

Q3. Look at the given table . **Colour the boxes** which contain names **of rivers with blue colour.**

Godavari	Nilgiri	Hyderabad	Krishna	Bokaro	Tirupati
Arabian sea	Kanha	Mahanadi	Kaveri	Kuchipudi	Narmada