

1. What is the place value of underlined digit in the given number as shown below?




a) 5000

b) 4000

c) 400

d) 8

2. Choose the correct answer as per the price of mobile phones shown in the given picture.



a) $6040 > 6004$

b) $6004 > 6040$

c) $6040 < 6004$

d) $6040 = 6004$

3. Arrange the prices of given objects in ascending order.



a) 5831,1358,3185,8135

b) 1358,3185,5831,8135

c) 3185,8135,5831,1358

d) 8135,5831,5831,1358

4. What will be the greatest number by using digits shown in the following picture?



a) 2573

b) 7532

c) 3752

d) 5732

5. What symbol of roman number system will be used for 5 ?



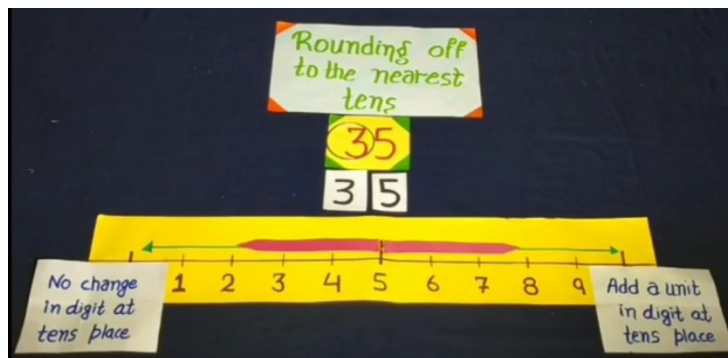
a) V

b) L

c) C

d) X

6. Round off the number given below to the nearest tens.



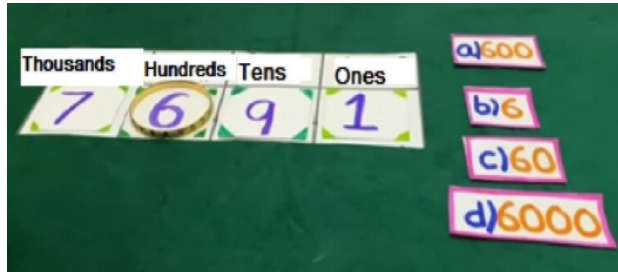
a) 10

b) 30

c) 40

d) 50

7. Write the face value of 6 in 7691.



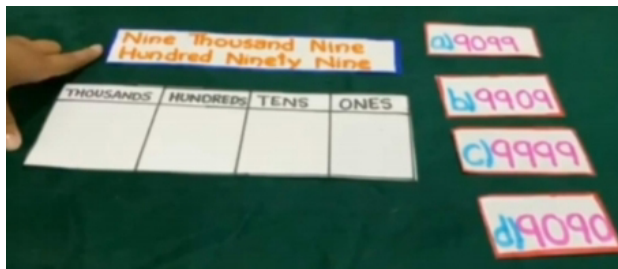
a) 600

b) 6

c) 60

d) 6000

8. Which number among the following should be written as Nine Thousand Nine Hundred Ninety Nine?



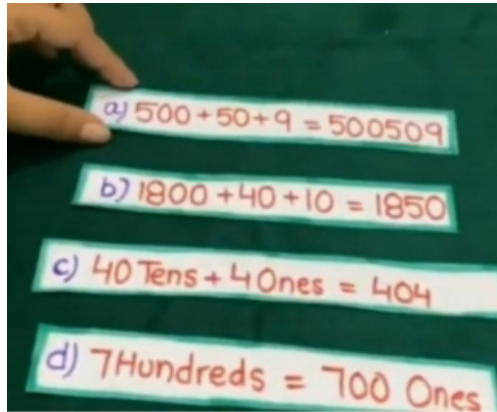
a) 9099

b) 9909

c) 9999

d) 9090

9. Which statement is correct?




a) $500 + 50 + 9 = 500509$

b) $1800 + 40 + 10 = 1850$

c) $7 \text{ Hundreds} = 700 \text{ Ones}$

d) $40 \text{ Tens} + 4 \text{ Ones} = 404$

10. Write the number according to the given picture.



a) 534

b) 435

c) 345

d) 453

11. How much amount does Mandeep have according to the given picture?



a) 557

b) 357

c) 375

d) 705

12. How much amount is deposited in Harman's bank account as shown on 12th May 2020?

Date	Amount deposited	Amount withdrawn	Balance
12-5-2020	408	-	408
18-5-2020	372	-	780
15-6-2020	28	-	808

a) Eight hundred eight

c) seven hundred eighty

b) three hundred seventy two

d) four hundred eight

Answer key

Question no.	answer
1	c
2	a
3	b
4	b
5	a
6	c
7	a
8	c
9	b
10	a
11	c
12	d

