

WEEKEND WORKSHEET – IV

MATHEMATICS

Class ▶

IV

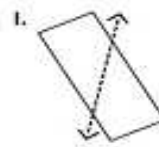
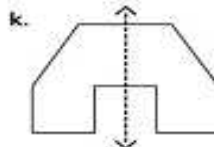
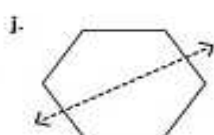
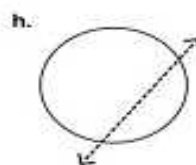
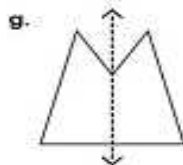
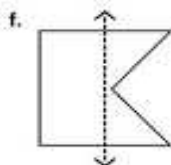
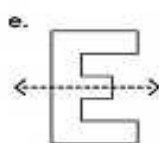
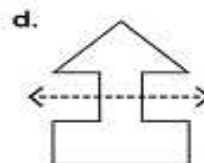
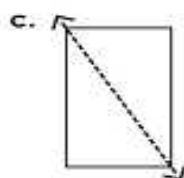
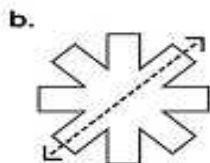
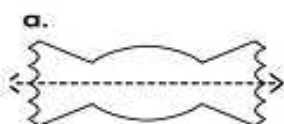
Section ▶

Date ▶

Name ▶

Roll No. ▶

Tell whether the dotted line on each shape represents a line of symmetry. Write **yes** or **no**.



Draw the second half of each symmetrical letter.



The pictures on the left have been folded on a line of symmetry. Circle the shape you would see when each paper is unfolded.

