

Reg. No. :

Code No. 2029

Name :

**Second Year – JUNE 2016
SAY / IMPROVEMENT**

Time : 2 Hours
Cool-off time : 15 Minutes

Part – III

GEOGRAPHY

Maximum : 60 Scores

(Map of India to Accompany)

General Instructions to Candidates :

- There is a 'cool-off time' of 15 minutes in addition to the writing time of 2 hrs.
- You are not allowed to write your answers nor to discuss anything with others during the 'cool-off time'.
- Use the 'cool-off time' to get familiar with questions and to plan your answers.
- Read questions carefully before answering.
- All questions are compulsory and only internal choice is allowed.
- When you select a question, all the sub-questions must be answered from the same question itself.
- Calculations, figures and graphs should be shown in the answer sheet itself.
- Malayalam version of the questions is also provided.
- Electronic devices except non-programmable calculators are not allowed in the Examination Hall.

നിർദ്ദേശങ്ങൾ :

- നിർദ്ദിഷ്ട സമയത്തിന് പുറമെ 15 മിനിറ്റ് 'കൂൾ ഓഫ് ടൈം' ഉണ്ടായിരിക്കും. ഈ സമയത്ത് ചോദ്യങ്ങൾക്ക് ഉത്തരം എഴുതാനോ, മറ്റുള്ളവരുമായി ആശയവിനിമയം നടത്താനോ പാടില്ല.
- ഉത്തരങ്ങൾ എഴുതുന്നതിന് മുമ്പ് ചോദ്യങ്ങൾ ശ്രദ്ധാപൂർവ്വം വായിക്കണം.
- എല്ലാ ചോദ്യങ്ങൾക്കും ഉത്തരം എഴുതണം.
- ഒരു ചോദ്യനമ്പർ ഉത്തരമെഴുതാൻ തെരഞ്ഞെടുത്തു കഴിഞ്ഞാൽ ഉപചോദ്യങ്ങളും അതേ ചോദ്യനമ്പറിൽ നിന്ന് തന്നെ തെരഞ്ഞെടുക്കേണ്ടതാണ്.
- കണക്ക് കൂട്ടലുകൾ, ചിത്രങ്ങൾ, ഗ്രാഫുകൾ എന്നിവ ഉത്തരപേപ്പറിൽ തന്നെ ഉണ്ടായിരിക്കണം.
- ചോദ്യങ്ങൾ മലയാളത്തിലും നൽകിയിട്ടുണ്ട്.
- പ്രോഗ്രാമുകൾ ചെയ്യാനാകാത്ത കാൽക്കുലേറ്ററുകൾ ഒഴികെയുള്ള ഒരു ഇലക്ട്രോണിക് ഉപകരണവും പരീക്ഷാഹാളിൽ ഉപയോഗിക്കുവാൻ പാടില്ല.

1. Name the approach in Human Geography which was spread during 1930's.

- (a) Aerial differentiation (b) Post-Modernism
(c) Humanistic approach (d) Radical approach

(Score : 1)

2. Identify and categorize the given towns into medieval and modern towns.

Delhi, Hyderabad, Chennai, Kolkata.

(Scores : 2)

3. Cultural Geography is the sub-field of

- (a) Social Geography (b) Settlement Geography
(c) Population Geography (d) Economic Geography

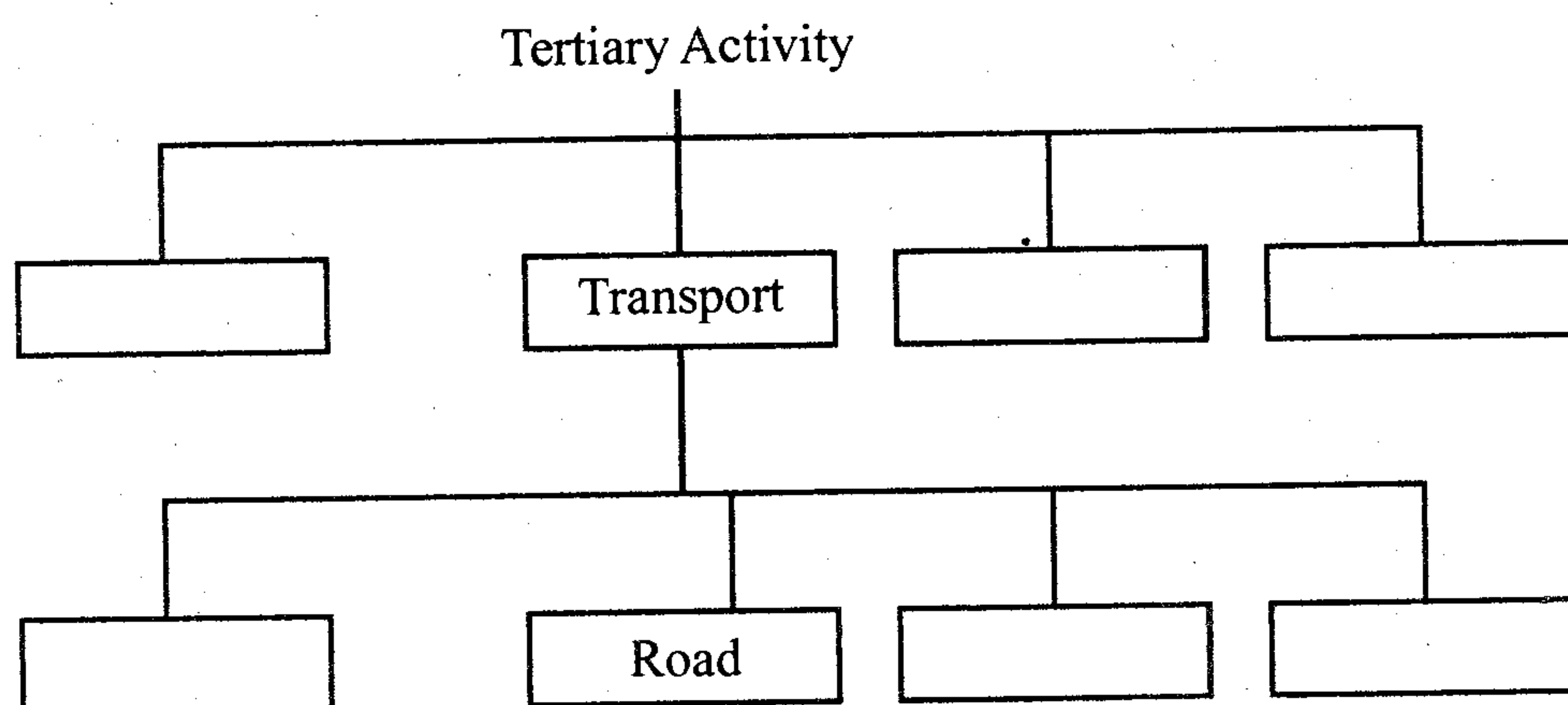
(Score : 1)

4. Mention the four geographical factors influencing the distribution of population. (Scores : 2)

5. Mention how countries are classified on the basis of Human Development Index (HDI).

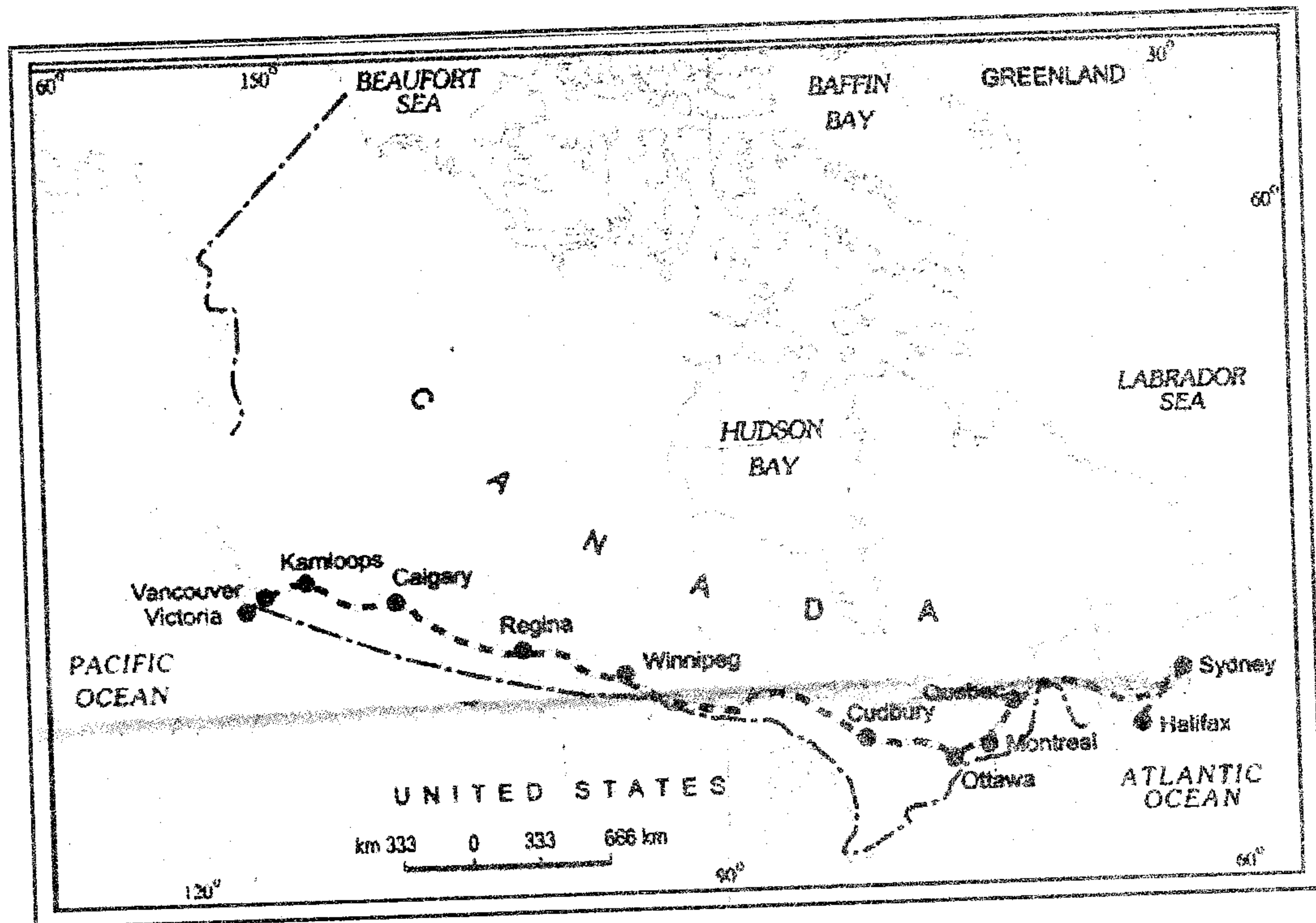
(Scores : 2)

6. Complete the given Flow chart :



(Scores : 3)

7. Identify the trans-continental railway shown in the given map and mention any two of its characteristics. (Scores : 2)



8. Mention characteristics of modern large scale manufacturing. (Scores : 3)

9. Match the following by correctly identifying the Headquarters of the given regional trading blocs :

Regional Trading Blocs	Headquarters
ASEAN	Vienna
OPEC	Minsk
EU	Jakarta
CIS	Brussels

(Scores : 2)

10. Analyse the problems of urban settlements.

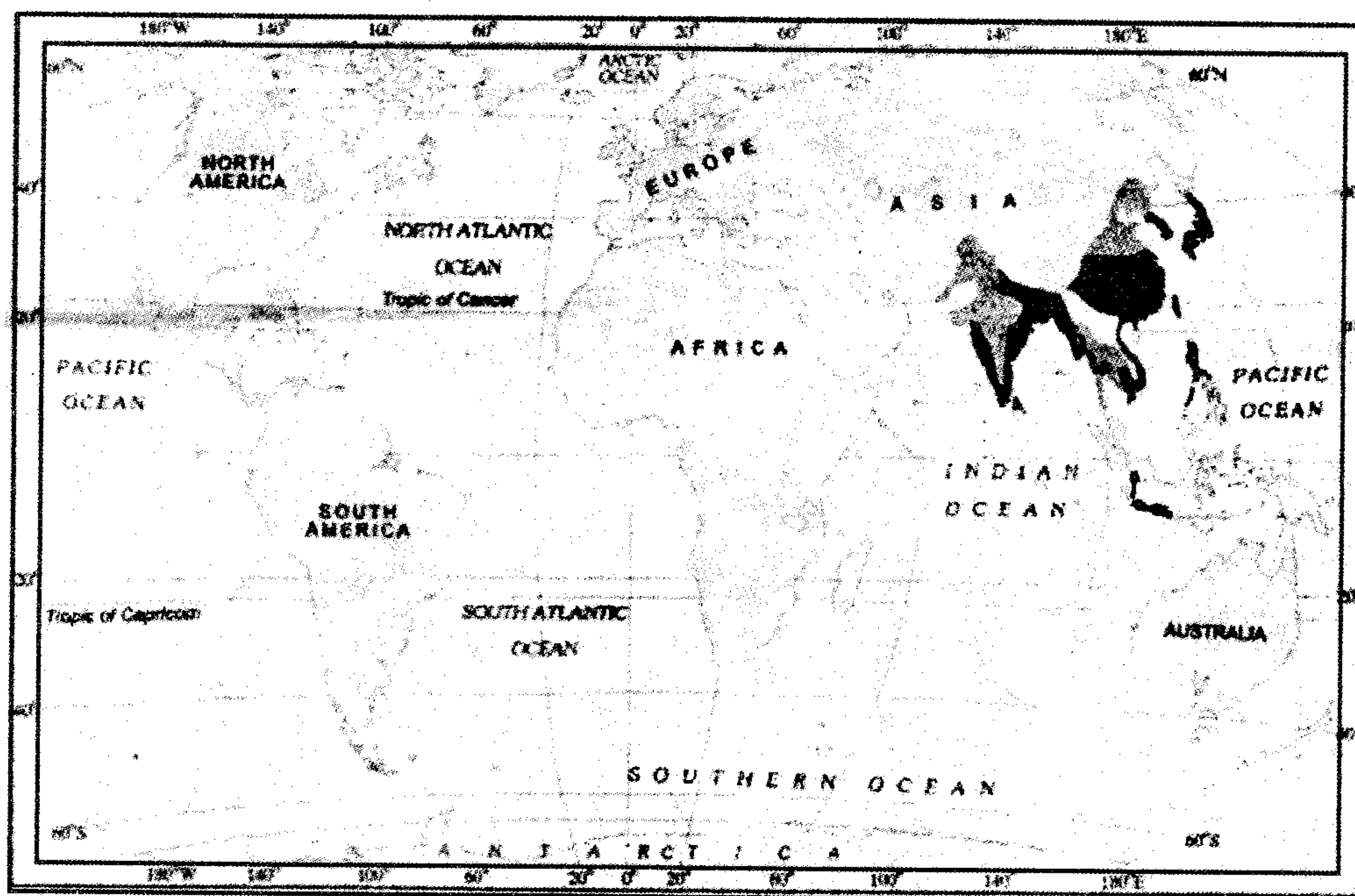
(Scores : 3)

11. Describe the rural-urban composition.

(Scores : 3)

12. Identify the agricultural system shown in the given map of the world and mention its characteristic features.

(Scores : 4)



13. Analyse the sources of Air pollution in India.

(Scores : 2)

14. (a) The National waterway linking Sadiya and Dhubri.

(b) India's largest trading partner as per Economic Survey 2010-2011.

(Scores : 2)

15. Define the concept of Sustainable Development.

(Scores : 2)

16. Name the following :

(a) The state which leads in the production of manganese in India.

(b) A nuclear power plant in Maharashtra.

(Scores : 2)

17. List the factors influencing location of Industries in India.

(Scores : 2)

18. Discuss the need and importance of water conservation in India.

(Scores : 3)

19. Explain about the problems of Indian agriculture.

(Scores : 6)

20. Discuss in brief about the Human Development in India.

(Scores : 2)

21. Complete the table by correctly identifying the speech areas and the language family.

Language Family	Speech areas
Austric	_____, _____
_____	Kerala, Tamil Nadu
Sino-Tibetan	_____, _____
_____	Punjab, Himachal Pradesh

(Scores : 3)

22. Describe about any three consequences of migration.

(Scores : 3)

23. Identify the geo-information and locate them in the given outline map of India.

- (a) A metropolitan city in Bihar
 - (b) A coal field in Tamil Nadu
 - (c) An industrial region of Kerala
 - (d) Headquarters of Western Railway
 - (e) A major port in Andhra Pradesh
-

(Scores : 5)