

# EVS REVISION ASSIGNMENT

## CLASS II

### TOPIC: HOW OUR BODY WORKS GROWING UP

Q1 Draw lines to match the correct pair.

Thinking •	blood •	breathing •	food •
Stomach •	brain •	heart •	lungs •

Q2. Tick the correct option.

a. A child is born with

306 bones \_\_\_\_

300 bones \_\_\_\_

206 bones \_\_\_\_

b. The smallest bone in our body is

Nose \_\_\_\_

ear \_\_\_\_

finger \_\_\_\_

c. Milk and milk products contains this which makes our bones strong

Iron \_\_\_\_

sugar \_\_\_\_

calcium \_\_\_\_





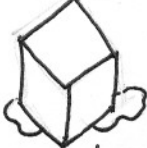

d. A 16 years old is an

Child \_\_\_\_

baby \_\_\_\_

teenager \_\_\_\_

Q3. Write the sense organ in action for each picture.

					
Loudspeaker	safety pin	book	rose	ice-cube	lemon

Q4. Why are bones and muscles important part of our body?

---

---

---

---

Q5. What are the functions of the following organs in our body

Brain \_\_\_\_\_ ✓

Heart \_\_\_\_\_

Stomach \_\_\_\_\_

Q6. Draw and label the stages in the growth in a plant.

_____	_____	_____
-------	-------	-------

Q7. Learn the spellings of different body parts.



Can you find the names of at least ten body parts hidden in the grid below. Highlight them with yellow colour.



E	S	B	O	L	N	C	H	F	S
O	K	R	E	E	O	T	A	Y	T
C	I	A	M	G	S	K	N	E	O
L	N	I	H	S	E	I	D	Y	M
U	D	N	N	B	X	D	I	E	A
N	A	I	H	A	I	R	H	S	C
G	G	P	S	E	A	R	S	F	H
S	R	F	I	N	G	E	R	S	A