
Types of Houses

1) Fill in the blanks :

1. Stilt houses are made ten to eleven feet above the _____
2. _____ is a place having heavy rainfall.
3. To reach a stilt house _____ are used.
4. In Shimla houses are made of _____ or _____
5. We use _____ to reach our flat in a multistoreyed building.
6. House boats can be seen in _____ in Kashmir.

2) Match the following :

A	B
Mud Houses	Caravan()
Temperory Shelter	Rajasthan ()
Caravan	Tent ()
Asssam	Ice and Snow ()
Igloo	Heavy rainfall ()

Types of Houses

I. Fill in the blanks

1. A _____ house stands on wooden poles.
 2. _____ roofs help the snow to slide off easily.
 3. In _____ houseboats are found.
 4. An _____ is made of ice and snow.
 5. A _____ is a house on wheels.
 6. _____ houses are found in cities.
 7. We can see house boats in the _____ of Kashmir.
 8. _____ is a place having heavy rainfall.
 9. We use _____ to go up and down in a multistoried building.
-

II. Tick (✓) the right answer :

1. An Eskimo lives in a/an

tent ☐

igloo ☐

caravan ☐

2. Stilt houses are found in

Delhi ☐

Assam ☐

Rajasthan ☐

3. Houseboats are found in

Kashmir ☐

Kerala ☐

Delhi ☐

4. A stilt house stands on

Road ☐

Wooden Poles ☐

Roofs ☐

5. A tent is made of

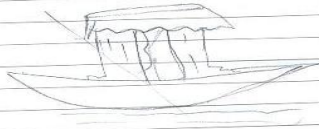
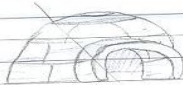
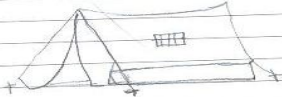
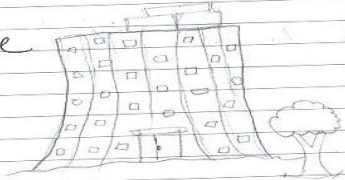
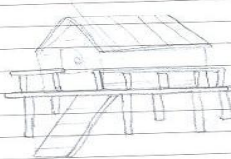
Canvas ☐

Wheels ☐

Mud ☐

Match the following

Match the following

1. Igloo	a) Kashmir	
2. Houseboat	b) cities	
3. Multistoreyed building	c) Assam	
4. Stilt house	d) Temporary house	
5. Tent	e) Eskimos	

III Question and Answer

1. What is an igloo ?-

2. Why do houses in hilly areas have sloping roofs ?

Transport

I) Fill in the blanks :

1. A train moves on _____
2. A _____ checks the tickets of the people who travel by train.
3. Early man had to travel on _____ or on animals.
4. _____ is the fastest means of transport.
5. A _____ carries luggage at the railway station.
6. A _____ is a place where a road and a railway track cross each other.
7. A level crossing helps to avoid _____

II) Name the following :

1. Name any two means of

- Land Transport _____
- Water Transport _____
- Air Transport _____

III) Choose the correct answer :

1. The [Vendors/Coolies]sell things at the railway station.
 2. The uniform of [coolies/Vendors] is Red in colour
 3. A person who looks after everything at the railway station is [Guard / Station Master]
-

World of Plants

I Fill in the blanks

1. A plant has two parts _____ and _____.
2. Shoot lies _____ the ground and root lies _____ the ground.
3. The green colouring matter in the leaves is called _____.
4. Leaves are called _____ of a plant.
5. _____ leaves are used to colour hands and feet.
6. Tulse is a _____.
7. Rose is a _____.
8. Grapevine is a _____.
9. Pumpkin is a _____.

II Answer the following questions

1. What is chlorophyll ?

—

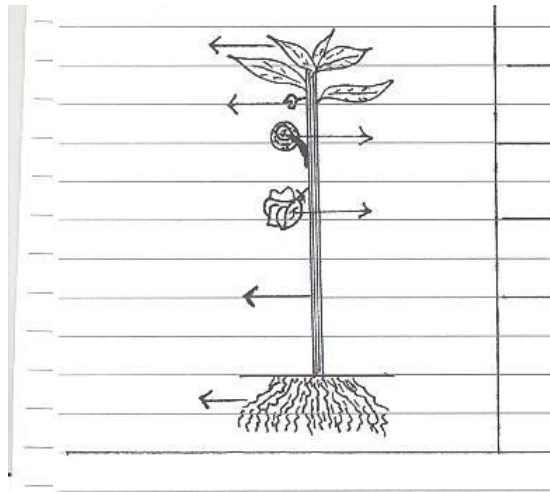
2. What is photosynthesis?

—

III Read the clues and solve the riddles

1. I can be used as a plate. _____
 2. I am used to make chutney. _____
 3. I make you mouth red. _____
 4. I make you palm red. _____
-

Label the parts of the plant



Draw, colour and label the parts of a plant (Practice)

The World of Plants.

I) Fill in the blanks :

1. The process by which plants make food is called _____.
2. Plants take in water from the soil through _____.
3. Plants breathe through pores present in their leaves called _____.
4. A _____ turns to a plant.
5. _____ hold the plants firmly in the soil.

II) Name the following :

1. Two trees _____, _____
 2. Two herbs _____, _____
 3. Two climbers _____, _____
 4. Two shrubs _____, _____
 5. The food factories of a plant . _____
 6. Two creepers _____, _____
 7. The part of the plant Above the ground . _____
 8. The part of the plant below the ground. _____
 9. Plants that have weak stems and grow around some support.

 10. Plants that have thin, hard woody stems and looks bushy.

-


III) Choose the correct answer :

1. Tulsi is (climber/ herb).
2. A green colouring matter present in the leaves is (chlorophyll/ photosynthesis).
3. Rose is (shrub/ trees).
4. Big and strong plants with thick trunks are (trees/ creepers) .
5. A grape vine is a (shrub/ climber).
6. Plants that have weak stems grow along the ground are (shrubs/ creepers).

IV) Write True or False :

1. Water helps to carry food to different parts of the body (_____).
2. Plants do not need water to grow (_____).
3. Leaves are of different shapes, colours and size. (_____)
4. Leaves have many uses. (_____)
5. Mehendi leaves are used to colour hands and feet. (_____)

V) Draw, colour and label the parts of the plant. :



The word of Plants

I) Name the following :

1. Any two trees : _____,

2. Ant 2 shrubs : _____,

3. Any 2 Herbs : _____,

4. Any 2 creepers: _____,

5. Any 2 climbers : _____,

6. The two main parts of a plant : _____,

7. The food factory of a plant : _____
8. The part of the plant above the ground : _____
9. The part of the plant under the ground : _____
10. Plants that have weak stems and grow around some support

11. Plants that have thin, woody stem and look bushy _____

II) Fill in the blanks :

1. _____ hold the plant firmly in the soil.
2. Roots suck in water and minerals from the _____
3. _____ leaves are used to colour hands and feet.

III) Choose the correct answer :

1. Leaves are of different shapes, colours and sizes[True/ False].
 2. Leaves have many uses [True/ False]
 3. A green colouring matter in the leaves are [Photosynthesis / Chlorophyll]
 4. Rose is a [Shrub/ Tree]
 5. A grape vine is a [Climber/Shrub]
 6. Plants that have week stem and grow along the ground are [Shrubs/ Creepers]
 7. Plants that are big and strong and have thick trunk are [Trees/Creepers]
 8. The process by which green plants make food is [Chlorophyll/ Photosynthesis]
-

BIRDS


I Fill in the blanks

1. Birds are animals having _____ legs.
2. Birds have feathers and _____.
3. Most birds can _____.
4. The _____ can rotate its neck backwards.
5. The _____ and _____ can imitate our voice.
6. _____ feathers cover the body.
7. _____ feathers keep the body warm.
8. _____ feathers form the wings of a bird.
9. _____ are the only animals which have feather.

II True or False

1. Birds have teeth. ()
2. All the birds can fly . ()
3. The peacock can fly for a very long distance ()

III Name these birds



IV Answer the following questions

- 1. What are the features that help a bird to fly?**

- 2. Name three types of feathers.**

Birds

1. Name two birds
2. Name the bird that can rotate its neck backwards to a great extent.
3. Name the bird that can imitate over voices.

II) Fill in the blanks :

1. _____ have two legs
2. _____ are the only animal which have feathers.

II) Write True or False :

1. Birds have teeth.
2. All the birds can fly.
3. The peacock can fly for a very long distance.

Beaks of Birds

I) Fill in the blanks :

1. _____ has a strong and hooked beak.
2. _____ has a broad, flat and spoon like beak.
3. A _____ has a sharp, chisel like beak..

I) Write True or False:

1. Different birds have different kinds of beaks and claws.
 2. Duck can easily dig soft mud near a pond to find worms.
 3. Birds use their beaks to eat.
 4. Sparrows, finches, pigeons and peacock have short, hard and pointed beaks.
-

Work We Do

I. Fill in the blanks :

1. The time which we use to relax is called _____ time.
2. A balance between _____ and _____ should be maintained.

II. Name the following :

1. Name three things that you do in your free time.

a) _____ b) _____ c) _____

2. Name any three occupations.

a) _____ b) _____ c) _____

Work we do

Fill in the blanks.

1. The time which we use to relax ourselves is called _____.
 2. People living in cities work in different places like factories , _____, hotels etc.
 3. We have hobbies like _____ and _____.
 4. A _____ makes furniture.
 5. A _____ makes the shoes.
 6. A _____ mends the tap.
 7. A _____ stitches clothes.
-

Means of Communication

I. Fill in the blanks :

1. Telegrams are mostly used to send _____ messages.
2. Letters and telegrams are the common means of _____.
3. We use an _____ to send a letter to another country.
4. A _____ collects the letters from the letter-box.
5. The telephone was invented by _____.
6. E-mail is sent through a _____.

II. Expand :

1. S T D : _____
2. I S D : _____
3. E-mail : _____

III Underline the correct answer :

1. The television was invented by (Marconi / John Logie Baird)
2. We use (STD/ISD) to talk to people living in other states of our country.
3. If we want to send a message even more quickly than a telegram, we use a (letter / telephone)
4. We use (STD/ISD) to talk to people living in other countries.

IV. Name the following :

1. Any two means of individual communication.
a) _____ b) _____
 2. Any two means of mass communication.
a) _____ b) _____
-

Crawling Animals

I. Fill in the blanks :

1. _____ means to move slowly on one's feet.
2. Most of the crawling animals prefer _____ and _____ places.
3. A _____ catches a prey in its web.
4. _____ carry disease causing germs to our food.
5. _____ is a black and yellow flying insect that can sting.
6. _____ is an animal that eats ants.

II. Name the following :

1. Two animals which crawl :
a) _____ b) _____
2. Two insects which crawl as well as fly.
a) _____ b) _____
3. Two insects.
a) _____ b) _____
4. Two animals which are the enemies of crawling animals.
a) _____ b) _____
5. Two crawling animals which suck the blood of animals and humans.
a) _____ b) _____

III. True or False :

1. Lice suck blood ()
 2. Spider is an insect ()
 3. Black ants live in rotten wood. ()
 4. Letters take a long time to reach their destination. ()
-

Crawling Animals.

Fill in the blanks.

1. _____ means to move slowly on one's feet.
2. _____ have six legs.
3. A Spider has _____ legs.
4. _____ live in the soil.
5. _____ is an animal that eats ants.
6. _____ carry disease causing germs to our food.
7. A _____ catches a prey in its web.
8. _____ is a black and yellow flying insect that can sting.

Name the following

1. Any two insects that crawl as well as fly._____.
 2. Any two animals that suck blood on the bodies of animals and animals.
_____.
 3. Any two enemies of crawling animals.
_____.
 4. Any two crawling animals
_____.
 5. Any two crawling animals that are found under dead leaves, rocks or on damp ground.
_____.
-

Soil

FILL IN THE BLANKS

1. _____ is the uppermost LAYER OF THE Earth's crust.
2. _____ get water and minerals from the soil.
3. _____ is the best soil for growing plants.
4. Soil is formed by breaking up of _____.
5. _____ is very sticky soil and is used for making pots and toys.
6. _____ contains the dead remains of plants and animals.

WRITE TRUE OR FALSE

1. Soil is formed in a number of layers. _____
2. Loam contains both gravel and clay. _____
3. Sand is mixed with cement and used for making buildings. _____
4. Soil is the home of many small animals. _____
5. Subsoil is the top layer of the earth. _____
6. Topsoil is light coloured. _____

Soil

I) Fill in the blanks :

1. _____ is the uppermost layer of the Earth's crust.
2. Plants get water and minerals from _____.
3. _____ is the best soil for growing plants.
4. Soil is formed by the _____ up of rocks.
5. _____ contains both sand and clay.
6. _____ contains the dead remains of plants and animals.
7. _____ is made up of very small particles.
8. _____ is used for making toys and pots.
9. _____ does not hold water.
10. _____ is made up of big particles.

II) Write True or False :

1. The bottom layer of soil is called as subsoil. (_____)
 2. Soil is the home of many small animals .(_____)
 3. Soil is formed in a number of layers. (_____)
 4. Gravel is the best soil for growing plants. (_____)
 5. Farmers add manure to the soil to grow better crops. (_____)
-

III) Name the following :

1. The different kinds of soil

a. _____

b. _____

c. _____

d. _____

2. The three layers of of soil

a. _____

b. _____

c. _____

Our Body

FILL IN THE BLANKS

1. A group of tissues form an _____.
2. The vessels taking blood away from the heart are called _____.
3. The _____ controls all the organs of the body.
4. The air which we breathe out contains _____ and _____.
5. Our body uses oxygen to burn food and release energy. This process is called _____.
6. _____ together with bones help the body and its part to move.
7. _____ system protects all the organs inside the body.
8. Cells of the same kind make a _____.
9. Circulatory system consists of the _____ and _____.
10. We learn , think and act with the help of our _____ system.

WRITE TRUE OR FALSE

1. The word artery comes from Greek word meaning air carrier. _____
 2. There are nine systems in our body. _____
 3. Five sense organs which help us to know the world around us.

 4. We breathe through our mouth. _____
 5. Our body uses carbon dioxide to burn food and release energy. _____
 6. Nervous system consists of the brain and the nerves. _____
 7. The blood supplies food, oxygen and other materials to all parts of the body.

 8. Our body has a framework of more than 200 bones. _____
-

MATCH THE FOLLOWING

- | | |
|-------------|------------------------|
| 1. Liver | Respiratory system () |
| 2. Windpipe | Digestive system () |
| 3. Vein | Skeletal System () |
| 4. Tongue | Excretory System () |
| 5. Kidney | Sense organ () |
| 6. Bones | Circulatory system () |

Our Body

I) Fill in the blanks :

1. The food changes into a fine paste in _____.
2. Juices present in the stomach and small intestine _____ the food.
3. The oxygen burns the _____ to give energy.
4. We breathe through our _____.
5. The hair present in the nose cleans the air by catching _____ and _____ particles.
6. The chest _____ when we breathe in and _____ when we breathe out.
7. The vessels bringing blood towards the heart are called _____.
8. The word _____ comes from Greek word meaning air carrier.
9. If all our nerves are joined end to end they will go round the equator _____ times.
10. The waste matter in the form of expired air is _____ gas.

II) Name the following :

1. The organs of respiration.
_____, _____
 2. The gases involved in the process of respiration.
_____, _____
 3. The air we breathe out contains
_____, _____
 4. The process of removing waste matter from our body.

 5. The thread like tubes called blood vessels
_____, _____
-

6. The system that consists of brain and nerves.

_____ , _____

7. The system which helps to produce babies

8. The system that takes food and changes its form to give us energy

9. Muscular system consists of

_____ and _____

10. The system that gives shape and support to our body.

III) Write True or False :

1. The food which is not useful goes into the large intestine and is sent out through rectum and anus . []

2. Our body uses oxygen to burn food and release energy. []

3. The arteries are the blood vessels which take the blood away from the heart. []

4. The brain receives messages and gives orders for action. []

5. More than two thirds of our body is made up of water. []

The Earth and The Moon

FILL IN THE BLANKS

1. The flat ends of the earth are called the _____.
2. _____ of the earth's surface is covered with water.
3. When it is _____ in India, it is night in _____.
4. The moon takes _____ days to revolve once round the earth.
5. Sometimes we do not see the _____ up face of the moon at all. It is called the _____ moon

NAME THE FOLLOWING

1. A group of stars that forms interesting patterns in the sky . _____
2. Name two constellations. _____, _____
3. Any two phases of the moon. _____, _____
4. Two movements of the earth. _____, _____
5. The planet that looks like an orange. _____, _____
6. The natural satellite of earth. _____

The Earth and the Moon

I) Fill in the blanks :

1. The flat ends of the earth are called _____.
2. The _____ earth causes day and night.
3. _____ are caused due to the revolution of the earth.
4. The earth rotates on its _____.
5. The heavenly body that revolves round a planet is called _____.
6. The moon revolves round the earth once in _____ days.
7. _____ is our nearest neighbour in space.
8. When we see the whole lit up face of the moon it is called _____.

II) Name the following :

1. The imaginary line between north pole and south pole _____
 2. Time taken for one rotation . _____
 3. Time taken for one revolution. _____
a) Any two constellations. a) _____ b) _____
 4. Two types of movements of the earth.
a) _____ b) _____
-

III) Choose the correct answer :

1. [$\frac{1^{th}}{4}$ / $\frac{3^{th}}{4}$] of the earth surface is covered with water.
2. The earth revolves round the (moon/sun).
3. The part of the earth which faces the sun has (day/ night).
4. Soon after the new moon is (full moon/ crescent moon)
5. The earth revolves round the sun from (west to east / east to west).

IV) Write True or False :

1. The earth stands still in space. []
 2. When it is day in India, it is night in America. []
 3. The moon has light of its own. []
 4. The earth gets its light from the sun. []
 5. The photographs of the earth show that the earth is flat. []
 6. The sun is not a star. []
-

Mapping Our Neighbourhood

I Fill in the blanks

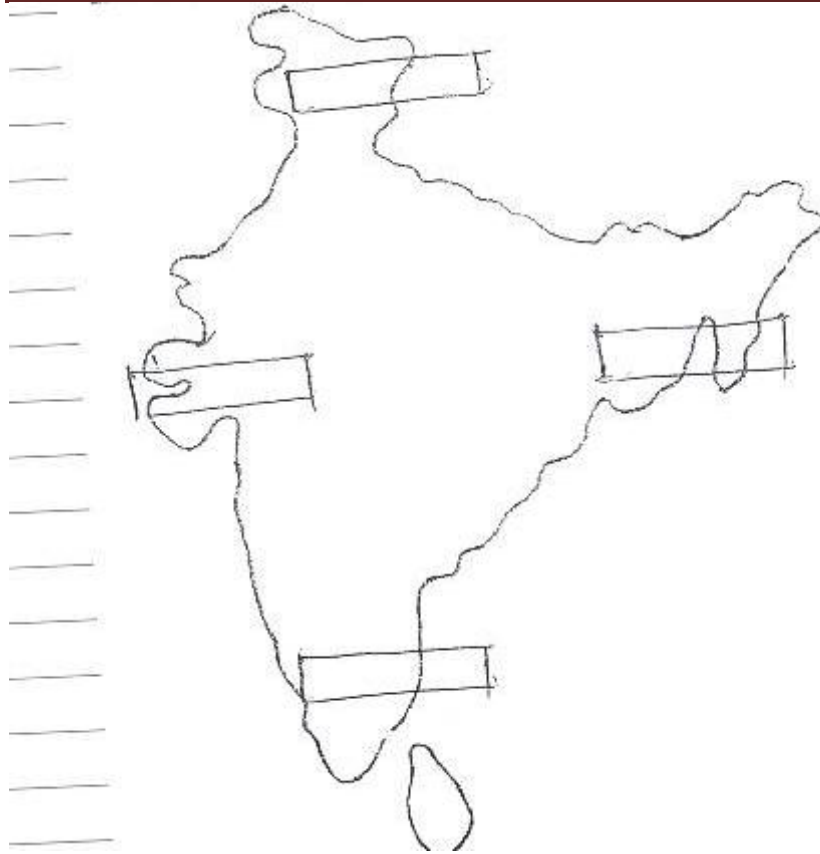
1. We can find a place with the help of a _____.
2. A _____ is a rough drawing.
3. A _____ is a drawing made to scale.
4. The four main directions are _____, _____,
_____ and _____.
5. All maps have _____ at the top.
6. A _____ helps to find directions.
7. The sun rises in the _____.
8. The sun sets in the _____.
9. The needle of a compass is always points to the _____.
10. It is easy to find _____ it we have a compass.

II Answer the following questions

1. Name the four directions.

2. How do maps or sketches help us?

III In the given map of India write the four directions and label three waterbodies



IV Name the following :

1. Name any three trees

_____, _____, _____.

2. Name any two herbs

_____, _____.

3. Name any two shrubs.

_____, _____.

4. Any two climbers.

_____, _____.

5. Any two creepers.

_____, _____.

6. Any three plants that you have heard of but never seen

_____, _____, _____.

Underline the correct answer

1. Trees shed their leaves in the (autumn / spring) season.

Fill in the blanks

2. Roots holds the plant _____ in the soil.
3. Roots suck in _____ and _____ from the soil.

Mapping my neighbourhood

I) Fill in the blanks :

1. A _____ is a rough drawing.
2. All maps have _____ at the top.
3. A _____ helps to find directions.
4. A map is a drawing made to _____.
5. The sun rises in the _____ and sets in the _____.

II) Choose the correct answer :

1. The needle of the compass always points to the (north / south)
2. A (sketch / map) is a rough drawing.
3. A (map/sketch) is a drawing made to scale.
4. When we are facing the rising sun in the morning, we actually face the (East/ West).

IV) Name the following :

1. Name the four directions .
 2. An instrument that helps to find directions.
-

🌸 Mark the directions, Arabian Sea, Bay of Bengal and Indian Ocean on the Map [India]



Mapping my neighbourhood

1) Fill in the blanks :

1. The sun rises in the _____ and sets in the _____
 2. _____, _____, _____ and _____ are the four main directions.
 3. When we use a _____, directions are very useful.
 4. All maps have _____ at the top, _____ towards the bottom _____ to the right and _____ always to the left of the map.
 5. A _____ is an instrument which helps to find the directions.
-

Living Things

I) Name the following :

1. Two animals that live in water.

2. Two animals that crawl on land.

3. Two animals that live on land.

4. Two animals that have horns.

5. Two animals that live both on land and water.

II) Fill in the blanks :

1. Plants take water from the soil through _____.

2. The green colouring pigment present in the plant is called _____.

3. The process of making food by the plants is called _____.

4. _____ breathe through pores in their leaves.

5. A _____ turns into a plant.

6. A _____ is a mammal which lives in water.

III) Write True or False :

1. All living things can breathe. []
2. Plants do not need food and water. []
3. A Whale gives birth to baby whales. []
4. Fish breathe through gills. []
5. A seed turns into a plant.
-

Animals are useful

I) Name the following :

1. Name any two domestic animals.

_____, _____

2. Name two pet animals.

_____, _____

3. The animal that carry heavy load.

4. The animal that gives us wool.

5. The animal that gives us milk.

II) Fill in the blanks :

1. Hens eat _____ and _____.

2. The silk worm gives us _____.

3. The honey bee gives us _____.

4. The oxen are used to _____ the fields.

5. The _____ makes the soil fertile.

6. Hen gives us _____.

Animals are useful

Name the following

1. Two domestic animals. _____ , _____.

2. Two pet animals. _____ , _____.

3. The animal that give us wool. _____, _____.

4. The animal that carry heavy loads for us. _____

5. The animal that helps to plough the field _____.

Fill in the blanks.

1. The _____ makes the soil fertile.

2. The _____ carries logs of wood.

3. The _____ gives us silk.

4. The _____ gives us honey.

5. The hen gives us _____.
-

Nature's Gift

FILL IN THE BLANKS

1. Things given to us by nature are called _____ resources.
2. Living things cannot live without _____.
3. The _____ is the only planet to have water.
4. _____ is the uppermost layer of the earth's crust.
5. A _____ treat sick or injured animals.
6. The Government of India has started 'Project Tiger' to protect the _____.

II. WRITE TRUE OR FALSE

1. We can not see air but we can feel it. _____
2. Without water, life is possible. _____
3. We must take care of plants and animals. _____
4. We should throw the garbage on the road. _____
5. We should water the plants regularly. _____
6. We should tease animals. _____
7. If air or water gets dirty it can cause many diseases. _____

NAME THE FOLLOWING

1. Three layers of the soil.
 - a.
 - b.
 - c.
 2. Three natural resources.
 - a.
 - b.
 - c.
-

3. Three things that cause noise pollution.

a.

b.

c

4. The plant that has water. _____

5. The uppermost layer of the earth's crust. _____

6. The project started by the Government of India to protect the tiger.

Nature's Gift

FILL IN THE BLANKS

1. _____ is the uppermost layer of the earth's crust.
2. The _____ is the only planet to have water in it.
3. Loudspeakers, horns and loud music cause _____ pollution.
4. Noise pollution can make people _____.
5. _____ treats sick and injured animals.
6. The Government of India has started _____ to protect the tiger.
7. If air or water gets dirty it can cause many _____.
8. Air becomes fresh by _____.

WRITE TRUE OR FALSE

1. We can see air but we cannot feel it. _____
2. Water is very important for us. _____
3. Water gets polluted by burning of garbage. _____
4. We must keep the earth clean and green. _____
5. The things which are given to us by nature are called Natural Resources.

Nature's Gifts

I) Fill in the blanks :

1. Things given to us by nature and which are very useful for us are called _____.
2. _____ is the upper most layer of the earth's crust.
3. _____ is the only planet to have water.
4. The government of India has started _____ to protect the tiger.
5. Loudspeakers, horns and loud music cause _____ pollution.

II) Choose the correct answer :

1. (Vet / Physician) treat sick or injured animals.
2. Air becomes fresh by (garbage / trees).
3. Water gets polluted because of (cattle bathing/ smoke from factories)
4. (Living things/ Non – living things) cannot live without air.

III) Write 'True' or 'False' :

1. Dirty air and water are called polluted air and water.
2. We should step on the flowerbeds.

IV) Name the following :

1. Name three layers of the soil.
 2. Name three types of pollution.
-

Water is Precious

I Fill in the blanks

1. Plants need water to _____.
2. The camel is known as the _____.
3. _____ makes food in its stem.
4. The inside of the Cactus is filled with _____ material.
5. Camel's _____ is made of fat.
6. One of the way of conserving water is _____ harvesting.
7. _____ helps us to digest our food.
8. _____ water whenever possible.
9. Cactus stores food in its _____.
10. _____ is a desert plant.

II Answer the following questions

1. What is rain water harvesting ?

2. List four ways to save water .

—

3. Explain how camel and cactus live without water for a long time.

III True or False

1. Plants and animals live in dry desert area require less water. (
 2. Cactus does not have leaves. ()
-

Water is Precious

1) Name the following :

1. A desert plant _____
2. Ship of the desert _____
3. A plant that does not have leaves _____

II) Write True or False :

1. We should leave the taps run while brushing our teeth _____
2. Use a bucket and a mug to have bath. _____
3. We should reuse water whenever possible. _____
4. Plants do not need water to grow. _____
5. A cactus plant makes food in its stem. _____
6. The camel can live without water for many days. _____

III) Fill in the blanks :

1. _____ helps us to digest our food.
 2. Plants need _____ to grow.
 3. The most important ways of conserving water is _____
 4. Water helps to eliminate _____ matter from our body.
 5. _____ makes food in the stem.
 6. The camel is known as the _____
-

Our Food

I Fill in the blanks :

1. Food gives us _____.
2. Milk is said to be a _____ food.
3. Food help us to _____ and stay _____.
4. Fruits and vegetable protect us from _____.
5. The food of small babies is _____.
6. Fruits and vegetables are rich in _____ and _____.

II Name the following

1. Name three energy giving food.

_____, _____,
_____.

2. Name three body building food.

_____, _____,
_____.

3. Name three Protective food.

_____, _____,
_____.

4. All types of food in proper amount.

_____, _____,
_____.

II Answer the following questions

1. What is a balanced diet ?

2. List some food items eaten by your family everyday.

—

3. Name three types (groups) of food.

Our Food

1) Fill in the blanks :

1. _____ gives us energy.
 2. _____ and _____ are two examples energy giving foods.
 3. _____ and _____ are two examples of body building foods.
 4. _____ is said to be a complete food.
 5. _____ and _____ are examples of two protective foods.
 6. We cannot live without _____.
 7. Fruits and vegetables are rich in _____ and _____.
 8. _____ foods protect us from diseases.
 9. _____ helps us to grow and stay healthy.
 10. We eat _____ types of food.
-

WORKSHEETS

1. The art of making things out of clay is called _____.
2. Early man used _____ for cooking and storing food.
3. Pots are fired in a _____ which is a kind of oven.
4. Before the _____ was invented, all pots were made with hand.
5. Clay was pinched between the finger and thumbs to form the _____ pot.
6. Coils were formed into rings and placed on top of each other to form a _____ pot.
7. Clay was put into a basket and dried and burned in fire to form the _____ pot.

WORKSHEETS

I. NAME THE FOLLOWING

1. Any two means of land transport.
2. Any two means of air transport.
3. Any two means of water transport.
4. The person who looks after everything at the railway station.
5. The means of transport which people use in villages.
6. Which means of land transport would you use to travel from Delhi to Mumbai?

II. FILL IN THE BLANKS

1. _____ pulled by dogs are used in areas where there is heavy snowfall.
2. People use animals such as _____ and _____ to travel and carry loads in hilly areas.
3. Early man had to travel on _____ or on _____.
4. _____ have made our world a small place to live in.
5. When the _____ was invented, travel became easier, faster and more comfortable.
6. _____ is the fastest means of transport.
7. A level crossing helps to avoid _____.
8. The airplane was invented by two brothers named _____ and _____.

III. MATCH THE FOLLOWING

- | | |
|------------|--|
| 1. Yard | Waves the flag at the railway station. |
| 2. Guard | Where bogies are washed |
| 3. Vendors | Carries luggage |
| 4. Coolie | moves on rails |
| 5. Train | sell things |
-

WORKSHEETS

I. FILL IN THE BLANKS

1. The green plants make food by the process of _____.
2. The tiny holes in the leaves are called _____.
3. Plants breathe through _____ in their leaves.
4. Fish breathe through the _____
5. All living things need _____ and _____.
6. The _____ is a mammal which lives in water.

II. NAME THE FOLLOWING

1. Any two living things _____, _____
2. Any two non living things _____, _____
3. Any two animals live in water _____, _____
4. Any two animals live on land _____, _____
5. Any two animals which have horns _____, _____

III. WRITE TRUE OR FALSE

1. The plant uses the green colouring pigment in the leaf to make food. _____
 2. All non living things produce their own kind. _____
 3. A seed turns into a plant. _____
 4. Plants use carbon dioxide for the process of photosynthesis. _____
 5. Plants take water and minerals from the soil through the leaves. _____
 6. Plants and animals are non living things. _____
 7. The touch me not plant closes its leaves when someone touches the plant. _____
-