



I. Look at the picture and write how you can conserve water.



1. _____
2. _____
3. _____
4. _____
5. _____
6. _____

II. With the help of given picture write the correct directions in the given blanks.



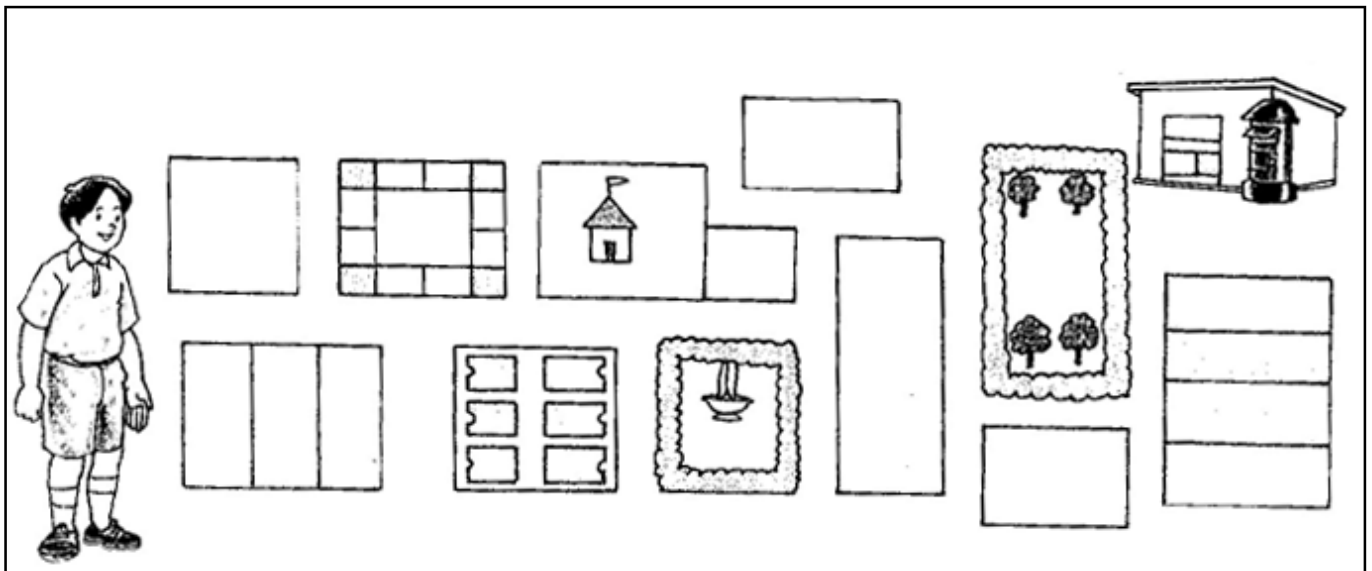
1. The school is to the _____ of my house.
2. The pond is in the _____ direction.
3. The garden is to the _____ of my house.
4. The hospital is towards the _____ direction of my house.

III. Look at the pictures and write how does water become dirty.




Ans. 1.) _____ 2.) _____
 3.) _____ 4.) _____

Write the landmarks on the way to post office.



Ans. 1.) _____ 2.) _____
 3.) _____ 4.) _____

IV Label the diagram of water cycle.



V. Encircle the uses of water in the following grid.

A	D	R	I	N	K	I	N	G	B
C	F	B	C	C	S	W	O	W	R
O	O	A	O	A	W	A	P	A	U
O	U	T	O	R	I	S	P	T	S
K	N	H	L	W	M	H	A	E	H
I	T	I	I	A	M	I	I	R	I
N	A	N	N	S	I	N	N	I	N
G	I	G	G	H	N	G	T	N	G
F	N	S	F	D	G	C	I	G	T
T	O	I	L	E	T	L	N	P	E
R	U	N	N	I	N	O	G	L	E
C	O	O	N	I	L	T	K	A	T
D	A	N	C	I	N	H	J	N	H
S	L	E	E	P	I	E	N	T	D
J	U	M	P	I	N	S	G	S	H