


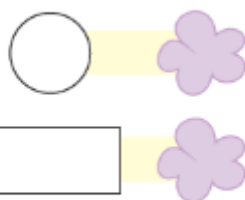
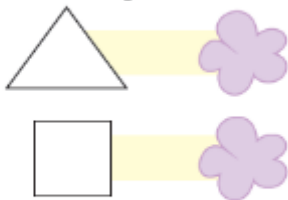
Chapter 9

Data Handling

Question 1:




Count the shapes in the above picture.




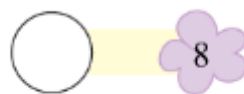
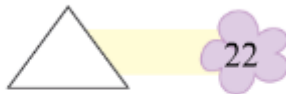
Name the shapes
that occurs the most

that occurs the least

Answer:



Count the shapes in the above picture.



Name the shapes
that occurs the most

Triangle

that occurs the least

Rectangle

Question 2:

Names						Number of letters
S	A	L	M	A		
J	O	S	E	P	H	
A	R	U	N			
C	H	I	N	T	U	
G	E	E	T	A		
A	S	H	A			
S	U	B	B	U		
A	H	M	A	D		
R	A	V	I			

How many names have four letters

How many names have five letters

How many names have six letters

How many times **S** comes in all the names taken together

How many times **A** comes in all the names taken together

Answer:

Names	Number of letters
S A L M A	5
J O S E P H	6
A R U N	4
C H I N T U	6
G E E T A	5
A S H A	4
S U B B U	5
A H M A D	5
R A V I	4

How many names have four letters

How many names have five letters

How many names have six letters

How many times **S** comes in all the names taken together

How many times **A** comes in all the names taken together