



Class: I
Subject: Mathematics
Practice Worksheet


NAME _____


DATE _____

A. Put <, > or = symbols in the circles:

11  18

10  4

17  17

11  19

B. Write the number names:

18 _____

14 _____

20 _____

C. Tick the smallest number in each group:

15	12	20
----	----	----

11	17	14
----	----	----

D. Arrange the numbers in ascending order:

12	20	15	19

E. Write tens and ones in their corresponding places:

20 =	Tens	Ones

16 =	Tens	Ones

F. Subtract the following:

T	O
1	8
-	1 0
<hr/>	
<hr/>	

T	O
1	7
-	1 1
<hr/>	
<hr/>	