

PUZZLER

After this bottle of champagne was shaken, the cork was popped off and champagne spewed everywhere. Contrary to common belief, shaking a champagne bottle before opening it does not increase the pressure of the carbon dioxide (CO_2) inside. In fact, if you know the trick, you can open a thoroughly shaken bottle without spraying a drop. What's the secret? And why isn't the pressure inside the bottle greater after the bottle is shaken? (Steve Niedorf/The Image Bank)



chapter

19

Temperature

Chapter Outline


- | | |
|--|---|
| 19.1 Temperature and the Zeroth Law of Thermodynamics | 19.4 Thermal Expansion of Solids and Liquids |
| 19.2 Thermometers and the Celsius Temperature Scale | 19.5 Macroscopic Description of an Ideal Gas |
| 19.3 The Constant-Volume Gas Thermometer and the Absolute Temperature Scale | |

In our study of mechanics, we carefully defined such concepts as mass, force, and kinetic energy to facilitate our quantitative approach. Likewise, a quantitative description of thermal phenomena requires a careful definition of such important terms as *temperature*, *heat*, and *internal energy*. This chapter begins with a look at these three entities and with a description of one of the laws of thermodynamics (the poetically named “zeroth law”). We then discuss the three most common temperature scales—Celsius, Fahrenheit, and Kelvin.

Next, we consider why the composition of a body is an important factor when we are dealing with thermal phenomena. For example, gases expand appreciably when heated, whereas liquids and solids expand only slightly. If a gas is not free to expand as it is heated, its pressure increases. Certain substances may melt, boil, burn, or explode when they are heated, depending on their composition and structure.

This chapter concludes with a study of ideal gases on the macroscopic scale. Here, we are concerned with the relationships among such quantities as pressure, volume, and temperature. Later on, in Chapter 21, we shall examine gases on a microscopic scale, using a model that represents the components of a gas as small particles.

19.1 TEMPERATURE AND THE ZEROTH LAW OF THERMODYNAMICS

 We often associate the concept of temperature with how hot or cold an object feels when we touch it. Thus, our senses provide us with a qualitative indication of temperature. However, our senses are unreliable and often mislead us. For example, if we remove a metal ice tray and a cardboard box of frozen vegetables from the freezer, the ice tray feels colder than the box even though both are at the same temperature. The two objects feel different because metal is a better thermal conductor than cardboard is. What we need, therefore, is a reliable and reproducible method for establishing the relative hotness or coldness of bodies. Scientists have developed a variety of thermometers for making such quantitative measurements.

We are all familiar with the fact that two objects at different initial temperatures eventually reach some intermediate temperature when placed in contact with each other. For example, when a scoop of ice cream is placed in a room-temperature glass bowl, the ice cream melts and the temperature of the bowl decreases. Likewise, when an ice cube is dropped into a cup of hot coffee, it melts and the coffee’s temperature decreases.

To understand the concept of temperature, it is useful to define two often-used phrases: *thermal contact* and *thermal equilibrium*. To grasp the meaning of thermal contact, let us imagine that two objects are placed in an insulated container such that they interact with each other but not with the rest of the world. If the objects are at different temperatures, energy is exchanged between them, even if they are initially not in physical contact with each other. **Heat is the transfer of energy from one object to another object as a result of a difference in temperature between the two.** We shall examine the concept of heat in greater detail in Chapter 20. For purposes of the current discussion, we assume that two objects are in **thermal contact** with each other if energy can be exchanged between them. **Thermal equilibrium** is a situation in which two objects in thermal contact with each other cease to exchange energy by the process of heat.

Let us consider two objects A and B, which are not in thermal contact, and a third object C, which is our thermometer. We wish to determine whether A and B



Molten lava flowing down a mountain in Kilauea, Hawaii. The temperature of the hot lava flowing from a central crater decreases until the lava is in thermal equilibrium with its surroundings. At that equilibrium temperature, the lava has solidified and formed the mountains.

QuickLab

Fill three cups with tap water: one hot, one cold, and one lukewarm. Dip your left index finger into the hot water and your right index finger into the cold water. Slowly count to 20, then quickly dip both fingers into the lukewarm water. What do you feel?

are in thermal equilibrium with each other. The thermometer (object C) is first placed in thermal contact with object A until thermal equilibrium is reached. From that moment on, the thermometer's reading remains constant, and we record this reading. The thermometer is then removed from object A and placed in thermal contact with object B. The reading is again recorded after thermal equilibrium is reached. If the two readings are the same, then object A and object B are in thermal equilibrium with each other.

We can summarize these results in a statement known as the **zeroth law of thermodynamics** (the law of equilibrium):

Zeroth law of thermodynamics

If objects A and B are separately in thermal equilibrium with a third object C, then objects A and B are in thermal equilibrium with each other.

This statement can easily be proved experimentally and is very important because it enables us to define temperature. We can think of **temperature** as the property that determines whether an object is in thermal equilibrium with other objects. **Two objects in thermal equilibrium with each other are at the same temperature.** Conversely, if two objects have different temperatures, then they are not in thermal equilibrium with each other.

19.2 THERMOMETERS AND THE CELSIUS TEMPERATURE SCALE

Thermometers are devices that are used to define and measure temperatures. All thermometers are based on the principle that some physical property of a system changes as the system's temperature changes. Some physical properties that change with temperature are (1) the volume of a liquid, (2) the length of a solid, (3) the pressure of a gas at constant volume, (4) the volume of a gas at constant pressure, (5) the electric resistance of a conductor, and (6) the color of an object. For a given substance and a given temperature range, a temperature scale can be established on the basis of any one of these physical properties.

A common thermometer in everyday use consists of a mass of liquid—usually mercury or alcohol—that expands into a glass capillary tube when heated (Fig. 19.1). In this case the physical property is the change in volume of a liquid. Any temperature change can be defined as being proportional to the change in length of the liquid column. The thermometer can be calibrated by placing it in thermal contact with some natural systems that remain at constant temperature. One such system is a mixture of water and ice in thermal equilibrium at atmospheric pressure. On the **Celsius temperature scale**, this mixture is defined to have a temperature of zero degrees Celsius, which is written as 0°C ; this temperature is called the *ice point* of water. Another commonly used system is a mixture of water and steam in thermal equilibrium at atmospheric pressure; its temperature is 100°C , which is the *steam point* of water. Once the liquid levels in the thermometer have been established at these two points, the distance between the two points is divided into 100 equal segments to create the Celsius scale. Thus, each segment denotes a change in temperature of one Celsius degree. (This temperature scale used to be called the *centigrade scale* because there are 100 gradations between the ice and steam points of water.)

Thermometers calibrated in this way present problems when extremely accurate readings are needed. For instance, the readings given by an alcohol ther-



Figure 19.1 As a result of thermal expansion, the level of the mercury in the thermometer rises as the mercury is heated by water in the test tube.

mometer calibrated at the ice and steam points of water might agree with those given by a mercury thermometer only at the calibration points. Because mercury and alcohol have different thermal expansion properties, when one thermometer reads a temperature of, for example, 50°C , the other may indicate a slightly different value. The discrepancies between thermometers are especially large when the temperatures to be measured are far from the calibration points.¹

An additional practical problem of any thermometer is the limited range of temperatures over which it can be used. A mercury thermometer, for example, cannot be used below the freezing point of mercury, which is -39°C , and an alcohol thermometer is not useful for measuring temperatures above 85°C , the boiling point of alcohol. To surmount this problem, we need a universal thermometer whose readings are independent of the substance used in it. The gas thermometer, discussed in the next section, approaches this requirement.

19.3 THE CONSTANT-VOLUME GAS THERMOMETER AND THE ABSOLUTE TEMPERATURE SCALE

The temperature readings given by a gas thermometer are nearly independent of the substance used in the thermometer. One version is the constant-volume gas thermometer shown in Figure 19.2. The physical change exploited in this device is the variation of pressure of a fixed volume of gas with temperature. When the constant-volume gas thermometer was developed, it was calibrated by using the ice

¹ Two thermometers that use the same liquid may also give different readings. This is due in part to difficulties in constructing uniform-bore glass capillary tubes.

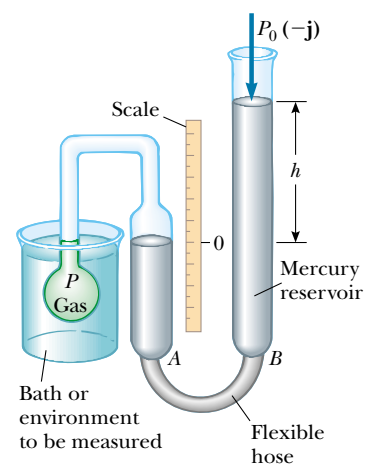


Figure 19.2 A constant-volume gas thermometer measures the pressure of the gas contained in the flask immersed in the bath. The volume of gas in the flask is kept constant by raising or lowering reservoir B to keep the mercury level in column A constant.

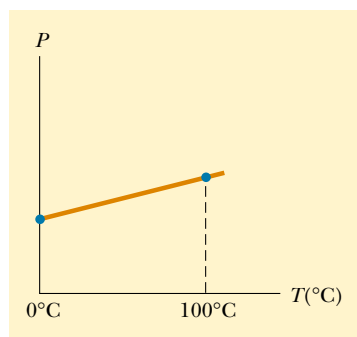


Figure 19.3 A typical graph of pressure versus temperature taken with a constant-volume gas thermometer. The two dots represent known reference temperatures (the ice and steam points of water).

and steam points of water, as follows (a different calibration procedure, which we shall discuss shortly, is now used): The flask was immersed in an ice bath, and mercury reservoir *B* was raised or lowered until the top of the mercury in column *A* was at the zero point on the scale. The height *h*, the difference between the mercury levels in reservoir *B* and column *A*, indicated the pressure in the flask at 0°C.

The flask was then immersed in water at the steam point, and reservoir *B* was readjusted until the top of the mercury in column *A* was again at zero on the scale; this ensured that the gas's volume was the same as it was when the flask was in the ice bath (hence, the designation “constant volume”). This adjustment of reservoir *B* gave a value for the gas pressure at 100°C. These two pressure and temperature values were then plotted, as shown in Figure 19.3. The line connecting the two points serves as a calibration curve for unknown temperatures. If we wanted to measure the temperature of a substance, we would place the gas flask in thermal contact with the substance and adjust the height of reservoir *B* until the top of the mercury column in *A* was at zero on the scale. The height of the mercury column would indicate the pressure of the gas; knowing the pressure, we could find the temperature of the substance using the graph in Figure 19.3.



Now let us suppose that temperatures are measured with gas thermometers containing different gases at different initial pressures. Experiments show that the thermometer readings are nearly independent of the type of gas used, as long as the gas pressure is low and the temperature is well above the point at which the gas liquefies (Fig. 19.4). The agreement among thermometers using various gases improves as the pressure is reduced.

If you extend the curves shown in Figure 19.4 toward negative temperatures, you find, in every case, that the pressure is zero when the temperature is -273.15°C . This significant temperature is used as the basis for the **absolute temperature scale**, which sets -273.15°C as its zero point. This temperature is often referred to as **absolute zero**. The size of a degree on the absolute temperature scale is identical to the size of a degree on the Celsius scale. Thus, the conversion between these temperatures is

$$T_C = T - 273.15 \quad (19.1)$$

where T_C is the Celsius temperature and T is the absolute temperature.

Because the ice and steam points are experimentally difficult to duplicate, an absolute temperature scale based on a single fixed point was adopted in 1954 by the International Committee on Weights and Measures. From a list of fixed points associated with various substances (Table 19.1), the triple point of water was chosen as the reference temperature for this new scale. The **triple point of water** is the single combination of temperature and pressure at which liquid water, gaseous

web

For more information about the temperature standard, visit the National Institute of Standards and Technology at <http://www.nist.gov>

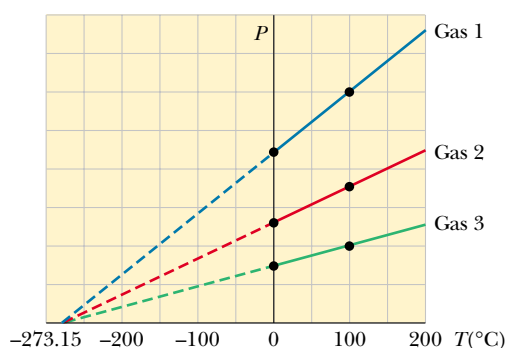


Figure 19.4 Pressure versus temperature for three dilute gases. Note that, for all gases, the pressure extrapolates to zero at the temperature -273.15°C .

TABLE 19.1 Fixed-Point Temperatures^a

Fixed Point	Temperature (°C)	Temperature (K)
Triple point of hydrogen	− 259.34	13.81
Boiling point of helium	− 268.93	4.215
Boiling point of hydrogen at 33.36 kPa pressure	− 256.108	17.042
Boiling point of hydrogen	− 252.87	20.28
Triple point of neon	− 246.048	27.102
Triple point of oxygen	− 218.789	54.361
Boiling point of oxygen	− 182.962	90.188
Triple point of water	0.01	273.16
Boiling point of water	100.00	373.15
Freezing point of tin	231.968 1	505.118 1
Freezing point of zinc	419.58	692.73
Freezing point of silver	961.93	1 235.08
Freezing point of gold	1 064.43	1 337.58

^aAll values are from National Bureau of Standards Special Publication 420; U. S. Department of Commerce, May 1975. All values are at standard atmospheric pressure except for triple points and as noted.

water, and ice (solid water) coexist in equilibrium. This triple point occurs at a temperature of approximately 0.01°C and a pressure of 4.58 mm of mercury. On the new scale, which uses the unit *kelvin*, the temperature of water at the triple point was set at 273.16 kelvin, abbreviated 273.16 K. (*Note:* no degree sign “°” is used with the unit kelvin.) This choice was made so that the old absolute temperature scale based on the ice and steam points would agree closely with the new scale based on the triple point. This new absolute temperature scale (also called the **Kelvin scale**) employs the SI unit of absolute temperature, the **kelvin**, which is defined to be **1/273.16 of the difference between absolute zero and the temperature of the triple point of water**.

Figure 19.5 shows the absolute temperature for various physical processes and structures. The temperature of absolute zero (0 K) cannot be achieved, although laboratory experiments incorporating the laser cooling of atoms have come very close.

What would happen to a gas if its temperature could reach 0 K? As Figure 19.4 indicates, the pressure it exerts on the walls of its container would be zero. In Section 19.5 we shall show that the pressure of a gas is proportional to the average kinetic energy of its molecules. Thus, according to classical physics, the kinetic energy of the gas molecules would become zero at absolute zero, and molecular motion would cease; hence, the molecules would settle out on the bottom of the container. Quantum theory modifies this model and shows that some residual energy, called the *zero-point energy*, would remain at this low temperature.

The Celsius, Fahrenheit, and Kelvin Temperature Scales²

Equation 19.1 shows that the Celsius temperature T_C is shifted from the absolute (Kelvin) temperature T by 273.15°. Because the size of a degree is the same on the

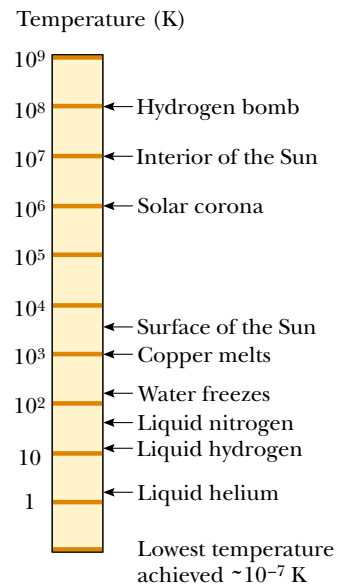


Figure 19.5 Absolute temperatures at which various physical processes occur. Note that the scale is logarithmic.

² Named after Anders Celsius (1701–1744), Gabriel Fahrenheit (1686–1736), and William Thomson, Lord Kelvin (1824–1907), respectively.

two scales, a temperature difference of 5°C is equal to a temperature difference of 5 K. The two scales differ only in the choice of the zero point. Thus, the ice-point temperature on the Kelvin scale, 273.15 K, corresponds to 0.00°C , and the Kelvin-scale steam point, 373.15 K, is equivalent to 100.00°C .

A common temperature scale in everyday use in the United States is the **Fahrenheit scale**. This scale sets the temperature of the ice point at 32°F and the temperature of the steam point at 212°F . The relationship between the Celsius and Fahrenheit temperature scales is

$$T_{\text{F}} = \frac{9}{5}T_{\text{C}} + 32^{\circ}\text{F} \quad (19.2)$$

Quick Quiz 19.1

What is the physical significance of the factor $\frac{9}{5}$ in Equation 19.2? Why is this factor missing in Equation 19.1?

Extending the ideas considered in Quick Quiz 19.1, we use Equation 19.2 to find a relationship between changes in temperature on the Celsius, Kelvin, and Fahrenheit scales:

$$\Delta T_{\text{C}} = \Delta T = \frac{5}{9}\Delta T_{\text{F}} \quad (19.3)$$

EXAMPLE 19.1 Converting Temperatures

On a day when the temperature reaches 50°F , what is the temperature in degrees Celsius and in kelvins?

Solution Substituting $T_{\text{F}} = 50^{\circ}\text{F}$ into Equation 19.2, we obtain

$$T_{\text{C}} = \frac{5}{9}(T_{\text{F}} - 32) = \frac{5}{9}(50 - 32) = 10^{\circ}\text{C}$$

From Equation 19.1, we find that

$$T = T_{\text{C}} + 273.15 = 10^{\circ}\text{C} + 273.15 = 283 \text{ K}$$

A convenient set of weather-related temperature equivalents to keep in mind is that 0°C is (literally) freezing at 32°F , 10°C is cool at 50°F , 30°C is warm at 86°F , and 40°C is a hot day at 104°F .

EXAMPLE 19.2 Heating a Pan of Water

A pan of water is heated from 25°C to 80°C . What is the change in its temperature on the Kelvin scale and on the Fahrenheit scale?

Solution From Equation 19.3, we see that the change in temperature on the Celsius scale equals the change on the Kelvin scale. Therefore,

$$\Delta T = \Delta T_{\text{C}} = 80^{\circ}\text{C} - 25^{\circ}\text{C} = 55^{\circ}\text{C} = 55 \text{ K}$$

From Equation 19.3, we also find that

$$\Delta T_{\text{F}} = \frac{9}{5}\Delta T_{\text{C}} = \frac{9}{5}(55^{\circ}\text{C}) = 99^{\circ}\text{F}$$

19.4 THERMAL EXPANSION OF SOLIDS AND LIQUIDS

Our discussion of the liquid thermometer made use of one of the best-known changes in a substance: As its temperature increases, its volume almost always increases. (As we shall see shortly, in some substances the volume decreases when the temperature increases.) This phenomenon, known as **thermal expansion**, has




Figure 19.6 (a) Thermal-expansion joints are used to separate sections of roadways on bridges. Without these joints, the surfaces would buckle due to thermal expansion on very hot days or crack due to contraction on very cold days. (b) The long, vertical joint is filled with a soft material that allows the wall to expand and contract as the temperature of the bricks changes.

an important role in numerous engineering applications. For example, thermal-expansion joints, such as those shown in Figure 19.6, must be included in buildings, concrete highways, railroad tracks, brick walls, and bridges to compensate for dimensional changes that occur as the temperature changes.

Thermal expansion is a consequence of the change in the average separation between the constituent atoms in an object. To understand this, imagine that the atoms are connected by stiff springs, as shown in Figure 19.7. At ordinary temperatures, the atoms in a solid oscillate about their equilibrium positions with an amplitude of approximately 10^{-11} m and a frequency of approximately 10^{13} Hz. The average spacing between the atoms is about 10^{-10} m. As the temperature of the solid increases, the atoms oscillate with greater amplitudes; as a result, the average separation between them increases.³ Consequently, the object expands.

If thermal expansion is sufficiently small relative to an object's initial dimensions, the change in any dimension is, to a good approximation, proportional to the first power of the temperature change. Suppose that an object has an initial length L_i along some direction at some temperature and that the length increases by an amount ΔL for a change in temperature ΔT . Because it is convenient to consider the fractional change in length per degree of temperature change, we define the **average coefficient of linear expansion** as

$$\alpha \equiv \frac{\Delta L/L_i}{\Delta T}$$

Experiments show that α is constant for small changes in temperature. For purposes of calculation, this equation is usually rewritten as

$$\Delta L = \alpha L_i \Delta T \quad (19.4)$$

or as

$$L_f - L_i = \alpha L_i (T_f - T_i) \quad (19.5)$$

³ More precisely, thermal expansion arises from the *asymmetrical* nature of the potential-energy curve for the atoms in a solid. If the oscillators were truly harmonic, the average atomic separations would not change regardless of the amplitude of vibration.

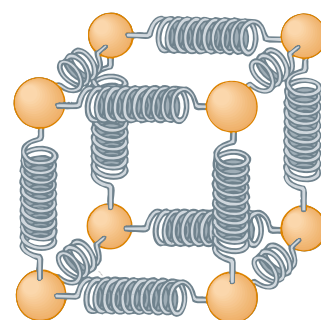


Figure 19.7 A mechanical model of the atomic configuration in a substance. The atoms (spheres) are imagined to be attached to each other by springs that reflect the elastic nature of the interatomic forces.

Average coefficient of linear expansion

The change in length of an object is proportional to the change in temperature

where L_f is the final length, T_i and T_f are the initial and final temperatures, and the proportionality constant α is the average coefficient of linear expansion for a given material and has units of $^{\circ}\text{C}^{-1}$.

It may be helpful to think of thermal expansion as an effective magnification or as a photographic enlargement of an object. For example, as a metal washer is heated (Fig. 19.8), all dimensions, including the radius of the hole, increase according to Equation 19.4.

Table 19.2 lists the average coefficient of linear expansion for various materials. Note that for these materials α is positive, indicating an increase in length with increasing temperature. This is not always the case. Some substances—calcite (CaCO_3) is one example—expand along one dimension (positive α) and contract along another (negative α) as their temperatures are increased.

Because the linear dimensions of an object change with temperature, it follows that surface area and volume change as well. The change in volume at constant pressure is proportional to the initial volume V_i and to the change in temperature according to the relationship

$$\Delta V = \beta V_i \Delta T \quad (19.6)$$

where β is the **average coefficient of volume expansion**. For a solid, the average coefficient of volume expansion is approximately three times the average linear expansion coefficient: $\beta = 3\alpha$. (This assumes that the average coefficient of linear expansion of the solid is the same in all directions.)

To see that $\beta = 3\alpha$ for a solid, consider a box of dimensions ℓ , w , and h . Its volume at some temperature T_i is $V_i = \ell wh$. If the temperature changes to $T_i + \Delta T$, its volume changes to $V_i + \Delta V$, where each dimension changes according to Equation 19.4. Therefore,

$$\begin{aligned} V_i + \Delta V &= (\ell + \Delta\ell)(w + \Delta w)(h + \Delta h) \\ &= (\ell + \alpha\ell\Delta T)(w + \alpha w\Delta T)(h + \alpha h\Delta T) \\ &= \ell wh(1 + \alpha\Delta T)^3 \\ &= V_i[1 + 3\alpha\Delta T + 3(\alpha\Delta T)^2 + (\alpha\Delta T)^3] \end{aligned}$$

The change in volume of a solid at constant pressure is proportional to the change in temperature

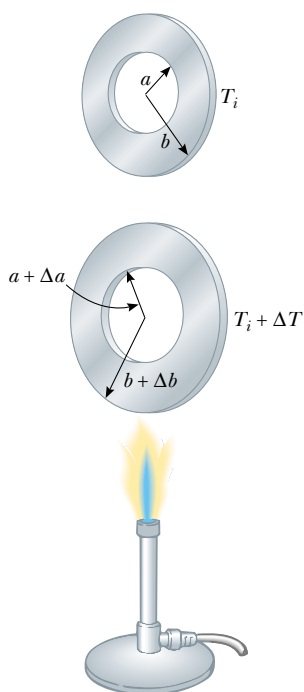


Figure 19.8 Thermal expansion of a homogeneous metal washer. As the washer is heated, all dimensions increase. (The expansion is exaggerated in this figure.)

TABLE 19.2 Average Expansion Coefficients for Some Materials Near Room Temperature

Material	Average Linear Expansion Coefficient (α) ($^{\circ}\text{C}^{-1}$)	Material	Average Volume Expansion Coefficient (β) ($^{\circ}\text{C}^{-1}$)
Aluminum	24×10^{-6}	Alcohol, ethyl	1.12×10^{-4}
Brass and bronze	19×10^{-6}	Benzene	1.24×10^{-4}
Copper	17×10^{-6}	Acetone	1.5×10^{-4}
Glass (ordinary)	9×10^{-6}	Glycerin	4.85×10^{-4}
Glass (Pyrex)	3.2×10^{-6}	Mercury	1.82×10^{-4}
Lead	29×10^{-6}	Turpentine	9.0×10^{-4}
Steel	11×10^{-6}	Gasoline	9.6×10^{-4}
Invar (Ni–Fe alloy)	0.9×10^{-6}	Air at 0°C	3.67×10^{-3}
Concrete	12×10^{-6}	Helium	3.665×10^{-3}

If we now divide both sides by V_i and then isolate the term $\Delta V/V_i$, we obtain the fractional change in volume:

$$\frac{\Delta V}{V_i} = 3\alpha \Delta T + 3(\alpha \Delta T)^2 + (\alpha \Delta T)^3$$

Because $\alpha \Delta T \ll 1$ for typical values of ΔT ($< \sim 100^\circ\text{C}$), we can neglect the terms $3(\alpha \Delta T)^2$ and $(\alpha \Delta T)^3$. Upon making this approximation, we see that

$$\frac{\Delta V}{V_i} = 3\alpha \Delta T$$

$$3\alpha = \frac{1}{V_i} \frac{\Delta V}{\Delta T}$$

Equation 19.6 shows that the right side of this expression is equal to β , and so we have $3\alpha = \beta$, the relationship we set out to prove. In a similar way, you can show that the change in area of a rectangular plate is given by $\Delta A = 2\alpha A_i \Delta T$ (see Problem 53).

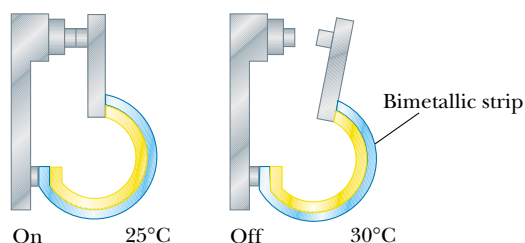
As Table 19.2 indicates, each substance has its own characteristic average coefficient of expansion. For example, when the temperatures of a brass rod and a steel rod of equal length are raised by the same amount from some common initial value, the brass rod expands more than the steel rod does because brass has a greater average coefficient of expansion than steel does. A simple mechanism called a *bimetallic strip* utilizes this principle and is found in practical devices such as thermostats. It consists of two thin strips of dissimilar metals bonded together. As the temperature of the strip increases, the two metals expand by different amounts and the strip bends, as shown in Figure 19.9.

QuickLab

Tape two plastic straws tightly together along their entire length but with a 2-cm offset. Hold them in a stream of very hot water from a faucet so that water pours through one but not through the other. Quickly hold the straws up and sight along their length. You should be able to see a very slight curvature in the tape caused by the difference in expansion of the two straws. The effect is small, so look closely. Running cold water through the same straw and again sighting along the length will help you see the small change in shape more clearly.



(a)



(b)



(c)

Figure 19.9 (a) A bimetallic strip bends as the temperature changes because the two metals have different expansion coefficients. (b) A bimetallic strip used in a thermostat to break or make electrical contact. (c) The interior of a thermostat, showing the coiled bimetallic strip. Why do you suppose the strip is coiled?

Quick Quiz 19.2

If you quickly plunge a room-temperature thermometer into very hot water, the mercury level will go *down* briefly before going up to a final reading. Why?

Quick Quiz 19.3

You are offered a prize for making the most sensitive glass thermometer using the materials in Table 19.2. Which glass and which working liquid would you choose?

EXAMPLE 19.3 Expansion of a Railroad Track

A steel railroad track has a length of 30.000 m when the temperature is 0.0°C. (a) What is its length when the temperature is 40.0°C?



Thermal expansion: The extreme temperature of a July day in Asbury Park, NJ, caused these railroad tracks to buckle and derail the train in the distance. (AP/Wide World Photos)

Solution Making use of Table 19.2 and noting that the change in temperature is 40.0°C, we find that the increase in length is

$$\Delta L = \alpha L_i \Delta T = [11 \times 10^{-6} (\text{°C})^{-1}] (30.000 \text{ m}) (40.0 \text{ °C}) = 0.013 \text{ m}$$

If the track is 30.000 m long at 0.0°C, its length at 40.0°C is **30.013 m.**

(b) Suppose that the ends of the rail are rigidly clamped at 0.0°C so that expansion is prevented. What is the thermal stress set up in the rail if its temperature is raised to 40.0°C?

Solution From the definition of Young's modulus for a solid (see Eq. 12.6), we have

$$\text{Tensile stress} = \frac{F}{A} = Y \frac{\Delta L}{L_i}$$

Because Y for steel is $20 \times 10^{10} \text{ N/m}^2$ (see Table 12.1), we have

$$\frac{F}{A} = (20 \times 10^{10} \text{ N/m}^2) \left(\frac{0.013 \text{ m}}{30.000 \text{ m}} \right) = \mathbf{8.7 \times 10^7 \text{ N/m}^2}$$

Exercise If the rail has a cross-sectional area of 30.0 cm^2 , what is the force of compression in the rail?

Answer $2.6 \times 10^5 \text{ N} = 58\,000 \text{ lb!}$

The Unusual Behavior of Water

Liquids generally increase in volume with increasing temperature and have average coefficients of volume expansion about ten times greater than those of solids. Water is an exception to this rule, as we can see from its density-versus-temperature curve shown in Figure 19.10. As the temperature increases from 0°C to 4°C, water contracts and thus its density increases. Above 4°C, water expands with increasing temperature, and so its density decreases. In other words, the density of water reaches a maximum value of $1\,000 \text{ kg/m}^3$ at 4°C.

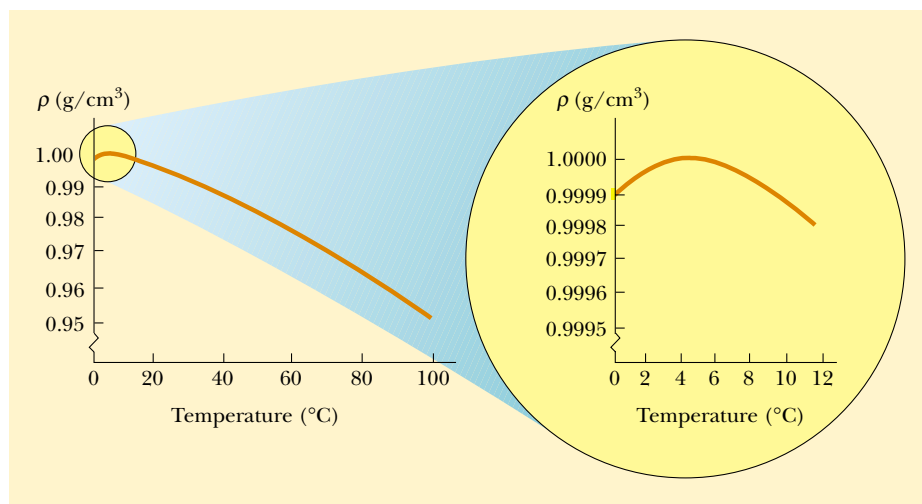


Figure 19.10 How the density of water at atmospheric pressure changes with temperature. The inset at the right shows that the maximum density of water occurs at 4°C.

We can use this unusual thermal-expansion behavior of water to explain why a pond begins freezing at the surface rather than at the bottom. When the atmospheric temperature drops from, for example, 7°C to 6°C, the surface water also cools and consequently decreases in volume. This means that the surface water is denser than the water below it, which has not cooled and decreased in volume. As a result, the surface water sinks, and warmer water from below is forced to the surface to be cooled. When the atmospheric temperature is between 4°C and 0°C, however, the surface water expands as it cools, becoming less dense than the water below it. The mixing process stops, and eventually the surface water freezes. As the water freezes, the ice remains on the surface because ice is less dense than water. The ice continues to build up at the surface, while water near the bottom remains at 4°C. If this were not the case, then fish and other forms of marine life would not survive.

19.5 MACROSCOPIC DESCRIPTION OF AN IDEAL GAS

10.5 In this section we examine the properties of a gas of mass m confined to a container of volume V at a pressure P and a temperature T . It is useful to know how these quantities are related. In general, the equation that interrelates these quantities, called the *equation of state*, is very complicated. However, if the gas is maintained at a very low pressure (or low density), the equation of state is quite simple and can be found experimentally. Such a low-density gas is commonly referred to as an *ideal gas*.⁴

⁴ To be more specific, the assumption here is that the temperature of the gas must not be too low (the gas must not condense into a liquid) or too high, and that the pressure must be low. In reality, an ideal gas does not exist. However, the concept of an ideal gas is very useful in view of the fact that real gases at low pressures behave as ideal gases do. The concept of an ideal gas implies that the gas molecules do not interact except upon collision, and that the molecular volume is negligible compared with the volume of the container.

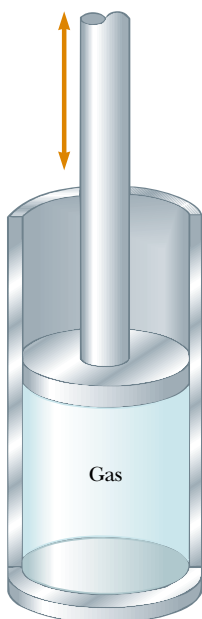


Figure 19.11 An ideal gas confined to a cylinder whose volume can be varied by means of a movable piston.

The universal gas constant

QuickLab

Vigorously shake a can of soda pop and then thoroughly tap its bottom and sides to dislodge any bubbles trapped there. You should be able to open the can without spraying its contents all over.

It is convenient to express the amount of gas in a given volume in terms of the number of moles n . As we learned in Section 1.3, one mole of any substance is that amount of the substance that contains Avogadro's number $N_A = 6.022 \times 10^{23}$ of constituent particles (atoms or molecules). The number of moles n of a substance is related to its mass m through the expression

$$n = \frac{m}{M} \quad (19.7)$$

where M is the molar mass of the substance (see Section 1.3), which is usually expressed in units of grams per mole (g/mol). For example, the molar mass of oxygen (O_2) is 32.0 g/mol. Therefore, the mass of one mole of oxygen is 32.0 g.

Now suppose that an ideal gas is confined to a cylindrical container whose volume can be varied by means of a movable piston, as shown in Figure 19.11. If we assume that the cylinder does not leak, the mass (or the number of moles) of the gas remains constant. For such a system, experiments provide the following information: First, when the gas is kept at a constant temperature, its pressure is inversely proportional to its volume (Boyle's law). Second, when the pressure of the gas is kept constant, its volume is directly proportional to its temperature (the law of Charles and Gay-Lussac). These observations are summarized by the **equation of state for an ideal gas**:

$$PV = nRT \quad (19.8)$$

In this expression, known as the **ideal gas law**, R is a universal constant that is the same for all gases and T is the absolute temperature in kelvins. Experiments on numerous gases show that as the pressure approaches zero, the quantity PV/nT approaches the same value R for all gases. For this reason, R is called the **universal gas constant**. In SI units, in which pressure is expressed in pascals ($1 \text{ Pa} = 1 \text{ N/m}^2$) and volume in cubic meters, the product PV has units of newton·meters, or joules, and R has the value

$$R = 8.315 \text{ J/mol} \cdot \text{K} \quad (19.9)$$

If the pressure is expressed in atmospheres and the volume in liters ($1 \text{ L} = 10^3 \text{ cm}^3 = 10^{-3} \text{ m}^3$), then R has the value

$$R = 0.08214 \text{ L} \cdot \text{atm/mol} \cdot \text{K}$$

Using this value of R and Equation 19.8, we find that the volume occupied by 1 mol of any gas at atmospheric pressure and at 0°C (273 K) is 22.4 L.

Now that we have presented the equation of state, we are ready for a formal definition of an ideal gas: **An ideal gas is one for which PV/nT is constant at all pressures.**

The ideal gas law states that if the volume and temperature of a fixed amount of gas do not change, then the pressure also remains constant. Consider the bottle of champagne shown at the beginning of this chapter. Because the temperature of the bottle and its contents remains constant, so does the pressure, as can be shown by replacing the cork with a pressure gauge. Shaking the bottle displaces some carbon dioxide gas from the "head space" to form bubbles within the liquid, and these bubbles become attached to the inside of the bottle. (No new gas is generated by shaking.) When the bottle is opened, the pressure is reduced; this causes the volume of the bubbles to increase suddenly. If the bubbles are attached to the bottle (beneath the liquid surface), their rapid expansion expels liquid from the

bottle. If the sides and bottom of the bottle are first tapped until no bubbles remain beneath the surface, then when the champagne is opened, the drop in pressure will not force liquid from the bottle. Try the QuickLab, but practice before demonstrating to a friend!

The ideal gas law is often expressed in terms of the total number of molecules N . Because the total number of molecules equals the product of the number of moles n and Avogadro's number N_A , we can write Equation 19.8 as

$$PV = nRT = \frac{N}{N_A} RT$$

$$PV = Nk_B T \quad (19.10)$$

where k_B is **Boltzmann's constant**, which has the value

$$k_B = \frac{R}{N_A} = 1.38 \times 10^{-23} \text{ J/K} \quad (19.11)$$

Boltzmann's constant

It is common to call quantities such as P , V , and T the **thermodynamic variables** of an ideal gas. If the equation of state is known, then one of the variables can always be expressed as some function of the other two.

EXAMPLE 19.4 How Many Gas Molecules in a Container?

An ideal gas occupies a volume of 100 cm^3 at 20°C and 100 Pa . Find the number of moles of gas in the container.

Solution The quantities given are volume, pressure, and temperature: $V = 100 \text{ cm}^3 = 1.00 \times 10^{-4} \text{ m}^3$, $P = 100 \text{ Pa}$, and $T = 20^\circ\text{C} = 293 \text{ K}$. Using Equation 19.8, we find that

$$n = \frac{PV}{RT} = \frac{(100 \text{ Pa})(10^{-4} \text{ m}^3)}{(8.315 \text{ J/mol} \cdot \text{K})(293 \text{ K})} = 4.10 \times 10^{-6} \text{ mol}$$

Exercise How many molecules are in the container?

Answer 2.47×10^{18} molecules.

EXAMPLE 19.5 Filling a Scuba Tank

A certain scuba tank is designed to hold 66 ft^3 of air when it is at atmospheric pressure at 22°C . When this volume of air is compressed to an absolute pressure of $3\,000 \text{ lb/in.}^2$ and stored in a 10-L (0.35-ft^3) tank, the air becomes so hot that the tank must be allowed to cool before it can be used. If the air does not cool, what is its temperature? (Assume that the air behaves like an ideal gas.)

Solution If no air escapes from the tank during filling, then the number of moles n remains constant; therefore, using $PV = nRT$, and with n and R being constant, we obtain for the initial and final values:

$$\frac{P_i V_i}{T_i} = \frac{P_f V_f}{T_f}$$

The initial pressure of the air is 14.7 lb/in.^2 , its final pressure is $3\,000 \text{ lb/in.}^2$, and the air is compressed from an initial volume of 66 ft^3 to a final volume of 0.35 ft^3 . The initial temperature, converted to SI units, is 295 K . Solving for T_f , we obtain

$$T_f = \left(\frac{P_f V_f}{P_i V_i} \right) T_i = \frac{(3\,000 \text{ lb/in.}^2)(0.35 \text{ ft}^3)}{(14.7 \text{ lb/in.}^2)(66 \text{ ft}^3)} (295 \text{ K})$$

$$= 319 \text{ K}$$

Exercise What is the air temperature in degrees Celsius and in degrees Fahrenheit?

Answer 45.9°C ; 115°F .

Quick Quiz 19.4

In the previous example we used SI units for the temperature in our calculation step but not for the pressures or volumes. When working with the ideal gas law, how do you decide when it is necessary to use SI units and when it is not?

EXAMPLE 19.6 Heating a Spray Can

A spray can containing a propellant gas at twice atmospheric pressure (202 kPa) and having a volume of 125 cm³ is at 22°C. It is then tossed into an open fire. When the temperature of the gas in the can reaches 195°C, what is the pressure inside the can? Assume any change in the volume of the can is negligible.

Solution We employ the same approach we used in Example 19.5, starting with the expression

$$\frac{P_i V_i}{T_i} = \frac{P_f V_f}{T_f}$$

Because the initial and final volumes of the gas are assumed to be equal, this expression reduces to

$$\frac{P_i}{T_i} = \frac{P_f}{T_f}$$

Solving for P_f gives

$$P_f = \left(\frac{T_f}{T_i}\right)(P_i) = \left(\frac{468 \text{ K}}{295 \text{ K}}\right)(202 \text{ kPa}) = 320 \text{ kPa}$$

Obviously, the higher the temperature, the higher the pressure exerted by the trapped gas. Of course, if the pressure increases high enough, the can will explode. Because of this possibility, you should never dispose of spray cans in a fire.

SUMMARY

Two bodies are in **thermal equilibrium** with each other if they have the same temperature.

The **zeroth law of thermodynamics** states that if objects A and B are separately in thermal equilibrium with a third object C, then objects A and B are in thermal equilibrium with each other.

The SI unit of absolute temperature is the **kelvin**, which is defined to be the fraction 1/273.16 of the temperature of the triple point of water.

When the temperature of an object is changed by an amount ΔT , its length changes by an amount ΔL that is proportional to ΔT and to its initial length L_i :

$$\Delta L = \alpha L_i \Delta T \quad (19.4)$$

where the constant α is the **average coefficient of linear expansion**. The **average volume expansion coefficient** β for a solid is approximately equal to 3α .

An **ideal gas** is one for which PV/nT is constant at all pressures. An ideal gas is described by the **equation of state**,

$$PV = nRT \quad (19.8)$$

where n equals the number of moles of the gas, V is its volume, R is the universal gas constant (8.315 J/mol·K), and T is the absolute temperature. A real gas behaves approximately as an ideal gas if it is far from liquefaction.

QUESTIONS

- Is it possible for two objects to be in thermal equilibrium if they are not in contact with each other? Explain.
- A piece of copper is dropped into a beaker of water. If the water's temperature increases, what happens to the temperature of the copper? Under what conditions are the water and copper in thermal equilibrium?
- In principle, any gas can be used in a constant-volume gas thermometer. Why is it not possible to use oxygen for temperatures as low as 15 K? What gas would you use? (Refer to the data in Table 19.1.)
- Rubber has a negative average coefficient of linear expansion. What happens to the size of a piece of rubber as it is warmed?
- Why should the amalgam used in dental fillings have the same average coefficient of expansion as a tooth? What would occur if they were mismatched?
- Explain why the thermal expansion of a spherical shell made of a homogeneous solid is equivalent to that of a solid sphere of the same material.
- A steel ring bearing has an inside diameter that is 0.1 mm smaller than the diameter of an axle. How can it be made to fit onto the axle without removing any material?
- Markings to indicate length are placed on a steel tape in a room that has a temperature of 22°C. Are measurements made with the tape on a day when the temperature is 27°C greater than, less than, or the same length as the object's length? Defend your answer.
- Determine the number of grams in 1 mol of each of the following gases: (a) hydrogen, (b) helium, and (c) carbon monoxide.
- An inflated rubber balloon filled with air is immersed in a flask of liquid nitrogen that is at 77 K. Describe what happens to the balloon, assuming that it remains flexible while being cooled.
- Two identical cylinders at the same temperature each contain the same kind of gas and the same number of moles of gas. If the volume of cylinder A is three times greater than the volume of cylinder B, what can you say about the relative pressures in the cylinders?
- The pendulum of a certain pendulum clock is made of brass. When the temperature increases, does the clock run too fast, run too slowly, or remain unchanged? Explain.
- An automobile radiator is filled to the brim with water while the engine is cool. What happens to the water when the engine is running and the water is heated? What do modern automobiles have in their cooling systems to prevent the loss of coolants?
- Metal lids on glass jars can often be loosened by running them under hot water. How is this possible?
- When the metal ring and metal sphere shown in Figure Q19.15 are both at room temperature, the sphere can just be passed through the ring. After the sphere is heated, it cannot be passed through the ring. Explain.



Figure Q19.15 (Courtesy of Central Scientific Company)

PROBLEMS

1, 2, 3 = straightforward, intermediate, challenging □ = full solution available in the *Student Solutions Manual and Study Guide*

WEB = solution posted at <http://www.saunderscollege.com/physics/> = Computer useful in solving problem = Interactive Physics

= paired numerical/symbolic problems

Section 19.1 Temperature and the Zeroth Law of Thermodynamics

Section 19.2 Thermometers and the Celsius Temperature Scale

Section 19.3 The Constant-Volume Gas Thermometer and the Absolute Temperature Scale

Note: A pressure of 1 atm = 1.013×10^5 Pa = 101.3 kPa.

- Convert the following to equivalent temperatures on the Celsius and Kelvin scales: (a) the normal human

body temperature, 98.6°F; (b) the air temperature on a cold day, -5.00°F .

- In a constant-volume gas thermometer, the pressure at 20.0°C is 0.980 atm. (a) What is the pressure at 45.0°C ? (b) What is the temperature if the pressure is 0.500 atm?

WEB 3. A constant-volume gas thermometer is calibrated in dry ice (that is, carbon dioxide in the solid state, which has a temperature of -80.0°C) and in boiling ethyl alcohol (78.0°C). The two pressures are 0.900 atm and

- 1.635 atm. (a) What Celsius value of absolute zero does the calibration yield? What is the pressure at (b) the freezing point of water and (c) the boiling point of water?
- There is a temperature whose numerical value is the same on both the Celsius and Fahrenheit scales. What is this temperature?
 - Liquid nitrogen has a boiling point of -195.81°C at atmospheric pressure. Express this temperature in (a) degrees Fahrenheit and (b) kelvins.
 - On a Strange temperature scale, the freezing point of water is -15.0°S and the boiling point is $+60.0^{\circ}\text{S}$. Develop a *linear* conversion equation between this temperature scale and the Celsius scale.
 - The temperature difference between the inside and the outside of an automobile engine is 450°C . Express this temperature difference on the (a) Fahrenheit scale and (b) Kelvin scale.
 - The melting point of gold is $1\,064^{\circ}\text{C}$, and the boiling point is $2\,660^{\circ}\text{C}$. (a) Express these temperatures in kelvins. (b) Compute the difference between these temperatures in Celsius degrees and in kelvins.

Section 19.4 Thermal Expansion of Solids and Liquids

Note: When solving the problems in this section, use the data in Table 19.2.

- A copper telephone wire has essentially no sag between poles 35.0 m apart on a winter day when the temperature is -20.0°C . How much longer is the wire on a summer day when $T_{\text{C}} = 35.0^{\circ}\text{C}$?
- The concrete sections of a certain superhighway are designed to have a length of 25.0 m. The sections are poured and cured at 10.0°C . What minimum spacing should the engineer leave between the sections to eliminate buckling if the concrete is to reach a temperature of 50.0°C ?
- An aluminum tube is 3.000 0 m long at 20.0°C . What is its length at (a) 100.0°C and (b) 0.0°C ?
- A brass ring with a diameter of 10.00 cm at 20.0°C is heated and slipped over an aluminum rod with a diameter of 10.01 cm at 20.0°C . Assume that the average coefficients of linear expansion are constant. (a) To what temperature must this combination be cooled to separate them? Is this temperature attainable? (b) If the aluminum rod were 10.02 cm in diameter, what would be the required temperature?
- A pair of eyeglass frames is made of epoxy plastic. At room temperature (20.0°C), the frames have circular lens holes 2.20 cm in radius. To what temperature must the frames be heated if lenses 2.21 cm in radius are to be inserted in them? The average coefficient of linear expansion for epoxy is $1.30 \times 10^{-4} (^{\circ}\text{C})^{-1}$.
- The New River Gorge bridge in West Virginia is a steel arch bridge 518 m in length. How much does its length change between temperature extremes of -20.0°C and 35.0°C ?
- A square hole measuring 8.00 cm along each side is cut

in a sheet of copper. (a) Calculate the change in the area of this hole if the temperature of the sheet is increased by 50.0 K. (b) Does the result represent an increase or a decrease in the area of the hole?

- The average coefficient of volume expansion for carbon tetrachloride is $5.81 \times 10^{-4} (^{\circ}\text{C})^{-1}$. If a 50.0-gal steel container is filled completely with carbon tetrachloride when the temperature is 10.0°C , how much will spill over when the temperature rises to 30.0°C ?
- WEB** The active element of a certain laser is a glass rod 30.0 cm long by 1.50 cm in diameter. If the temperature of the rod increases by 65.0°C , what is the increase in (a) its length, (b) its diameter, and (c) its volume? (Assume that $\alpha = 9.00 \times 10^{-6} (^{\circ}\text{C})^{-1}$.)
- A volumetric glass flask made of Pyrex is calibrated at 20.0°C . It is filled to the 100-mL mark with 35.0°C acetone with which it immediately comes to thermal equilibrium. (a) What is the volume of the acetone when it cools to 20.0°C ? (b) How significant is the change in volume of the flask?
- A concrete walk is poured on a day when the temperature is 20.0°C , in such a way that the ends are unable to move. (a) What is the stress in the cement on a hot day of 50.0°C ? (b) Does the concrete fracture? Take Young's modulus for concrete to be $7.00 \times 10^9 \text{ N/m}^2$ and the tensile strength to be $2.00 \times 10^9 \text{ N/m}^2$.
- Figure P19.20 shows a circular steel casting with a gap. If the casting is heated, (a) does the width of the gap increase or decrease? (b) The gap width is 1.600 cm when the temperature is 30.0°C . Determine the gap width when the temperature is 190°C .




Figure P19.20

- A steel rod undergoes a stretching force of 500 N. Its cross-sectional area is 2.00 cm^2 . Find the change in temperature that would elongate the rod by the same amount that the 500-N force does. (*Hint:* Refer to Tables 12.1 and 19.2.)
- A steel rod 4.00 cm in diameter is heated so that its temperature increases by 70.0°C . It is then fastened between two rigid supports. The rod is allowed to cool to its original temperature. Assuming that Young's modulus for the steel is $20.6 \times 10^{10} \text{ N/m}^2$ and that its average

coefficient of linear expansion is $11.0 \times 10^{-6} (\text{°C})^{-1}$, calculate the tension in the rod.

- 23.** A hollow aluminum cylinder 20.0 cm deep has an internal capacity of 2.000 L at 20.0°C. It is completely filled with turpentine and then warmed to 80.0°C. (a) How much turpentine overflows? (b) If the cylinder is then cooled back to 20.0°C, how far below the surface of the cylinder's rim does the turpentine's surface recede?
- 24.** At 20.0°C, an aluminum ring has an inner diameter of 5.000 0 cm and a brass rod has a diameter of 5.050 0 cm. (a) To what temperature must the ring be heated so that it will just slip over the rod? (b) To what common temperature must the two be heated so that the ring just slips over the rod? Would this latter process work?

Section 19.5 Macroscopic Description of an Ideal Gas

- 25.** Gas is contained in an 8.00-L vessel at a temperature of 20.0°C and a pressure of 9.00 atm. (a) Determine the number of moles of gas in the vessel. (b) How many molecules of gas are in the vessel?
- 26.** A tank having a volume of 0.100 m³ contains helium gas at 150 atm. How many balloons can the tank blow up if each filled balloon is a sphere 0.300 m in diameter at an absolute pressure of 1.20 atm?
- 27.** An auditorium has dimensions 10.0 m \times 20.0 m \times 30.0 m. How many molecules of air fill the auditorium at 20.0°C and a pressure of 101 kPa?
- 28.** Nine grams of water are placed in a 2.00-L pressure cooker and heated to 500°C. What is the pressure inside the container if no gas escapes?
- WEB 29.** The mass of a hot-air balloon and its cargo (not including the air inside) is 200 kg. The air outside is at 10.0°C and 101 kPa. The volume of the balloon is 400 m³. To what temperature must the air in the balloon be heated before the balloon will lift off? (Air density at 10.0°C is 1.25 kg/m³.)
- 30.** One mole of oxygen gas is at a pressure of 6.00 atm and a temperature of 27.0°C. (a) If the gas is heated at constant volume until the pressure triples, what is the final temperature? (b) If the gas is heated until both the pressure and the volume are doubled, what is the final temperature?
- 31.** (a) Find the number of moles in 1.00 m³ of an ideal gas at 20.0°C and atmospheric pressure. (b) For air, Avogadro's number of molecules has a mass of 28.9 g. Calculate the mass of 1 m³ of air. Compare the result with the tabulated density of air.
- 32.** A cube 10.0 cm on each edge contains air (with equivalent molar mass 28.9 g/mol) at atmospheric pressure and temperature 300 K. Find (a) the mass of the gas, (b) its weight, and (c) the force it exerts on each face of the cube. (d) Comment on the underlying physical reason why such a small sample can exert such a great force.
- 33.** An automobile tire is inflated with air originally at 10.0°C and normal atmospheric pressure. During the process, the air is compressed to 28.0% of its original volume and its temperature is increased to 40.0°C. (a) What is the tire pressure? (b) After the car is driven at high speed, the tire air temperature rises to 85.0°C and the interior volume of the tire increases by 2.00%. What is the new tire pressure (absolute) in pascals?
- 34.** A spherical weather balloon is designed to expand to a maximum radius of 20.0 m when in flight at its working altitude, where the air pressure is 0.030 0 atm and the temperature is 200 K. If the balloon is filled at atmospheric pressure and 300 K, what is its radius at liftoff?
- 35.** A room of volume 80.0 m³ contains air having an equivalent molar mass of 28.9 g/mol. If the temperature of the room is raised from 18.0°C to 25.0°C, what mass of air (in kilograms) will leave the room? Assume that the air pressure in the room is maintained at 101 kPa.
- 36.** A room of volume V contains air having equivalent molar mass M (in g/mol). If the temperature of the room is raised from T_1 to T_2 , what mass of air will leave the room? Assume that the air pressure in the room is maintained at P_0 .
- 37.** At 25.0 m below the surface of the sea (density = 1 025 kg/m³), where the temperature is 5.00°C, a diver exhales an air bubble having a volume of 1.00 cm³. If the surface temperature of the sea is 20.0°C, what is the volume of the bubble right before it breaks the surface?
- 38.** Estimate the mass of the air in your bedroom. State the quantities you take as data and the value you measure or estimate for each.
- 39.** The pressure gauge on a tank registers the gauge pressure, which is the difference between the interior and exterior pressures. When the tank is full of oxygen (O₂), it contains 12.0 kg of the gas at a gauge pressure of 40.0 atm. Determine the mass of oxygen that has been withdrawn from the tank when the pressure reading is 25.0 atm. Assume that the temperature of the tank remains constant.
- 40.** In state-of-the-art vacuum systems, pressures as low as 10^{-9} Pa are being attained. Calculate the number of molecules in a 1.00-m³ vessel at this pressure if the temperature is 27°C.
- 41.** Show that 1 mol of any gas (assumed to be ideal) at atmospheric pressure (101.3 kPa) and standard temperature (273 K) occupies a volume of 22.4 L.
- 42.** A diving bell in the shape of a cylinder with a height of 2.50 m is closed at the upper end and open at the lower end. The bell is lowered from air into sea water ($\rho = 1.025 \text{ g/cm}^3$). The air in the bell is initially at 20.0°C. The bell is lowered to a depth (measured to the bottom of the bell) of 45.0 fathoms, or 82.3 m. At this depth, the water temperature is 4.0°C, and the air in the bell is in thermal equilibrium with the water. (a) How high does sea water rise in the bell? (b) To what minimum pressure must the air in the bell be increased for the water that entered to be expelled?

ADDITIONAL PROBLEMS

43. A student measures the length of a brass rod with a steel tape at 20.0°C . The reading is 95.00 cm . What will the tape indicate for the length of the rod when the rod and the tape are at (a) -15.0°C and (b) 55.0°C ?
44. The density of gasoline is 730 kg/m^3 at 0°C . Its average coefficient of volume expansion is $9.60 \times 10^{-4} (\text{C}^\circ)^{-1}$. If 1.00 gal of gasoline occupies 0.00380 m^3 , how many extra kilograms of gasoline would you get if you bought 10.0 gal of gasoline at 0°C rather than at 20.0°C from a pump that is not temperature compensated?
45. A steel ball bearing is 4.000 cm in diameter at 20.0°C . A bronze plate has a hole in it that is 3.994 cm in diameter at 20.0°C . What common temperature must they have so that the ball just squeezes through the hole?
46. **Review Problem.** An aluminum pipe 0.655 m long at 20.0°C and open at both ends is used as a flute. The pipe is cooled to a low temperature but is then filled with air at 20.0°C as soon as it is played. By how much does its fundamental frequency change as the temperature of the metal increases from 5.00°C to 20.0°C ?
47. A mercury thermometer is constructed as shown in Figure P19.47. The capillary tube has a diameter of 0.00400 cm , and the bulb has a diameter of 0.250 cm . Neglect the expansion of the glass, find the change in height of the mercury column that occurs with a temperature change of 30.0°C .

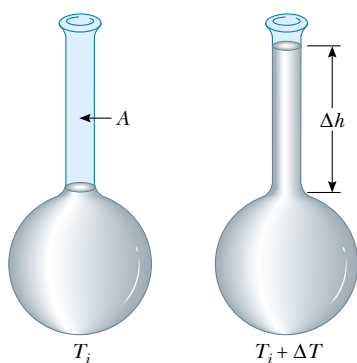


Figure P19.47 Problems 47 and 48.

48. A liquid with a coefficient of volume expansion β just fills a spherical shell of volume V_i at a temperature of T_i (see Fig. P19.47). The shell is made of a material that has an average coefficient of linear expansion α . The liquid is free to expand into an open capillary of area A projecting from the top of the sphere. (a) If the temperature increases by ΔT , show that the liquid rises in the capillary by the amount Δh given by the equation $\Delta h = (V_i/A)(\beta - 3\alpha)\Delta T$. (b) For a typical system, such as a mercury thermometer, why is it a good approximation to neglect the expansion of the shell?

- WEB 49. A liquid has a density ρ . (a) Show that the fractional change in density for a change in temperature ΔT is $\Delta\rho/\rho = -\beta\Delta T$. What does the negative sign signify? (b) Fresh water has a maximum density of 1.0000 g/cm^3 at 4.0°C . At 10.0°C , its density is 0.9997 g/cm^3 . What is β for water over this temperature interval?
50. A cylinder is closed by a piston connected to a spring of constant $2.00 \times 10^3\text{ N/m}$ (Fig. P19.50). While the spring is relaxed, the cylinder is filled with 5.00 L of gas at a pressure of 1.00 atm and a temperature of 20.0°C . (a) If the piston has a cross-sectional area of 0.0100 m^2 and a negligible mass, how high will it rise when the temperature is increased to 250°C ? (b) What is the pressure of the gas at 250°C ?

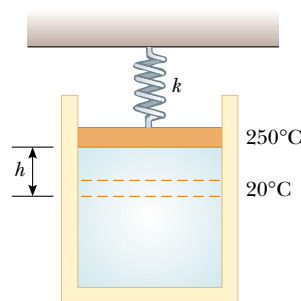


Figure P19.50

- WEB 51. A vertical cylinder of cross-sectional area A is fitted with a tight-fitting, frictionless piston of mass m (Fig. P19.51). (a) If n moles of an ideal gas are in the cylinder at a temperature of T , what is the height h at which the piston is in equilibrium under its own weight? (b) What is the value for h if $n = 0.200\text{ mol}$, $T = 400\text{ K}$, $A = 0.00800\text{ m}^2$, and $m = 20.0\text{ kg}$?

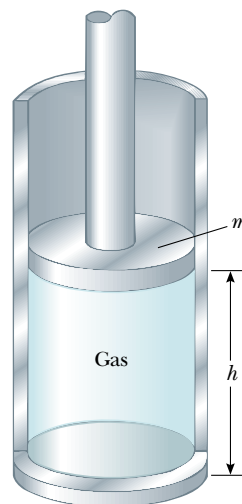


Figure P19.51

52. A bimetallic bar is made of two thin strips of dissimilar metals bonded together. As they are heated, the one with the greater average coefficient of expansion expands more than the other, forcing the bar into an arc, with the outer radius having a greater circumference (Fig. P19.52). (a) Derive an expression for the angle of bending θ as a function of the initial length of the strips, their average coefficients of linear expansion, the change in temperature, and the separation of the centers of the strips ($\Delta r = r_2 - r_1$). (b) Show that the angle of bending decreases to zero when ΔT decreases to zero or when the two average coefficients of expansion become equal. (c) What happens if the bar is cooled?

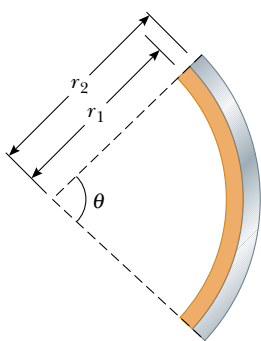


Figure P19.52

53. The rectangular plate shown in Figure P19.53 has an area A_i equal to ℓw . If the temperature increases by ΔT , show that the increase in area is $\Delta A = 2\alpha A_i \Delta T$, where α is the average coefficient of linear expansion. What approximation does this expression assume? (Hint: Note that each dimension increases according to the equation $\Delta L = \alpha L_i \Delta T$.)

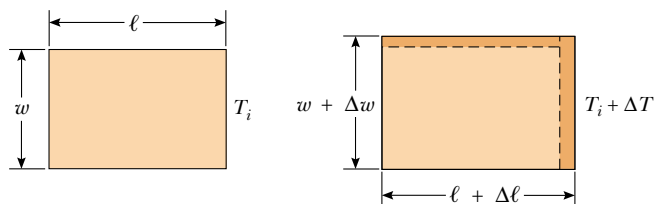


Figure P19.53

54. Precise temperature measurements are often made on the basis of the change in electrical resistance of a metal with temperature. The resistance varies approximately according to the expression $R = R_0(1 + AT_C)$, where R_0 and A are constants. A certain element has a resistance of 50.0 ohms (Ω) at 0°C and 71.5Ω at the freezing point of tin (231.97°C). (a) Determine the constants A and R_0 . (b) At what temperature is the resistance equal to 89.0Ω ?

55. **Review Problem.** A clock with a brass pendulum has a period of 1.000 s at 20.0°C . If the temperature increases to 30.0°C , (a) by how much does the period change, and (b) how much time does the clock gain or lose in one week?
56. **Review Problem.** Consider an object with any one of the shapes displayed in Table 10.2. What is the percentage increase in the moment of inertia of the object when it is heated from 0°C to 100°C if it is composed of (a) copper or (b) aluminum? (See Table 19.2. Assume that the average linear expansion coefficients do not vary between 0°C and 100°C .)
57. **Review Problem.** (a) Derive an expression for the buoyant force on a spherical balloon that is submerged in water as a function of the depth below the surface, the volume (V_i) of the balloon at the surface, the pressure (P_0) at the surface, and the density of the water. (Assume that water temperature does not change with depth.) (b) Does the buoyant force increase or decrease as the balloon is submerged? (c) At what depth is the buoyant force one-half the surface value?
58. (a) Show that the density of an ideal gas occupying a volume V is given by $\rho = PM/RT$, where M is the molar mass. (b) Determine the density of oxygen gas at atmospheric pressure and 20.0°C .
59. Starting with Equation 19.10, show that the total pressure P in a container filled with a mixture of several ideal gases is $P = P_1 + P_2 + P_3 + \dots$, where P_1 , P_2 , \dots are the pressures that each gas would exert if it alone filled the container. (These individual pressures are called the *partial pressures* of the respective gases.) This is known as *Dalton's law of partial pressures*.
60. A sample of dry air that has a mass of 100.00 g, collected at sea level, is analyzed and found to consist of the following gases:

nitrogen (N_2) = 75.52 g

oxygen (O_2) = 23.15 g

argon (Ar) = 1.28 g

carbon dioxide (CO_2) = 0.05 g

as well as trace amounts of neon, helium, methane, and other gases. (a) Calculate the partial pressure (see Problem 59) of each gas when the pressure is 101.3 kPa.

(b) Determine the volume occupied by the 100-g sample at a temperature of 15.00°C and a pressure of $1.013 \times 10^5 \text{ Pa}$. What is the density of the air for these conditions? (c) What is the effective molar mass of the air sample?

61. Steel rails for an interurban rapid transit system form a continuous track that is held rigidly in place in concrete. (a) If the track was laid when the temperature was 0°C , what is the stress in the rails on a warm day when the temperature is 25.0°C ? (b) What fraction of the yield strength of $52.2 \times 10^7 \text{ N/m}^2$ does this stress represent?

62. (a) Use the equation of state for an ideal gas and the definition of the average coefficient of volume expansion, in the form $\beta = (1/V)dV/dT$, to show that the average coefficient of volume expansion for an ideal gas at constant pressure is given by $\beta = 1/T$, where T is the absolute temperature. (b) What value does this expression predict for β at 0°C ? Compare this with the experimental values for helium and air in Table 19.2.
63. Two concrete spans of a 250-m-long bridge are placed end to end so that no room is allowed for expansion (Fig. P19.63a). If a temperature increase of 20.0°C occurs, what is the height y to which the spans rise when they buckle (Fig. P19.63b)?
64. Two concrete spans of a bridge of length L are placed end to end so that no room is allowed for expansion (see Fig. P19.63a). If a temperature increase of ΔT occurs, what is the height y to which the spans rise when they buckle (see Fig. P19.63b)?

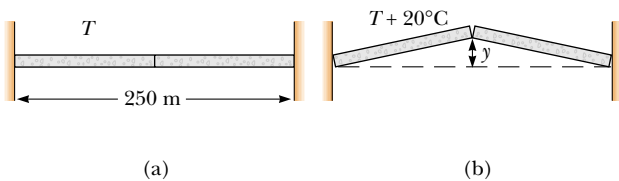


Figure P19.63 Problems 63 and 64.

65. A copper rod and a steel rod are heated. At 0°C the copper rod has length L_c and the steel rod has length L_s . When the rods are being heated or cooled, the difference between their lengths stays constant at 5.00 cm. Determine the values of L_c and L_s .
66. A cylinder that has a 40.0-cm radius and is 50.0 cm deep is filled with air at 20.0°C and 1.00 atm (Fig. P19.66a). A 20.0-kg piston is now lowered into the cylinder, compressing the air trapped inside (Fig. P19.66b). Finally, a 75.0-kg man stands on the piston, further compressing the air, which remains at 20°C (Fig. P19.66c). (a) How far down (Δh) does the piston move when the man steps onto it? (b) To what temperature should the gas be heated to raise the piston and the man back to h_i ?
67. The relationship $L_f = L_i(1 + \alpha\Delta T)$ is an approximation that works when the average coefficient of expansion is small. If α is large, one must integrate the relationship $dL/dT = \alpha L$ to determine the final length. (a) Assuming that the average coefficient of linear expansion is constant as L varies, determine a general expression for the final length. (b) Given a rod of length 1.00 m and a temperature change of 100.0°C , determine the error caused by the approximation when $\alpha = 2.00 \times 10^{-5} (^\circ\text{C})^{-1}$ (a typical value for a metal) and

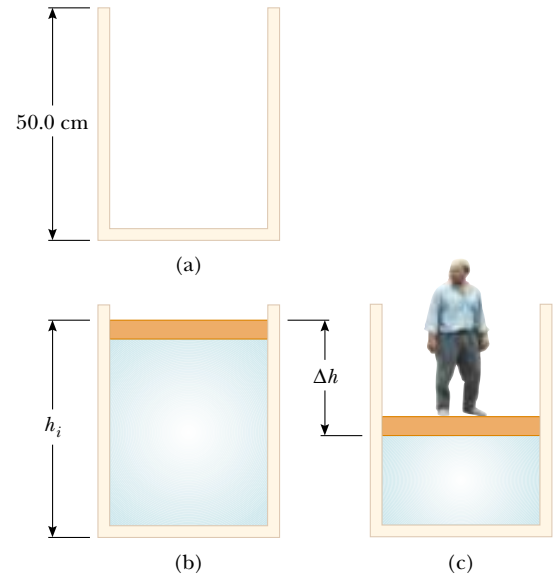


Figure P19.66

when $\alpha = 0.0200 (^\circ\text{C})^{-1}$ (an unrealistically large value for comparison).

68. A steel wire and a copper wire, each of diameter 2.000 mm, are joined end to end. At 40.0°C , each has an unstretched length of 2.000 m; they are connected between two fixed supports 4.000 m apart on a tabletop, so that the steel wire extends from $x = -2.000$ m to $x = 0$, the copper wire extends from $x = 0$ to $x = 2.000$ m, and the tension is negligible. The temperature is then lowered to 20.0°C . At this lower temperature, what are the tension in the wire and the x coordinate of the junction between the wires? (Refer to Tables 12.1 and 19.2.)
69. **Review Problem.** A steel guitar string with a diameter of 1.00 mm is stretched between supports 80.0 cm apart. The temperature is 0.0°C . (a) Find the mass per unit length of this string. (Use $7.86 \times 10^3 \text{ kg/m}^3$ as the mass density.) (b) The fundamental frequency of transverse oscillations of the string is 200 Hz. What is the tension in the string? (c) If the temperature is raised to 30.0°C , find the resulting values of the tension and the fundamental frequency. (Assume that both the Young's modulus [Table 12.1] and the average coefficient of linear expansion [Table 19.2] have constant values between 0.0°C and 30.0°C .)
70. A 1.00-km steel railroad rail is fastened securely at both ends when the temperature is 20.0°C . As the temperature increases, the rail begins to buckle. If its shape is an arc of a vertical circle, find the height h of the center of the buckle when the temperature is 25.0°C . (You will need to solve a transcendental equation.)

ANSWERS TO QUICK QUIZZES

- 19.1** The size of a degree on the Fahrenheit scale is $\frac{5}{9}$ the size of a degree on the Celsius scale. This is true because the Fahrenheit range of 32°F to 212°F is equivalent to the Celsius range of 0°C to 100°C. The factor $\frac{9}{5}$ in Equation 19.2 corrects for this difference. Equation 19.1 does not need this correction because the size of a Celsius degree is the same as the size of a kelvin.
- 19.2** The glass bulb containing most of the mercury warms up first because it is in direct thermal contact with the hot water. It expands slightly, and thus its volume increases. This causes the mercury level in the capillary tube to drop. As the mercury inside the bulb warms up, it also expands. Eventually, its increase in volume is sufficient to raise the mercury level in the capillary tube.
- 19.3** For the glass, choose Pyrex, which has a lower average coefficient of linear expansion than does ordinary glass. For the working liquid, choose gasoline, which has the largest average coefficient of volume expansion.
- 19.4** You do not have to convert the units for pressure and volume to SI units as long as the same units appear in the numerator and the denominator. This is not true for ratios of temperature units, as you can see by comparing the ratios 300 K/200 K and 26.85°C/(−73.15°C). You must always use absolute (kelvin) temperatures when applying the ideal gas law.