

Name : _____	Class & Section _____	Roll.No. _____
Invigilator's Name & Signature _____		

Q.1 Tick the correct option: (4x1=4)

- a) Spinach is rich inmineral.
- | | |
|--------------|--------------|
| i) Iron | ii) Fluoride |
| iii) Diamond | iv) Chlorine |
- b) We get minerals from the place called.....
- | | |
|-----------|------------|
| i) pipes | ii) mines |
| iii) pool | iv) drills |
- c) The person who stands for elections must be above the age of
- | | |
|---------|--------|
| i) 20 | ii) 18 |
| iii) 25 | iv) 35 |
- d) Shimla is the capital of
- | | |
|-------------------|----------------------|
| i) Madhya Pradesh | ii) Orissa |
| iii) Uttranchal | iv) Himachal Pradesh |

Q.2 Fill in the blanks: (8x1=8)

- i) The large moving ice blocks are called
- ii) Process of using discarded material again is called
- iii) The deepest mines of gold in the world are
- iv) _____helps the doctor to decide whether a person is well or not.
- v) The southern tip of mainland India is.....
- vi) Kullu shawl is famous handicraft of.....
- vii) There aremain tributaries of river Indus
- viii) Energy from falling water is used to make.....

Q.3 Correct the false statement: (4x1=4)

- a) Chandigarh is the capital of Tripura.

.....

b) When we sing we use light energy.

.....

c) Fir trees are found in Thar desert.

.....

d) Heart is made up of bones.

.....

Q.4 Give reasons:

(4x1.5=6)

a) The sun is called the main source of energy because

.....

.....

b) The Northern Plains have fertile soil because

.....

.....

c) We should respect our National Flag because

.....

.....

d) Blood protects our body from diseases because

.....

.....

Q.5 Answer the following questions:

(6x2=12)

a) Write any two functions of blood.

.....

.....

.....

b) What is energy? Write any four different forms of energy.

.....

.....

.....

c) Why do we need to change the tyres of our car ?

.....

.....

.....

d) What is a political party?

.....

.....

.....

e) What do farmers feed their cattle for good yield?

.....

.....

.....

f) Name any two states that share their boundaries with Himachal Pradesh.

.....

.....

.....

Q.6 Identify the force shown in the picture below.

(1x6=6)

a) The force shown in the picture is

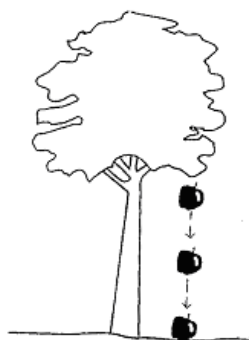
b) It was discovered by

c) The unit of force is.....

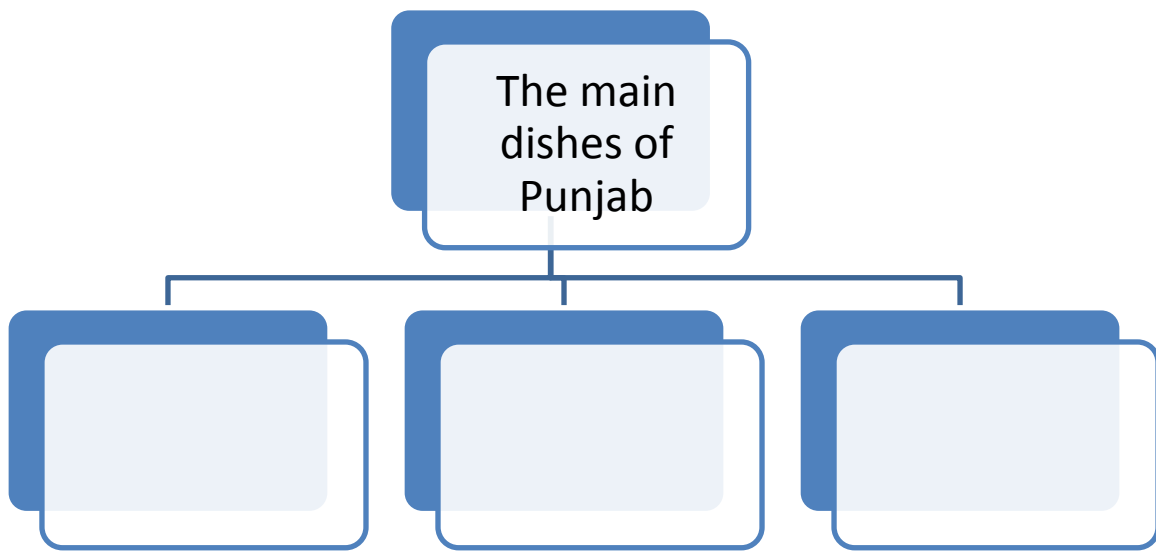
d) Define this force briefly:

.....


.....



Q.7 Complete the flowchart: (1x3=3)



Q.8 Draw the well labelled diagram of blood vessels. Colour it. (3)



Q.9 Mark the following on the map of India:

(4)

- a) The coastal plains
- b) The Himalayas
- c) Kolkata
- d) Lucknow

