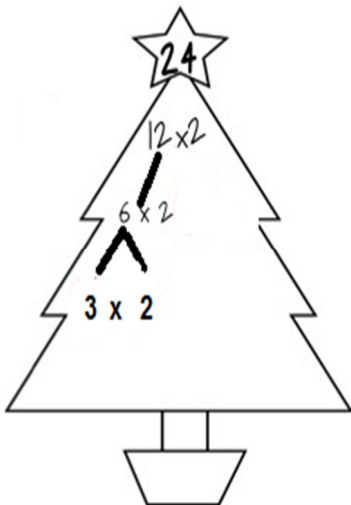


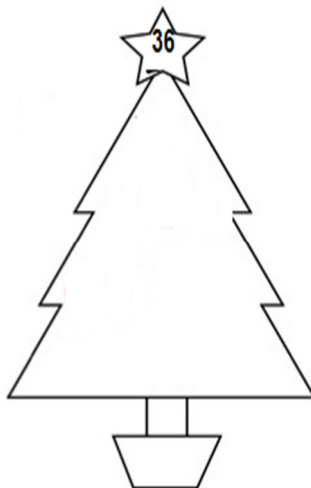
CLASS IV MATHS HW WORKSHEET
SUBMISSION DATE:- 29 AUG 2014

Q1

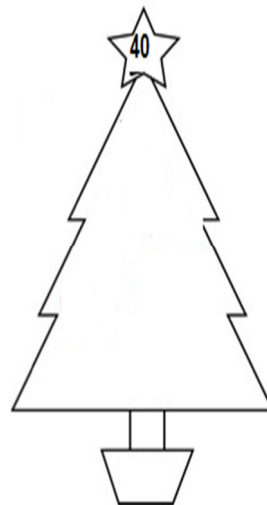
Complete the factor tree. Remember that there is more than one to get the right answer. Stop when you are left with all prime numbers. Circle all the prime numbers.



a.

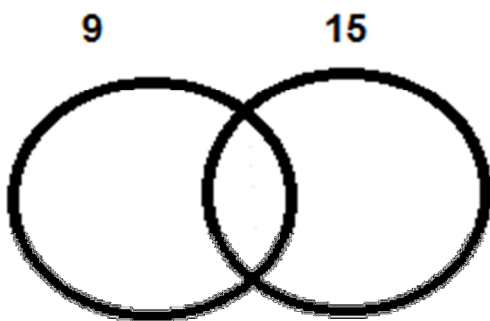


b.



c.

Q2. Find the factors of these numbers and write down the common factors in the blanks:

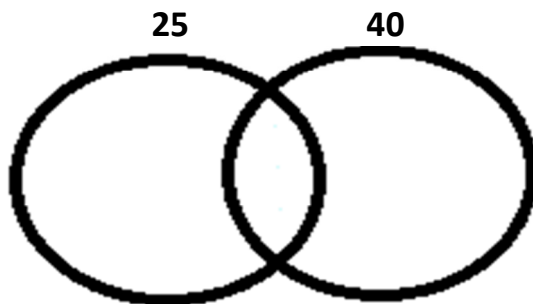


a.

Factors of 9 _____

Factors of 15 _____

Common factors _____



b.

Factors of 25 _____

Factors of 40 _____

Common factors _____