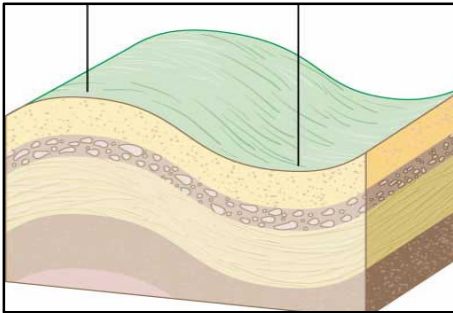
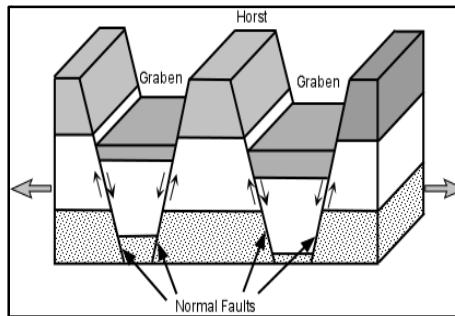


Date of Submission- _____ I.

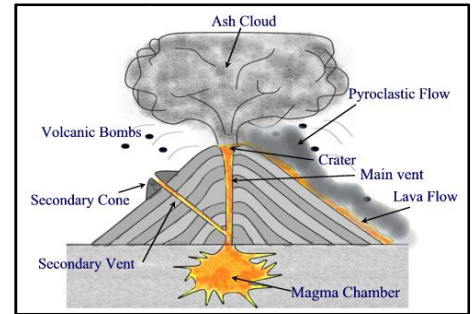
Analyze the three diagrams below with respect to the following.



A



B



C

- (i) Name the types of mountains shown in each of the diagram A, B and C.
- (ii) Associate the following processes with each type of diagrams and briefly describe them.
 - (a) Upliftment and Subsidence
 - (b) Collision of tectonic plates
 - (c) Volcanic eruptions

Note- You must draw the diagrams shown above while answering the question in your notebook.