

### CONTENTS

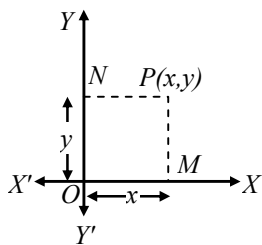
- Definition
- Cartesian Co-ordinates
- Distance Between Two Points
- Section Formula
- Application of Section Formula
- Area of Triangles

### ➤ CO-ORDINATE GEOMETRY

It is a branch of geometry which sets up a definite correspondence between the position of a point in a plane and a pair of algebraic numbers, called co-ordinates.

### ➤ CARTESIAN CO-ORDINATES (RECTANGULAR CO-ORDINATES)

In Cartesian co-ordinates the position of a point P is determined by knowing the distances from two perpendicular lines passing through the fixed point. Let O be the fixed point called the origin and XOY' and YOY', the two perpendicular lines through O, called Cartesian or Rectangular co-ordinates axes.



Draw PM and PN perpendiculars on OX and OY respectively. OM (or MP) is called the x co-ordinate or the ordinate of the point P.

### Axes of Co-ordinates

In the figure OX and OY are called as x-axis and y-axis respectively and both together are known as axes of co-ordinates.

### Origin

It is point O of intersection of the axes of co-ordinates.

### Co-ordinates of the Origin

It has zero distance from both the axes so that its abscissa and ordinate are both zero. Therefore, the coordinates of origin are (0, 0).

### Abscissa

The distance of the point P from y-axis is called its abscissa. In the figure, OM is the Abscissa.

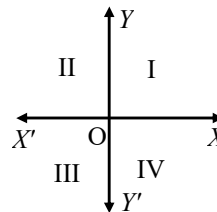
### Ordinate

The distance of the point P from x-axis is called its ordinate. ON is the ordinate in the figure.

### Quadrant

The axes divide the plane into four parts. These four parts are called quadrants. So, the plane consists of axes and quadrants. The plane is called the cartesian plane or the coordinate plane or the xy-plane. These axes are called the co-ordinate axes.

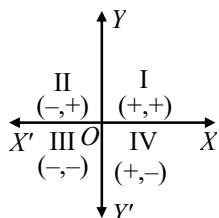
A quadrant is  $\frac{1}{4}$  part of a plane divided by co-ordinate axes.



- XOY is called the first quadrant
- YOX' the second.
- X'OY' the third.
- Y'OX the fourth as marked in the figure.

## ➤ RULES OF SIGNS OF CO-ORDINATES

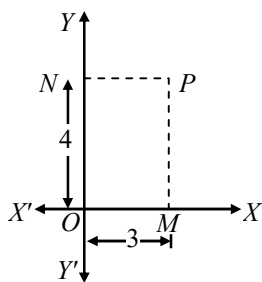
- In the first quadrant, both co-ordinates i.e., abscissa and ordinate of a point are positive.
- In the second quadrant, for a point, abscissa is negative and ordinate is positive.
- In the third quadrant, for a point, both abscissa and ordinate are negative.
- In the fourth quadrant, for a point, the abscissa is positive and the ordinate is negative.



Quadrant	x-co-ordinate	y-co-ordinate	Point
First quadrant	+	+	(+,+)
Second quadrant	-	+	(-,+)
Third quadrant	-	-	(-,-)
Fourth quadrant	+	-	(+,-)

### ❖ EXAMPLES ❖

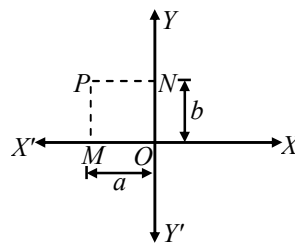
**Ex.1** From the adjoining figure find



- Abscissa
- Ordinate
- Co-ordinates of a point P

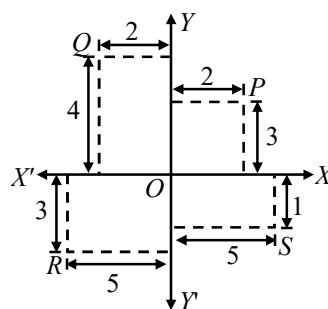
**Sol.** (i) Abscissa = PN = OM = 3 units  
(ii) Ordinate = PM = ON = 4 units  
(iii) Co-ordinates of the point  
 $P = (\text{Abscissa}, \text{ordinate}) = (3, 4)$

**Ex.2** Determine (i) Abscissa (ii) ordinate (iii) Co-ordinates of point P given in the following figure.



**Sol.** (i) Abscissa of the point P =  $-NP = -OM = -a$   
(ii) Ordinate of the point P =  $MP = ON = b$   
(iii) Co-ordinates of point P = (abscissa, ordinate)  
 $= (-a, b)$

**Ex.3** Write down the (i) abscissa (ii) ordinate (iii) Co-ordinates of P, Q, R and S as given in the figure.



**Sol. Point P**

Abscissa of P = 2; Ordinate of P = 3

Co-ordinates of P = (2, 3)

**Point Q**

Abscissa of Q = -2; Ordinate of Q = 4

Co-ordinate of Q = (-2, 4)

**Point R**

Abscissa of R = -5; Ordinate of R = -3

Co-ordinates of R = (-5, -3)

**Point S**

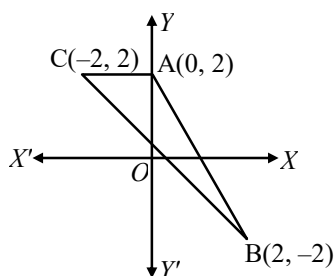
Abscissa of S = 5; Ordinate of S = -1

Co-ordinates of S = (5, -1)

**Ex.4** Draw a triangle ABC where vertices A, B and C are (0, 2), (2, -2), and (-2, 2) respectively.

**Sol.** Plot the point A by taking its abscissa 0 and ordinate = 2.

Similarly, plot points B and C taking abscissa 2 and -2 and ordinates -2 and 2 respectively. Join A, B and C. This is the required triangle.

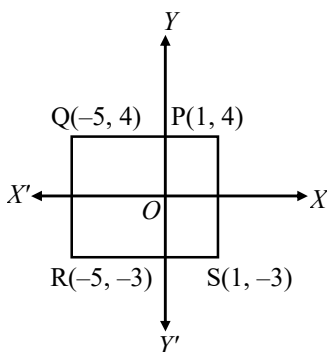


**Ex.5** Draw a rectangle PQRS in which vertices P, Q, R and S are (1, 4), (-5, 4), (-5, -3) and (1, -3) respectively.

**Sol.** Plot the point P by taking its abscissa 1 and ordinate -4.

Similarly, plot the points Q, R and S taking abscissa as -5, -5 and 1 and ordinates as 4, -3 and -3 respectively.

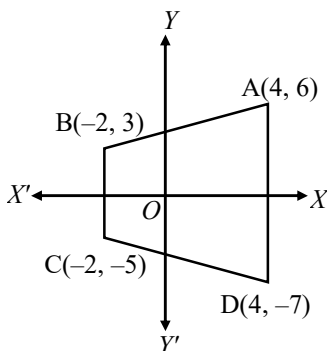
Join the points PQR and S. PQRS is the required rectangle.



**Ex.6** Draw a trapezium ABCD in which vertices A, B, C and D are (4, 6), (-2, 3), (-2, -5) and (4, -7) respectively.

**Sol.** Plot the point A taking its abscissa as 4 and ordinate as 6.

Similarly plot the point B, C and D taking abscissa as -2, -2 and 4 and ordinates as 3, -5, and -7 respectively. Join A, B, C and D ABCD is the required trapezium.



## ➤ DISTANCE BETWEEN TWO POINTS

**Theorem :** The distance between two points  $P(x_1, y_1)$  and  $Q(x_2, y_2)$  is given by

$$PQ = \sqrt{(x_2 - x_1)^2 + (y_2 - y_1)^2}$$

$$\text{i.e., } PQ = \sqrt{(\text{Diff. of abscissa})^2 + (\text{Diff. of ordinates})^2}$$

**Note :** If O is the origin and  $P(x, y)$  is any point, then from the above formula, we have

$$OP = \sqrt{(x - 0)^2 + (y - 0)^2} = \sqrt{x^2 + y^2}$$

## ❖ EXAMPLES ❖

**Ex.7** Find the distance between the points

- (i)  $P(-6, 7)$  and  $Q(-1, -5)$
- (ii)  $R(a + b, a - b)$  and  $S(a - b, -a - b)$
- (iii)  $A(at_1^2, 2at_1)$  and  $B(at_2^2, 2at_2)$

**Sol.** (i) Here,

$$x_1 = -6, y_1 = 7 \text{ and } x_2 = -1, y_2 = -5$$

$$\therefore PQ = \sqrt{(x_2 - x_1)^2 + (y_2 - y_1)^2}$$

$$\Rightarrow PQ = \sqrt{(-1 + 6)^2 + (-5 - 7)^2}$$

$$\Rightarrow PQ = \sqrt{25 + 144} = \sqrt{169} = 13$$

(ii) We have,

$$RS = \sqrt{(a - b - a - b)^2 + (-a - b - a + b)^2}$$

$$\Rightarrow RS = \sqrt{4b^2 + 4a^2} = 2\sqrt{a^2 + b^2}$$

(iii) We have,

$$AB = \sqrt{(at_2^2 - at_1^2)^2 + (2at_2 - 2at_1)^2}$$

$$\Rightarrow AB = \sqrt{a^2(t_2 - t_1)^2(t_2 + t_1)^2 + 4a^2(t_2 - t_1)^2}$$

$$\Rightarrow AB = a(t_2 - t_1) \sqrt{(t_2 + t_1)^2 + 4}$$

**Ex.8** If the point  $(x, y)$  is equidistant from the points  $(a + b, b - a)$  and  $(a - b, a + b)$ , prove that  $bx = ay$ .

**Sol.** Let  $P(x, y)$ ,  $Q(a + b, b - a)$  and  $R(a - b, a + b)$  be the given points. Then

$$PQ = PR \quad (\text{Given})$$

$$\begin{aligned}
&\Rightarrow \sqrt{\{x-(a+b)\}^2 + \{y-(b-a)\}^2} \\
&= \sqrt{\{x-(a-b)\}^2 + \{y-(a+b)\}^2} \\
&\Rightarrow \{x-(a+b)\}^2 + \{y-(b-a)\}^2 \\
&= \{x-(a-b)\}^2 + \{y-(a+b)\}^2 \\
&\Rightarrow x^2 - 2x(a+b) + (a+b)^2 \\
&\quad + y^2 - 2y(b-a) + (b-a)^2 \\
&= x^2 + (a-b)^2 - 2x(a-b) \\
&\quad + y^2 - 2(a+b)y + (a+b)^2 \\
&\Rightarrow -2x(a+b) - 2y(b-a) \\
&= -2x(a-b) - 2y(a+b) \\
&\Rightarrow ax + bx + by - ay = ax - bx + ay + by \\
&\Rightarrow 2bx = 2ay \Rightarrow bx = ay
\end{aligned}$$

**Ex.9** Find the value of x, if the distance between the points (x, -1) and (3, 2) is 5.

**Sol.** Let P(x, -1) and Q(3, 2) be the given points, Then,

$$PQ = 5 \quad (\text{Given})$$

$$\begin{aligned}
&\Rightarrow \sqrt{(x-3)^2 + (-1-2)^2} = 5 \\
&\Rightarrow (x-3)^2 + 9 = 5^2 \\
&\Rightarrow x^2 - 6x + 18 = 25 \Rightarrow x^2 - 6x - 7 = 0 \\
&\Rightarrow (x-7)(x+1) = 0 \Rightarrow x = 7 \text{ or } x = -1
\end{aligned}$$

**Ex.10** Show that the points (a, a), (-a, -a) and  $(-\sqrt{3}a, \sqrt{3}a)$  are the vertices of an equilateral triangle. Also find its area.

**Sol.** Let A (a, a), B(-a, -a) and C( $-\sqrt{3}a, \sqrt{3}a$ ) be the given points. Then, we have

$$AB = \sqrt{(-a-a)^2 + (-a-a)^2} = \sqrt{4a^2 + 4a^2} = 2\sqrt{2}a$$

$$BC = \sqrt{(-\sqrt{3}a+a)^2 + (\sqrt{3}a+a)^2}$$

$$\Rightarrow BC = \sqrt{a^2(1-\sqrt{3})^2 + a^2(\sqrt{3}+1)^2}$$

$$\begin{aligned}
&\Rightarrow BC = a\sqrt{1+3-2\sqrt{3}+1+3+2\sqrt{3}} \\
&= a\sqrt{8} = 2\sqrt{2}a
\end{aligned}$$

$$\text{and, } AC = \sqrt{(-\sqrt{3}a-a)^2 + (\sqrt{3}a-a)^2}$$

$$\Rightarrow AC = \sqrt{a^2(\sqrt{3}+1)^2 + a^2(\sqrt{3}-1)^2}$$

$$\begin{aligned}
&\Rightarrow AC = a\sqrt{3+1+2\sqrt{3}+3+1-2\sqrt{3}} \\
&= a\sqrt{8} = 2\sqrt{2}a
\end{aligned}$$

Clearly, we have

$$AB = BC = AC$$

Hence, the triangle ABC formed by the given points is an equilateral triangle.

Now,

$$\text{Area of } \triangle ABC = \frac{\sqrt{3}}{4} (\text{side})^2$$

$$\Rightarrow \text{Area of } \triangle ABC = \frac{\sqrt{3}}{4} \times AB^2$$

$$\begin{aligned}
&\Rightarrow \text{Area of } \triangle ABC = \frac{\sqrt{3}}{4} \times (2\sqrt{2}a)^2 \text{ sq. units} \\
&= 2\sqrt{3}a^2 \text{ sq. units}
\end{aligned}$$

**Ex.11** Show that the points (1, -1), (5, 2) and (9, 5) are collinear.

**Sol.** Let A (1, -1), B (5, 2) and C (9, 5) be the given points. Then, we have

$$AB = \sqrt{(5-1)^2 + (2+1)^2} = \sqrt{16+9} = 5$$

$$BC = \sqrt{(5-9)^2 + (2-5)^2} = \sqrt{16+9} = 5$$

$$\text{and, } AC = \sqrt{(1-9)^2 + (-1-5)^2} = \sqrt{64+36} = 10$$

Clearly,  $AC = AB + BC$

Hence, A, B, C are collinear points.

**Ex.12** Show that four points (0, -1), (6, 7), (-2, 3) and (8, 3) are the vertices of a rectangle. Also, find its area.

**Sol.** Let A (0, -1), B(6, 7), C(-2, 3) and D (8, 3) be the given points. Then,

$$AD = \sqrt{(8-0)^2 + (3+1)^2} = \sqrt{64+16} = 4\sqrt{5}$$


$$BC = \sqrt{(6+2)^2 + (7-3)^2} = \sqrt{64+16} = 4\sqrt{5}$$

$$AC = \sqrt{(-2-0)^2 + (3+1)^2} = \sqrt{4+16} = 2\sqrt{5}$$

$$\text{and, } BD = \sqrt{(8-6)^2 + (3-7)^2} = \sqrt{4+16} = 2\sqrt{5}$$

$$\therefore AD = BC \text{ and } AC = BD.$$

So, ADBC is a parallelogram,



$$\text{Now, } AB = \sqrt{(6-0)^2 + (7+1)^2} = \sqrt{36+64} = 10$$

$$\text{and } CD = \sqrt{(8+2)^2 + (3-3)^2} = 10$$

$$\text{Clearly, } AB^2 = AD^2 + DB^2 \text{ and } CD^2 = CB^2 + BD^2$$

Hence, ADBC is a rectangle.

Now, Area of rectangle ADBC = AD × DB

$$= (4\sqrt{5} \times 2\sqrt{5}) \text{ sq. units} = 40 \text{ sq. units}$$

**Ex.13** If P and Q are two points whose coordinates are  $(at^2, 2at)$  and  $\left(\frac{a}{t^2}, \frac{2a}{t}\right)$  respectively and S is the point  $(a, 0)$ . Show that  $\frac{1}{SP} + \frac{1}{SQ}$  is independent of t.

**Sol.** We have,  $SP = \sqrt{(at^2 - a)^2 + (2at - 0)^2}$

$$= a \sqrt{(t^2 - 1)^2 + 4t^2} = a(t^2 + 1)$$

and  $SQ = \sqrt{\left(\frac{a}{t^2} - a\right)^2 + \left(\frac{2a}{t} - 0\right)^2}$

$$\Rightarrow SQ = \sqrt{\frac{a^2(1-t^2)^2}{t^4} + \frac{4a^2}{t^2}}$$

$$\Rightarrow SQ = \frac{a}{t^2} = \sqrt{(1-t^2)^2 + 4t^2} = \frac{a}{t^2} \sqrt{(1+t^2)^2}$$

$$= \frac{a}{t^2} (1+t^2)$$

$$\therefore \frac{1}{SP} + \frac{1}{SQ} = \frac{1}{a(t^2+1)} + \frac{t^2}{a(t^2+1)}$$

$$\Rightarrow \frac{1}{SP} + \frac{1}{SQ} = \frac{1+t^2}{a(t^2+1)} = \frac{1}{a},$$

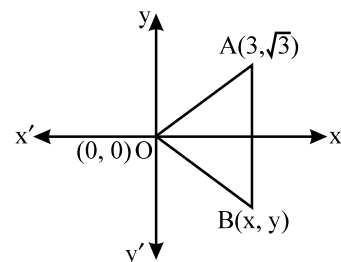
which is independent of t.

**Ex.14** If two vertices of an equilateral triangle be  $(0, 0)$ ,  $(3, \sqrt{3})$ , find the third vertex.

**Sol.**  $O(0, 0)$  and  $A(3, \sqrt{3})$  be the given points and let  $B(x, y)$  be the third vertex of equilateral  $\Delta OAB$ . Then,

$$OA = OB = AB$$

$$\Rightarrow OA^2 = OB^2 = AB^2$$



$$\text{We have, } OA^2 = (3-0)^2 + (\sqrt{3}-0)^2 = 12,$$

$$OB^2 = x^2 + y^2$$

$$\text{and, } AB^2 = (x-3)^2 + (y-\sqrt{3})^2$$

$$\Rightarrow AB^2 = x^2 + y^2 - 6x - 2\sqrt{3}y + 12$$

$$\therefore OA^2 = OB^2 = AB^2$$

$$\Rightarrow OA^2 = OB^2 \text{ and } OB^2 = AB^2$$

$$\Rightarrow x^2 + y^2 = 12$$

$$\text{and, } x^2 + y^2 = x^2 + y^2 - 6x - 2\sqrt{3}y + 12$$

$$\Rightarrow x^2 + y^2 = 12 \text{ and } 6x + 2\sqrt{3}y = 12$$

$$\Rightarrow x^2 + y^2 = 12 \text{ and } 3x + \sqrt{3}y = 6$$

$$\Rightarrow x^2 + \left(\frac{6-3x}{\sqrt{3}}\right)^2 = 12$$

$$\left[ \begin{aligned} & 3x + \sqrt{3}y = 6 \therefore y = \frac{6-3x}{\sqrt{3}} \end{aligned} \right]$$

$$\Rightarrow 3x^2 + (6-3x)^2 = 36$$

$$\Rightarrow 12x^2 - 36x = 0$$

$$\Rightarrow x = 0, 3$$

$$\therefore x = 0 \Rightarrow \sqrt{3}y = 6$$

$$\Rightarrow y = \frac{6}{\sqrt{3}} = 2\sqrt{3} \quad \left[ \begin{aligned} & \text{Putting } x = 0 \text{ in} \\ & 3x + \sqrt{3}y = 6 \end{aligned} \right]$$

$$\text{and, } x = 3 \Rightarrow 9 + \sqrt{3}y = 6$$

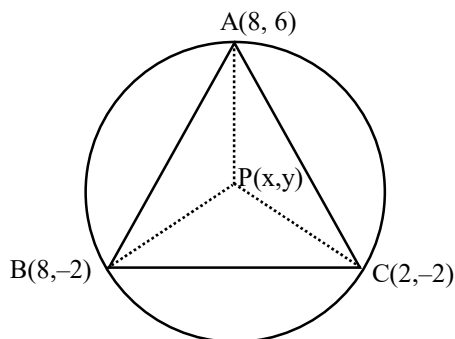
$$\Rightarrow y = \frac{6-9}{\sqrt{3}} = -\sqrt{3} \quad \left[ \begin{aligned} & \text{Putting } x = 3 \text{ in} \\ & 3x + \sqrt{3}y = 6 \end{aligned} \right]$$

Hence, the coordinates of the third vertex B are  $(0, 2\sqrt{3})$  or  $(3, -\sqrt{3})$ .

**Ex.15** Find the coordinates of the circumcentre of the triangle whose vertices are (8, 6), (8, -2) and (2, -2). Also, find its circum radius.

**Sol.** Recall that the circumcentre of a triangle is equidistant from the vertices of a triangle. Let A (8, 6), B(8, -2) and C(2, -2) be the vertices of the given triangle and let P (x, y) be the circumcentre of this triangle. Then,

$$PA = PB = PC \Rightarrow PA^2 = PB^2 = PC^2$$



$$\text{Now, } PA^2 = PB^2$$

$$\Rightarrow (x-8)^2 + (y-6)^2 = (x-8)^2 + (y+2)^2$$

$$\Rightarrow x^2 + y^2 - 16x - 12y + 100$$

$$= x^2 + y^2 - 16x + 4y + 68$$

$$\Rightarrow 16y = 32 \Rightarrow y = 2$$

$$\text{and, } PB^2 = PC^2$$

$$\Rightarrow (x-8)^2 + (y+2)^2 = (x-2)^2 + (y+2)^2$$

$$\Rightarrow x^2 + y^2 - 16x + 4y + 68 = x^2 + y^2 - 4x + 4y + 8$$

$$\Rightarrow 12x = 60 \Rightarrow x = 5$$

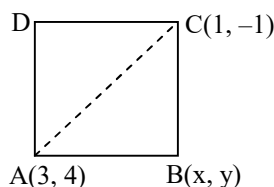
So, the coordinates of the circumcentre P are (5, 2).

$$\text{Also, Circum-radius} = PA = PB = PC$$

$$= \sqrt{(5-8)^2 + (2-6)^2} = \sqrt{9+16} = 5$$

**Ex.16** If the opposite vertices of a square are (1, -1) and (3, 4), find the coordinates of the remaining angular points.

**Sol.** Let A(1, -1) and C(3, 4) be the two opposite vertices of a square ABCD and let B(x, y) be the third vertex.



$$\text{Then, } AB = BC$$

$$\Rightarrow AB^2 = BC^2$$

$$\Rightarrow (x-1)^2 + (y+1)^2 = (3-x)^2 + (4-y)^2$$

$$\Rightarrow x^2 - 2x + 1 + y^2 + 2y + 1$$

$$= 9 - 6x + x^2 + 16 - 8y + y^2$$

$$\Rightarrow x^2 + y^2 - 2x + 2y + 2 = x^2 + y^2 - 6x - 8y + 25$$

$$\Rightarrow 4x + 10y = 23$$

$$\Rightarrow x = \frac{23-10y}{4} \quad \dots(1)$$

In right-angled triangle ABC, we have

$$AB^2 + BC^2 = AC^2$$

$$\Rightarrow (x-3)^2 + (y-4)^2 + (x-1)^2 + (y+1)^2$$

$$= (3-1)^2 + (4+1)^2$$

$$\Rightarrow x^2 + y^2 - 4x - 3y - 1 = 0 \quad \dots(2)$$

Substituting the value of x from (1) and (2), we get

$$\left(\frac{23-10y}{4}\right)^2 + y^2 - (23-10y) - 3y - 1 = 0$$

$$\Rightarrow 4y^2 - 12y + 5 = 0 \Rightarrow (2y-1)(2y-5) = 0$$

$$\Rightarrow y = \frac{1}{2} \text{ or } \frac{5}{2}$$

Putting  $y = \frac{1}{2}$  and  $y = \frac{5}{2}$  respectively in (1) we get

$$x = \frac{9}{2} \text{ and } x = \frac{-1}{2} \text{ respectively.}$$

Hence, the required vertices of the square are

$$\left(\frac{9}{2}, \frac{1}{2}\right) \text{ and } \left(-\frac{1}{2}, \frac{5}{2}\right).$$

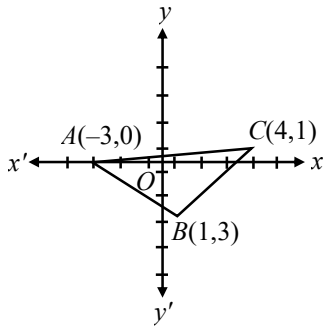
**Ex.17** Prove that the points (-3, 0), (1, -3) and (4, 1) are the vertices of an isosceles right angled triangle. Find the area of this triangle.

**Sol.** Let A (-3, 0), B (1, -3) and C (4, 1) be the given points. Then,

$$AB = \sqrt{\{1-(-3)\}^2 + \{-3-0\}^2} = \sqrt{16+9} = 5 \text{ units.}$$

$$BC = \sqrt{(4-1)^2 + (1+3)^2} = \sqrt{9+16} = 5 \text{ units}$$

$$\& CA = \sqrt{(4+3)^2 + (1-0)^2} = \sqrt{49+1} = 5\sqrt{2} \text{ units}$$



Clearly,  $AB = BC$ . Therefore,  $\triangle ABC$  is isosceles.

$$\text{Also, } AB^2 + BC^2 = 25 + 25 = (5)^2 = CA^2$$

$\Rightarrow \triangle ABC$  is right-angled at B.

Thus,  $\triangle ABC$  is a right-angled isosceles triangle.

$$\text{Now, Area of } \triangle ABC = \frac{1}{2} (\text{Base} \times \text{Height})$$

$$= \frac{1}{2} (AB \times BC)$$

$$\Rightarrow \text{Area of } \triangle ABC = \left( \frac{1}{2} \times 5 \times 5 \right) \text{ sq. units}$$

$$= \frac{25}{2} \text{ sq. units.}$$

**Ex.18** If P (2, -1), Q(3, 4), R(-2, 3) and S(-3, -2) be four points in a plane, show that PQRS is a rhombus but not a square. Find the area of the rhombus.

**Sol.** The given points are P(2, -1), Q(3, 4), R(-2, 3) and S(-3, -2).

We have,

$$PQ = \sqrt{(3-2)^2 + (4+1)^2} = \sqrt{1^2 + 5^2} = \sqrt{26} \text{ units}$$

$$QR = \sqrt{(-2-3)^2 + (3-4)^2} = \sqrt{25+1} = \sqrt{26} \text{ units}$$

$$RS = \sqrt{(-3+2)^2 + (-2-3)^2} = \sqrt{1+25} = \sqrt{26} \text{ units}$$

$$SP = \sqrt{(-3-2)^2 + (-2+1)^2} = \sqrt{26} \text{ units}$$

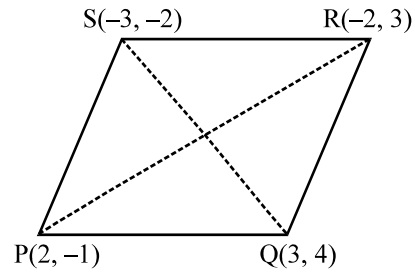
$$PR = \sqrt{(-2-2)^2 + (3+1)^2} = \sqrt{16+16} = 4\sqrt{2} \text{ units}$$

$$\text{and, } QS = \sqrt{(-3-3)^2 + (-2-4)^2}$$

$$= \sqrt{36+36} = 6\sqrt{2} \text{ units}$$

$$\therefore PQ = QR = RS = SP = \sqrt{26} \text{ units}$$

and,  $PR \neq QS$



This means that PQRS is a quadrilateral whose sides are equal but diagonals are not equal.

Thus, PQRS is a rhombus but not a square.

Now, Area of rhombus PQRS =  $\frac{1}{2} \times (\text{Product of lengths of diagonals})$

$$\Rightarrow \text{Area of rhombus PQRS} = \frac{1}{2} \times (PR \times QS)$$

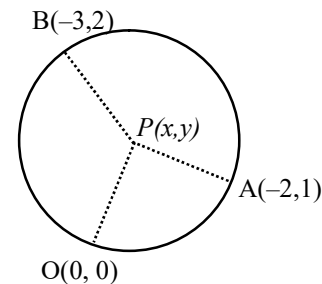
$$\Rightarrow \text{Area of rhombus PQRS}$$

$$= \left( \frac{1}{2} \times 4\sqrt{2} \times 6\sqrt{2} \right) \text{ sq. units} = 24 \text{ sq. units}$$

**Ex.19** Find the coordinates of the centre of the circle passing through the points (0, 0), (-2, 1) and (-3, 2). Also, find its radius.

**Sol.** Let P (x, y) be the centre of the circle passing through the points O(0, 0), A(-2, 1) and B(-3, 2). Then,

$$OP = AP = BP$$



$$\text{Now, } OP = AP \Rightarrow OP^2 = AP^2$$

$$\Rightarrow x^2 + y^2 = (x+2)^2 + (y-1)^2$$

$$\Rightarrow x^2 + y^2 = x^2 + y^2 + 4x - 2y + 5$$

$$\Rightarrow 4x - 2y + 5 = 0 \quad \dots(1)$$

$$\text{and, } OP = BP \Rightarrow OP^2 = BP^2$$

$$\Rightarrow x^2 + y^2 = (x+3)^2 + (y-2)^2$$

$$\Rightarrow x^2 + y^2 = x^2 + y^2 + 6x - 4y + 13$$

$$\Rightarrow 6x - 4y + 13 = 0 \quad \dots(2)$$

On solving equations (1) and (2), we get

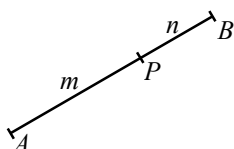
$$x = \frac{3}{2} \text{ and } y = \frac{11}{2}$$

Thus, the coordinates of the centre are  $\left(\frac{3}{2}, \frac{11}{2}\right)$

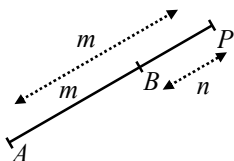
$$\begin{aligned} \text{Now, Radius} = OP &= \sqrt{x^2 + y^2} = \sqrt{\frac{9}{4} + \frac{121}{4}} \\ &= \frac{1}{2} \sqrt{130} \text{ units.} \end{aligned}$$

## SECTION FORMULAE

Let A and B be two points in the plane of the paper as shown in fig. and P be a point on the segment joining A and B such that  $AP : BP = m : n$ . Then, the point P divides segment AB internally in the ratio  $m : n$ .

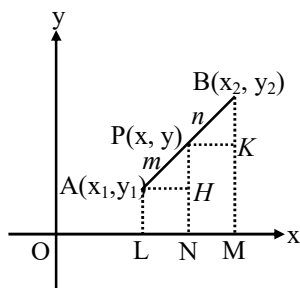


If P is a point on AB produced such that  $AP : BP = m : n$ , then point P is said to divide AB externally in the ratio  $m : n$ .



The coordinates of the point which divides the line segment joining the points  $(x_1, y_1)$  and  $(x_2, y_2)$  internally in the ratio  $m : n$  are given by

$$\left( x = \frac{mx_2 + nx_1}{m+n}, y = \frac{my_2 + ny_1}{m+n} \right)$$



The coordinates of P are

$$\left( \frac{mx_2 + nx_1}{m+n}, \frac{my_2 + ny_1}{m+n} \right)$$

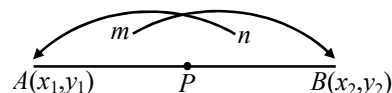
## Note 1 :

If P is the mid-point of AB, then it divides AB in the ratio  $1 : 1$ , so its coordinates are

$$\left( \frac{1 \cdot x_1 + 1 \cdot x_2}{1+1}, \frac{1 \cdot y_1 + 1 \cdot y_2}{1+1} \right) = \left( \frac{x_1 + x_2}{2}, \frac{y_1 + y_2}{2} \right)$$

## Note 2 :

Fig. will help to remember the section formula.



## Note 3 :

The ratio  $m : n$  can also be written as  $\frac{m}{n} : 1$ , or

$$\lambda : 1, \text{ where } \lambda = \frac{m}{n}.$$

So, the coordinates of point P dividing the line segment joining the points  $A(x_1, y_1)$  and  $B(x_2, y_2)$  are

$$\begin{aligned} \left( \frac{mx_2 + nx_1}{m+n}, \frac{my_2 + ny_1}{m+n} \right) &= \left( \frac{\frac{m}{n}x_2 + x_1}{\frac{m}{n} + 1}, \frac{\frac{m}{n}y_2 + y_1}{\frac{m}{n} + 1} \right) \\ &= \left( \frac{\lambda x_2 + x_1}{\lambda + 1}, \frac{\lambda y_2 + y_1}{\lambda + 1} \right) \end{aligned}$$

## ❖ EXAMPLES ❖

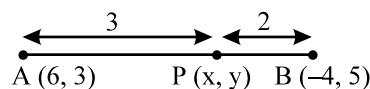
**Type I : On finding the section point when the section ratio is given**

**Ex.20** Find the coordinates of the point which divides the line segment joining the points  $(6, 3)$  and  $(-4, 5)$  in the ratio  $3 : 2$  internally.

**Sol.** Let P  $(x, y)$  be the required point. Then,

$$x = \frac{3 \times (-4) + 2 \times 6}{3+2} \text{ and } y = \frac{3 \times 5 + 2 \times 3}{3+2}$$

$$\Rightarrow x = 0 \text{ and } y = \frac{21}{5}$$

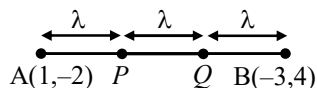


So, the coordinates of P are  $(0, 21/5)$ .



**Ex.21** Find the coordinates of points which trisect the line segment joining  $(1, -2)$  and  $(-3, 4)$ .

**Sol.** Let  $A(1, -2)$  and  $B(-3, 4)$  be the given points. Let the points of trisection be  $P$  and  $Q$ . Then,  $AP = PQ = QB = \lambda$  (say).



$$\therefore PB = PQ + QB = 2\lambda \text{ and } AQ = AP + PQ = 2\lambda$$

$$\Rightarrow AP : PB = \lambda : 2\lambda = 1 : 2 \text{ and}$$

$$AQ : QB = 2\lambda : \lambda = 2 : 1$$

So,  $P$  divides  $AB$  internally in the ratio  $1 : 2$  while  $Q$  divides internally in the ratio  $2 : 1$ . Thus, the coordinates of  $P$  and  $Q$  are

$$P\left(\frac{1 \times (-3) + 2 \times 1}{1 + 2}, \frac{1 \times 4 + 2 \times (-2)}{1 + 2}\right) = P\left(\frac{-1}{3}, 0\right)$$

$$Q\left(\frac{2 \times (-3) + 1 \times 1}{2 + 1}, \frac{2 \times 4 + 1 \times (-2)}{2 + 1}\right) = Q\left(\frac{-5}{3}, 2\right)$$

respectively

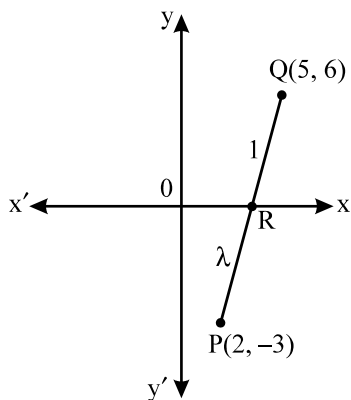
Hence, the two points of trisection are  $(-1/3, 0)$  and  $(-5/3, 2)$ .

**Type II : On Finding the section ratio or an end point of the segment when the section point is given**

**Ex.22** In what ratio does the  $x$ -axis divide the line segment joining the points  $(2, -3)$  and  $(5, 6)$ ? Also, find the coordinates of the point of intersection.

**Sol.** Let the required ratio be  $\lambda : 1$ . Then, the coordinates of the point of division are,

$$R\left(\frac{5\lambda + 2}{\lambda + 1}, \frac{6\lambda - 3}{\lambda + 1}\right)$$



But, it is a point on  $x$ -axis on which  $y$ -coordinates of every point is zero.

$$\therefore \frac{6\lambda - 3}{\lambda + 1} = 0$$

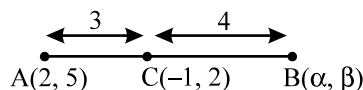
$$\Rightarrow \lambda = \frac{1}{2}$$

Thus, the required ratio is  $\frac{1}{2} : 1$  or  $1 : 2$ .

Putting  $\lambda = 1/2$  in the coordinates of  $R$ , we find that its coordinates are  $(3, 0)$ .

**Ex.23** If the point  $C(-1, 2)$  divides internally the line segment joining  $A(2, 5)$  and  $B$  in ratio  $3 : 4$ , find the coordinates of  $B$ .

**Sol.** Let the coordinates of  $B$  be  $(\alpha, \beta)$ . It is given that  $AC : BC = 3 : 4$ . So, the coordinates of  $C$  are



$$\left(\frac{3\alpha + 4 \times 2}{3 + 4}, \frac{3\beta + 4 \times 5}{3 + 4}\right) = \left(\frac{3\alpha + 8}{7}, \frac{3\beta + 20}{7}\right)$$

But, the coordinates of  $C$  are  $(-1, 2)$

$$\therefore \frac{3\alpha + 8}{7} = -1 \text{ and } \frac{3\beta + 20}{7} = 2$$

$$\Rightarrow \alpha = -5 \text{ and } \beta = -2$$

Thus, the coordinates of  $B$  are  $(-5, -2)$ .

**Ex.24** Determine the ratio in which the line  $3x + y - 9 = 0$  divides the segment joining the points  $(1, 3)$  and  $(2, 7)$ .

**Sol.** Suppose the line  $3x + y - 9 = 0$  divides the line segment joining  $A(1, 3)$  and  $B(2, 7)$  in the ratio  $k : 1$  at point  $C$ . Then, the coordinates of  $C$  are

$$\left(\frac{2k + 1}{k + 1}, \frac{7k + 3}{k + 1}\right)$$

But,  $C$  lies on  $3x + y - 9 = 0$ . Therefore,

$$3\left(\frac{2k + 1}{k + 1}\right) + \frac{7k + 3}{k + 1} - 9 = 0$$

$$\Rightarrow 6k + 3 + 7k + 3 - 9k - 9 = 0$$

$$\Rightarrow k = \frac{3}{4}$$

So, the required ratio is  $3 : 4$  internally.

**Type III : On determination of the type of a given quadrilateral**

**Ex.25** Prove that the points  $(-2, -1)$ ,  $(1, 0)$ ,  $(4, 3)$  and  $(1, 2)$  are the vertices of a parallelogram. Is it a rectangle ?

**Sol.** Let the given point be A, B, C and D respectively. Then,

Coordinates of the mid-point of AC are

$$\left( \frac{-2+4}{2}, \frac{-1+3}{2} \right) = (1, 1)$$

Coordinates of the mid-point of BD are

$$\left( \frac{1+1}{2}, \frac{0+2}{2} \right) = (1, 1)$$

Thus, AC and BD have the same mid-point. Hence, ABCD is a parallelogram.

Now, we shall see whether ABCD is a rectangle or not.

$$\text{We have, } AC = \sqrt{(4-(-2))^2 + (3-(-1))^2} = 2$$

$$\text{and, } BD = \sqrt{(1-1)^2 + (0-2)^2} = 2$$

Clearly,  $AC \neq BD$ . So, ABCD is not a rectangle.

**Ex.26** Prove that  $(4, -1)$ ,  $(6, 0)$ ,  $(7, 2)$  and  $(5, 1)$  are the vertices of a rhombus. Is it a square ?

**Sol.** Let the given points be A, B, C and D respectively. Then,

Coordinates of the mid-point of AC are

$$\left( \frac{4+7}{2}, \frac{-1+2}{2} \right) = \left( \frac{11}{2}, \frac{1}{2} \right)$$

Coordinates of the mid-point of BD are

$$\left( \frac{6+5}{2}, \frac{0+1}{2} \right) = \left( \frac{11}{2}, \frac{1}{2} \right)$$

Thus, AC and BD have the same mid-point.

Hence, ABCD is a parallelogram.

$$\text{Now, } AB = \sqrt{(6-4)^2 + (0+1)^2} = \sqrt{5},$$

$$BC = \sqrt{(7-6)^2 + (2-0)^2} = \sqrt{5}$$

$$\therefore AB = BC$$

So, ABCD is a parallelogram whose adjacent sides are equal.

Hence, ABCD is a rhombus.

We have,

$$AC = \sqrt{(7-4)^2 + (2+1)^2} = 3\sqrt{2} \text{ and}$$

$$BD = \sqrt{(6-5)^2 + (0-1)^2} = \sqrt{2}$$

Clearly,  $AC \neq BD$ .

So, ABCD is not a square.

**Type IV : On finding the unknown vertex from given points**

**Ex.27** The three vertices of a parallelogram taken in order are  $(-1, 0)$ ,  $(3, 1)$  and  $(2, 2)$  respectively. Find the coordinates of the fourth vertex.

**Sol.** Let  $A(-1, 0)$ ,  $B(3, 1)$ ,  $C(2, 2)$  and  $D(x, y)$  be the vertices of a parallelogram ABCD taken in order. Since, the diagonals of a parallelogram bisect each other.

$$\begin{aligned} \therefore \text{Coordinates of the mid-point of AC} \\ = \text{Coordinates of the mid-point of BD} \end{aligned}$$

$$\Rightarrow \left( \frac{-1+2}{2}, \frac{0+2}{2} \right) = \left( \frac{3+x}{2}, \frac{1+y}{2} \right)$$

$$\Rightarrow \left( \frac{1}{2}, 1 \right) = \left( \frac{3+x}{2}, \frac{y+1}{2} \right)$$

$$\Rightarrow \frac{3+x}{2} = \frac{1}{2} \text{ and } \frac{y+1}{2} = 1$$

$$\Rightarrow x = -2 \text{ and } y = 1$$

Hence, the fourth vertex of the parallelogram is  $(-2, 1)$ .

**Ex.28** If the points A  $(6, 1)$ , B  $(8, 2)$ , C  $(9, 4)$  and D  $(p, 3)$  are vertices of a parallelogram, taken in order, find the value of p.

**Sol.** We know that the diagonals of a parallelogram bisect each other. So, coordinates of the mid-point of diagonal AC are same as the coordinates of the mid-point of diagonal BD.

$$\therefore \left( \frac{6+9}{2}, \frac{1+4}{2} \right) = \left( \frac{8+p}{2}, \frac{2+3}{2} \right)$$

$$\Rightarrow \left( \frac{15}{2}, \frac{5}{2} \right) = \left( \frac{8+p}{2}, \frac{5}{2} \right)$$

$$\Rightarrow \frac{15}{2} = \frac{8+p}{2} \Rightarrow 15 = 8 + p$$

$$\Rightarrow p = 7$$

**Ex.29** If  $A(-2, -1)$ ,  $B(a, 0)$ ,  $C(4, b)$  and  $D(1, 2)$  are the vertices of a parallelogram, find the values of  $a$  and  $b$ .

**Sol.** We know that the diagonals of a parallelogram bisect each other. Therefore, the coordinates of the mid-point of  $AC$  are same as the coordinates of the mid-point of  $BD$  i.e.,

$$\left( \frac{-2+4}{2}, \frac{-1+b}{2} \right) = \left( \frac{a+1}{2}, \frac{0+2}{2} \right)$$

$$\Rightarrow \left( 1, \frac{b-1}{2} \right) = \left( \frac{a+1}{2}, 1 \right)$$

$$\Rightarrow \frac{a+1}{2} = 1 \text{ and } \frac{b-1}{2} = 1$$

$$\Rightarrow a+1 = 2 \text{ and } b-1 = 2$$

$$\Rightarrow a = 1 \text{ and } b = 3$$

**Ex.30** If the coordinates of the mid-points of the sides of a triangle are  $(1, 2)$   $(0, -1)$  and  $(2, -1)$ . Find the coordinates of its vertices.

**Sol.** Let  $A(x_1, y_1)$ ,  $B(x_2, y_2)$  and  $C(x_3, y_3)$  be the vertices of  $\triangle ABC$ . Let  $D(1, 2)$ ,  $E(0, -1)$ , and  $F(2, -1)$  be the mid-points of sides  $BC$ ,  $CA$  and  $AB$  respectively. Since  $D$  is the mid-point of  $BC$ .

$$\therefore \frac{x_2+x_3}{2} = 1 \text{ and } \frac{y_2+y_3}{2} = 2$$

$$\Rightarrow x_2+x_3 = 2 \text{ and } y_2+y_3 = 4 \quad \dots (1)$$

Similarly,  $E$  and  $F$  are the mid-point of  $CA$  and  $AB$  respectively.

$$\therefore \frac{x_1+x_3}{2} = 0 \text{ and } \frac{y_1+y_3}{2} = -1$$

$$\Rightarrow x_1+x_3 = 0 \text{ and } y_1+y_3 = -2 \quad \dots (2)$$

$$\text{and } \frac{x_1+x_2}{2} = 2 \text{ and } \frac{y_1+y_2}{2} = -1$$

$$\Rightarrow x_1+x_2 = 4 \text{ and } y_1+y_2 = -2 \quad \dots (3)$$

From (1), (2) and (3), we get

$$(x_2+x_3) + (x_1+x_3) + (x_1+x_2) = 2+0+4 \text{ and,}$$

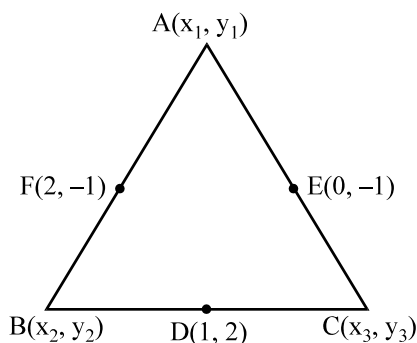
$$(y_2+y_3) + (y_1+y_3) + (y_1+y_2) = 4-2-2$$

$$\Rightarrow 2(x_1+x_2+x_3) = 6 \text{ and}$$

$$2(y_1+y_2+y_3) = 0 \quad \dots (4)$$

$$\Rightarrow x_1+x_2+x_3 = 3$$

$$\text{and } y_1+y_2+y_3 = 0$$



From (1) and (4), we get

$$x_1+2 = 3 \text{ and } y_1+4 = 0$$

$$\Rightarrow x_1 = 1 \text{ and } y_1 = -4$$

So, the coordinates of  $A$  are  $(1, -4)$

From (2) and (4), we get

$$x_2+0 = 3 \text{ and } y_2-2 = 0$$

$$\Rightarrow x_2 = 3 \text{ and } y_2 = 2$$

So, coordinates of  $B$  are  $(3, 2)$

From (3) and (4), we get

$$x_3+4 = 3 \text{ and } y_3-2 = 0$$

$$\Rightarrow x_3 = -1 \text{ and } y_3 = 2$$

So, coordinates of  $C$  are  $(-1, 2)$

Hence, the vertices of the triangle  $ABC$  are  $A(1, -4)$ ,  $B(3, 2)$  and  $C(-1, 2)$ .

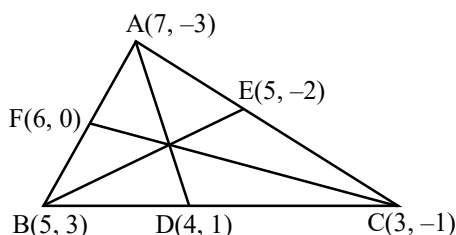
**Ex.31** Find the lengths of the medians of a  $\triangle ABC$  whose vertices are  $A(7, -3)$ ,  $B(5, 3)$  and  $C(3, -1)$ .

**Sol.** Let  $D$ ,  $E$ ,  $F$  be the mid-points of the sides  $BC$ ,  $CA$  and  $AB$  respectively. Then, the coordinates of  $D$ ,  $E$  and  $F$  are

$$D\left(\frac{5+3}{2}, \frac{3-1}{2}\right) = D(4, 1),$$

$$E\left(\frac{3+7}{2}, \frac{-1-3}{2}\right) = E(5, -2)$$

$$\text{and, } F\left(\frac{7+5}{2}, \frac{-3+3}{2}\right) = F(6, 0)$$



$$\therefore AD = \sqrt{(7-4)^2 + (-3-1)^2} = \sqrt{9+16} = 5 \text{ units}$$

$$BE = \sqrt{(5-5)^2 + (-2-3)^2} = \sqrt{0+25} = 5 \text{ units}$$

$$\text{and, } CF = \sqrt{(6-3)^2 + (0+1)^2} = \sqrt{9+1} = \sqrt{10} \text{ units.}$$

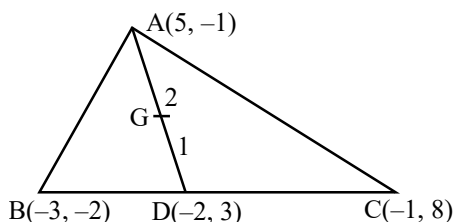
**Ex.32** If A (5, -1), B(-3, -2) and C(-1, 8) are the vertices of triangle ABC, find the length of median through A and the coordinates of the centroid.

**Sol.** Let AD be the median through the vertex A of  $\triangle ABC$ . Then, D is the mid-point of BC. So, the coordinates of D are  $\left(\frac{-3-1}{2}, \frac{-2+8}{2}\right)$  i.e., (-2, 3).

$$\begin{aligned}\therefore AD &= \sqrt{(5+2)^2 + (-1-3)^2} \\ &= \sqrt{49+16} = \sqrt{65} \text{ units}\end{aligned}$$

Let G be the centroid of  $\triangle ABC$ . Then, G lies on median AD and divides it in the ratio 2 : 1. So, coordinates of G are

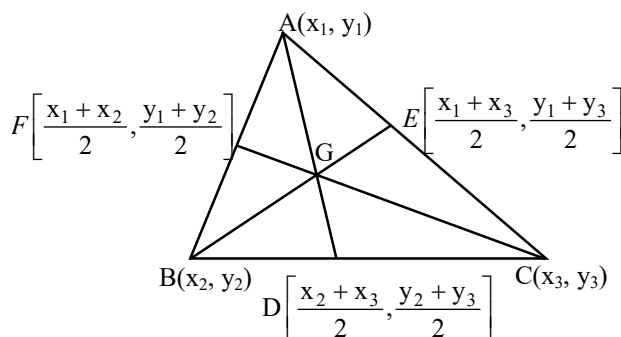
$$\begin{aligned}&\left(\frac{2 \times (-2) + 1 \times 5}{2+1}, \frac{2 \times 3 + 1 \times (-1)}{2+1}\right) \\ &= \left(\frac{-4+5}{3}, \frac{6-1}{3}\right) = \left(\frac{1}{3}, \frac{5}{3}\right)\end{aligned}$$



### ➤ APPLICATION OF SECTION FORMULA

**Theorem :** The coordinates of the centroid of the triangle whose vertices are  $(x_1, y_1)$ ,  $(x_2, y_2)$  and

$(x_3, y_3)$  are  $\left(\frac{x_1 + x_2 + x_3}{3}, \frac{y_1 + y_2 + y_3}{3}\right)$



### ❖ EXAMPLES ❖

**Ex.33** Find the coordinates of the centroid of a triangle whose vertices are (-1, 0), (5, -2) and (8, 2).

**Sol.** We know that the coordinates of the centroid of a triangle whose angular points are  $(x_1, y_1)$ ,  $(x_2, y_2)$ ,  $(x_3, y_3)$  are

$$\left(\frac{x_1 + x_2 + x_3}{3}, \frac{y_1 + y_2 + y_3}{3}\right)$$

So, the coordinates of the centroid of a triangle whose vertices are (-1, 0), (5, -2) and (8, 2) are

$$\left(\frac{-1+5+8}{3}, \frac{0-2+2}{3}\right) \text{ or, } (4, 0)$$

**Ex.34** If the coordinates of the mid points of the sides of a triangle are (1, 1), (2, -3) and (3, 4) Find its centroid.

**Sol.** Let P (1, 1), Q(2, -3), R(3, 4) be the mid-points of sides AB, BC and CA respectively of triangle ABC. Let A  $(x_1, y_1)$ , B  $(x_2, y_2)$  and C  $(x_3, y_3)$  be the vertices of triangle ABC. Then, P is the mid-point of BC

$$\Rightarrow \frac{x_1 + x_2}{2} = 1, \frac{y_1 + y_2}{2} = 1$$

$$\Rightarrow x_1 + x_2 = 2 \text{ and } y_1 + y_2 = 2 \quad \dots(1)$$

Q is the mid-point of BC

$$\Rightarrow \frac{x_2 + x_3}{2} = 2, \frac{y_2 + y_3}{2} = -3$$

$$\Rightarrow x_2 + x_3 = 4 \text{ and } y_2 + y_3 = -6 \quad \dots(2)$$

R is the mid-point of AC

$$\Rightarrow \frac{x_1 + x_3}{2} = 3 \text{ and } \frac{y_1 + y_3}{2} = 4$$

$$\Rightarrow x_1 + x_3 = 6 \text{ and } y_1 + y_3 = 8 \quad \dots(3)$$

From (1), (2) and (3), we get

$$x_1 + x_2 + x_2 + x_3 + x_1 + x_3 = 2 + 4 + 6$$

$$\text{and, } y_1 + y_2 + y_2 + y_3 + y_1 + y_3 = 2 - 6 + 8$$

$$\Rightarrow x_1 + x_2 + x_3 = 6 \text{ and } y_1 + y_2 + y_3 = 2 \dots(4)$$

The coordinates of the centroid of  $\triangle ABC$  are

$$\left(\frac{x_1 + x_2 + x_3}{3}, \frac{y_1 + y_2 + y_3}{3}\right) = \left(\frac{6}{3}, \frac{2}{3}\right)$$

$$= \left(2, \frac{2}{3}\right) \quad [\text{Using (4)}]$$

**Ex.35** Two vertices of a triangle are (3, -5) and (-7, 4). If its centroid is (2, -1). Find the third vertex.

**Sol.** Let the coordinates of the third vertex be (x, y). Then,

$$\frac{x+3-7}{3} = 2 \text{ and } \frac{y-5+4}{3} = -1$$

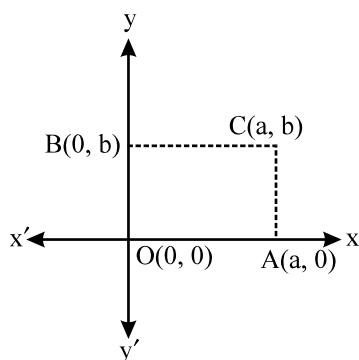
$$\Rightarrow x - 4 = 6 \text{ and } y - 1 = -3$$

$$\Rightarrow x = 10 \text{ and } y = -2$$

Thus, the coordinates of the third vertex are (10, -2).

**Ex.36** Prove that the diagonals of a rectangle bisect each other and are equal.

**Sol.** Let OACB be a rectangle such that OA is along x-axis and OB is along y-axis. Let OA = a and OB = b.



Then, the coordinates of A and B are (a, 0) and (0, b) respectively.

Since, OACB is a rectangle. Therefore,

$$AC = Ob \Rightarrow AC = b$$

Thus, we have

$$OA = a \text{ and } AC = b$$

So, the coordinates of C are (a, b).

The coordinates of the mid-point of OC are

$$\left( \frac{a+0}{2}, \frac{b+0}{2} \right) = \left( \frac{a}{2}, \frac{b}{2} \right)$$

Also, the coordinates of the mid-points of AB are

$$\left( \frac{a+0}{2}, \frac{0+b}{2} \right) = \left( \frac{a}{2}, \frac{b}{2} \right)$$

Clearly, coordinates of the mid-point of OC and AB are same.

Hence, OC and AB bisect each other.

$$\text{Also, } OC = \sqrt{a^2 + b^2} \text{ and}$$

$$AB = \sqrt{(a-0)^2 + (0-b)^2} = \sqrt{a^2 + b^2}$$

$$\therefore OC = AB$$

### ➤ AREA OF A TRIANGLE

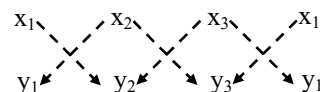
**Theorem :** The area of a triangle, the coordinates of whose vertices are  $(x_1, y_1)$ ,  $(x_2, y_2)$  and  $(x_3, y_3)$  is

$$\frac{1}{2} |x_1(y_2 - y_3) + x_2(y_3 - y_1) + x_3(y_1 - y_2)|$$

**Remark :** The area of  $\triangle ABC$  can also be computed by using the following steps :

**Step I :** Write the coordinates of the vertices  $A(x_1, y_1)$ ,  $B(x_2, y_2)$  and  $C(x_3, y_3)$  in three columns as shown below and augment the coordinates of  $A(x_1, y_1)$  as fourth column.

**Step II :** Draw broken parallel lines pointing downwards from left to right and right to left.



**Step III :** Compute the sum of the products of numbers at the ends of the lines pointing downwards from left to right and subtract from this sum the sum of the products of numbers at the ends of the lines pointing downward from right to left i.e., compute

$$(x_1y_2 + x_2y_3 + x_3y_1) - (x_2y_1 + x_3y_2 + x_1y_3)$$

**Step IV :** Find the absolute of the number obtained in step III and take its half to obtain the area.

**Remark :** Three points  $A(x_1, y_1)$ ,  $B(x_2, y_2)$  and  $C(x_3, y_3)$  are collinear iff

$$\text{Area of } \triangle ABC = 0 \text{ i.e., } x_1(y_2 - y_3) + x_2(y_3 - y_1) + x_3(y_1 - y_2) = 0$$

### ❖ EXAMPLES ❖

**Type I : On finding the area of a triangle when coordinates of its vertices are given.**

**Ex.37** Find the area of a triangle whose vertices are  $A(3, 2)$ ,  $B(11, 8)$  and  $C(8, 12)$ .

**Sol.** Let  $A = (x_1, y_1) = (3, 2)$ ,  $B = (x_2, y_2) = (11, 8)$  and  $C = (x_3, y_3) = (8, 12)$  be the given points. Then,

$$\text{Area of } \triangle ABC = \frac{1}{2} |x_1(y_2 - y_3) + x_2(y_3 - y_1) + x_3(y_1 - y_2)|$$

$$\Rightarrow \text{Area of } \triangle ABC = \frac{1}{2} | \{ 3(8-12) + 11(12-2) + 8(2-8) \} |$$

$$\Rightarrow \text{Area of } \triangle ABC = \frac{1}{2} | (-12 + 110 - 48) | = 25 \text{ sq. units}$$

**ALTER** We have,



$$\therefore \text{Area of } \triangle ABC = | \{ (3 \times 8 + 11 \times 12 + 8 \times 2) - (11 \times 2 + 8 \times 8 + 3 \times 12) \} |$$

$$\Rightarrow \text{Area of } \triangle ABC = \frac{1}{2} | (24 + 132 + 16) - (22 + 64 + 36) |$$

$$\Rightarrow \text{Area of } \triangle ABC = \frac{1}{2} | 172 - 122 | = 25 \text{ sq. units}$$

**Ex.38** Prove that the area of triangle whose vertices are  $(t, t-2)$ ,  $(t+2, t+2)$  and  $(t+3, t)$  is independent of  $t$ .

**Sol.** Let  $A = (x_1, y_1) = (t, t-2)$ ,  $B (x_2, y_2) = (t+2, t+2)$  and  $C = (x_3, y_3) = (t+3, t)$  be the vertices of the given triangle. Then,

$\therefore$  Area of  $\triangle ABC$

$$= \frac{1}{2} | x_1(y_2 - y_3) + x_2(y_3 - y_1) + x_3(y_1 - y_2) |$$

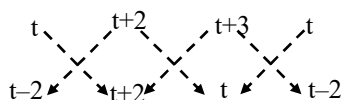
$$\Rightarrow \text{Area of } \triangle ABC = \frac{1}{2} | \{ t(t+2-t) + (t+2)(t-t+2) + (t+3)(t-2-t+2) \} |$$

$$\Rightarrow \text{Area of } \triangle ABC = \frac{1}{2} | \{ 2t + 2t + 1 - 4t - 12 \} | = | -4 |$$

$$= 4 \text{ sq. units}$$

Clearly, area of  $\triangle ABC$  is independent of  $t$ .

**ALTER** We have,



$\therefore$  Area of  $\triangle ABC$

$$= \frac{1}{2} | \{ t(t+2) + (t+2)t + (t+3)(t-2) \} - \{ (t+2)(t-2) + (t+3)(t+2) + t \times t \} |$$

$$\Rightarrow \text{Area of } \triangle ABC = \frac{1}{2} | (t^2 + 2t + t^2 + 2t + t^2 + t - 6) - (t^2 - 4 + t^2 + 5t + 6 + t^2) |$$

$$\Rightarrow \text{Area of } \triangle ABC = \frac{1}{2} | (3t^2 + 5t - 6) - (3t^2 + 5t + 2) |$$

$$\Rightarrow \text{Area of } \triangle ABC = \frac{1}{2} | (-6 - 2) |$$

$$\Rightarrow \text{Area of } \triangle ABC = 4 \text{ sq. units}$$

Hence, Area of  $\triangle ABC$  is independent of  $t$ .

**Ex.39** Find the area of the triangle formed by joining the mid-point of the sides of the triangle whose vertices are  $(0, -1)$ ,  $(2, 1)$  and  $(0, 3)$ . Find the ratio of area of the triangle formed to the area of the given triangle.

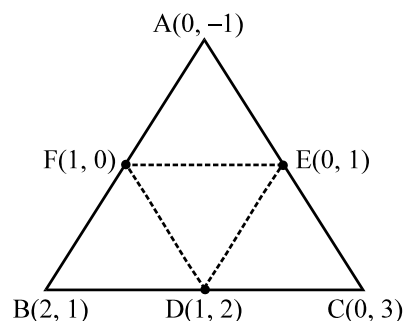
**Sol.** Let  $A (0, -1)$ ,  $B(2, 1)$  and  $C(0, 3)$  be the vertices of  $\triangle ABC$ . Let  $D, E, F$  be the mid-points of sides  $BC, CA$  and  $AB$  respectively. Then, the coordinates of  $D, E$  and  $F$  are  $(1, 2)$ ,  $(0, 1)$  and  $(1, 0)$  respectively.

Now,

$$\text{Area of } \triangle ABC = \frac{1}{2} | x_1(y_2 - y_3) + x_2(y_3 - y_1) + x_3(y_1 - y_2) |$$

$$\Rightarrow \text{Area of } \triangle ABC = \frac{1}{2} | 0(1-3) + 2(3-(-1)) + 0(0-1) |$$

$$\Rightarrow \text{Area of } \triangle ABC = \frac{1}{2} | 0 + 8 + 0 | = 4 \text{ sq. units}$$



$$\text{Area of } \triangle DEF = \frac{1}{2} | x_1(y_2 - y_3) + x_2(y_3 - y_1) + x_3(y_1 - y_2) |$$

$$\Rightarrow \text{Area of } \triangle DEF = \frac{1}{2} | 1(1-0) + 0(0-2) + 1(2-1) |$$

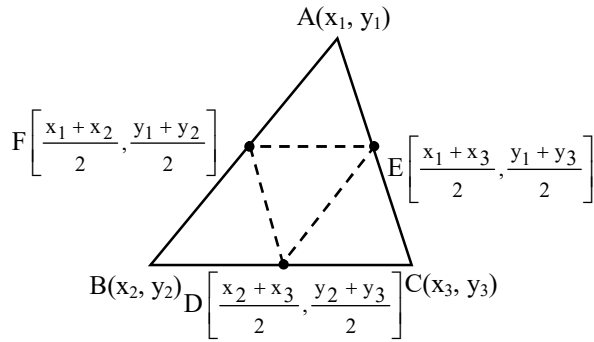
$$\Rightarrow \text{Area of } \triangle DEF = \frac{1}{2} | 1 + 1 | = 1 \text{ sq. units}$$

$$\therefore \text{Area of } \triangle DEF : \text{Area of } \triangle ABC = 1 : 4$$

**Ex.40** If  $D, E$  and  $F$  are the mid-points of sides  $BC, CA$  and  $AB$  respectively of a  $\triangle ABC$ , then using coordinate geometry prove that

$$\text{Area of } \triangle DEF = \frac{1}{4} (\text{Area of } \triangle ABC)$$

**Sol.** Let  $A(x_1, y_1), B(x_2, y_2), C(x_3, y_3)$  be the vertices of  $\Delta ABC$ . Then, the coordinates of D, E and F are  $\left(\frac{x_2 + x_3}{2}, \frac{y_2 + y_3}{2}\right)$ ,  $\left(\frac{x_1 + x_3}{2}, \frac{y_1 + y_3}{2}\right)$  and  $\left(\frac{x_1 + x_2}{2}, \frac{y_1 + y_2}{2}\right)$  respectively.



$$\Delta_1 = \text{Area of } \Delta ABC = \frac{1}{2} |x_1(y_2 - y_3) + x_2(y_3 - y_1) + x_3(y_1 - y_2)|$$

$$\Delta_2 = \text{Area of } \Delta DEF$$

$$= \frac{1}{2} \left| \left( \frac{x_2 + x_3}{2} \right) \left( \frac{y_1 + y_3}{2} - \frac{y_1 + y_2}{2} \right) + \left( \frac{x_1 + x_3}{2} \right) \left( \frac{y_1 + y_2}{2} - \frac{y_2 + y_3}{2} \right) + \left( \frac{x_1 + x_2}{2} \right) \left( \frac{y_2 + y_3}{2} - \frac{y_1 + y_3}{2} \right) \right|$$

$$\Rightarrow \Delta_2 = \frac{1}{8} |(x_2 + x_3)(y_3 - y_2) + (x_1 + x_3)(y_1 - y_3) + (x_1 + x_2)(y_2 - y_1)|$$

$$\Rightarrow \Delta_2 = \frac{1}{8} |x_1(y_1 - y_3 + y_2 - y_1) + x_2(y_3 - y_2 + y_2 - y_1) + x_3(y_3 - y_2 + y_1 - y_3)|$$

$$\Rightarrow \Delta_2 = \frac{1}{8} |x_1(y_2 - y_3) + x_2(y_3 - y_1) + x_3(y_1 - y_2)|$$

$$\Rightarrow \Delta_2 = \frac{1}{4} (\text{Area of } \Delta ABC) = \frac{1}{4} \Delta_1$$

$$\text{Hence, Area of } \Delta DEF = \frac{1}{4} (\text{Area of } \Delta ABC)$$

**Ex.41** The vertices of  $\Delta ABC$  are A (4, 6), B(1, 5) and C(7, 2). A line is drawn to intersect sides AB and AC at D and E respectively such that  $\frac{AD}{AB} = \frac{AE}{AC} = \frac{1}{4}$ . Calculate the area of  $\Delta ADE$  and compare it with the area of  $\Delta ABC$ .

**Sol.** We have,  $\frac{AD}{AB} = \frac{AE}{AC} = \frac{1}{4}$

$$\Rightarrow \frac{AB}{AD} = \frac{AC}{AE} = 4$$

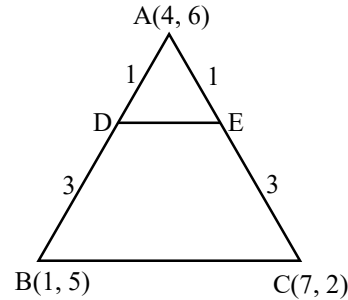
$$\Rightarrow \frac{AD + DB}{AD} = \frac{AE + EC}{AE} = 4$$

$$\Rightarrow 1 + \frac{DB}{AD} = 1 + \frac{EC}{AE} = 4$$

$$\Rightarrow \frac{DB}{AD} = \frac{EC}{AE} = 3 \Rightarrow \frac{AD}{DB} = \frac{AE}{EC} = \frac{1}{3}$$

$$\Rightarrow AD : DB = AE : EC = 1 : 3$$

$\Rightarrow$  D and E divide AB and AC respectively in the ratio 1 : 3.

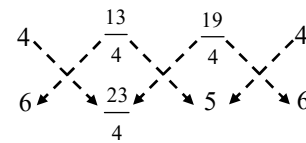


So, the co-ordinates of D and E are

$$\left( \frac{1+12}{1+3}, \frac{5+18}{1+3} \right) = \left( \frac{13}{4}, \frac{23}{4} \right) \text{ and } \left( \frac{7+12}{1+3}, \frac{2+18}{1+3} \right) = \left( \frac{19}{4}, 5 \right)$$

respectively.

We have,



$\therefore$  Area of  $\Delta ADE$

$$= \frac{1}{2} \left| \left( 4 \times \frac{23}{4} + \frac{13}{4} \times 5 + \frac{19}{4} \times 6 \right) - \left( \frac{13}{4} \times 6 + \frac{19}{4} \times 4 + 4 \times 5 \right) \right|$$

$$\Rightarrow \text{Area of } \Delta ABC = \frac{1}{2} \left| \left( \frac{92}{4} + \frac{65}{4} + \frac{114}{4} \right) - \left( \frac{78}{4} + \frac{437}{16} + 20 \right) \right|$$

$$\Rightarrow \text{Area of } \Delta ABC = \frac{1}{2} \left| \frac{271}{4} - \frac{1069}{16} \right|$$

$$= \frac{1}{2} \times \frac{15}{16} = \frac{15}{32} \text{ sq. untis.}$$

Also, we have



$$\therefore \text{Area of } \triangle ABC = \frac{1}{2} |(4 \times 5 + 1 \times 2 + 7 \times 6) - (1 \times 6 + 7 \times 5 + 4 \times 2)|$$

$$\Rightarrow \text{Area of } \triangle ABC = \frac{1}{2} |(20 + 2 + 42) - (6 + 35 + 8)|$$

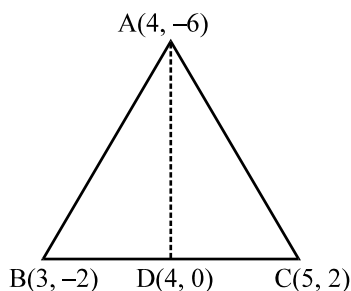
$$\Rightarrow \text{Area of } \triangle ABC = \frac{1}{2} |64 - 49| = \frac{15}{2} \text{ sq. units}$$

$$\therefore \frac{\text{Area of } \triangle ADE}{\text{Area of } \triangle ABC} = \frac{15/32}{15/2} = \frac{1}{16}$$

Hence, Area of  $\triangle ADE$  : Area of  $\triangle ABC = 1 : 16$ .

**Ex.42** If  $A(4, -6)$ ,  $B(3, -2)$  and  $C(5, 2)$  are the vertices of  $\triangle ABC$ , then verify the fact that a median of a triangle  $ABC$  divides it into two triangles of equal areas.

**Sol.** Let  $D$  be the mid-point of  $BC$ . Then, the coordinates of  $D$  are  $(4, 0)$ .



We have,



$$\therefore \text{Area of } \triangle ABC = \frac{1}{2} |(4 \times (-2) + 3 \times 2 + 5 \times (-6)) - (3 \times (-6) + 5 \times (-2) + 4 \times 2)|$$

$$\Rightarrow \text{Area of } \triangle ABC = \frac{1}{2} |(-8 + 6 - 30) - (-18 - 10 + 8)|$$

$$\Rightarrow \text{Area of } \triangle ABC = \frac{1}{2} |-32 + 20| = 6 \text{ sq. units}$$

Also, We have



$$\therefore \text{Also of } \triangle ABD = \frac{1}{2} |(4 \times (-2) + 3 \times 0 + 4 \times (-6)) - (3 \times (-6) + 4 \times (-2) + 4 \times 0)|$$

$$\Rightarrow \text{Area of } \triangle ABD = \frac{1}{2} |(-8 + 0 + 26) - (-18 - 8 + 0)|$$

$$\Rightarrow \text{Area of } \triangle ABD = \frac{1}{2} |(-32 + 26)| = 3 \text{ sq. units}$$

$$\Rightarrow \frac{\text{Area of } \triangle ABC}{\text{Area of } \triangle ABD} = \frac{6}{3} = \frac{2}{1}$$

$$\Rightarrow \text{Area of } \triangle ABC = 2 (\text{Area of } \triangle ABD)$$

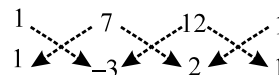
**TypeII : On finding the area of a quadrilateral when coordinates of its vertices are given**

**Ex.43** Find the area of the quadrilateral  $ABCD$  whose vertices are respectively  $A(1, 1)$ ,  $B(7, -3)$ ,  $C(12, 2)$  and  $D(7, 21)$ .

**Sol.** Area of quadrilateral  $ABCD$

$$= |\text{Area of } \triangle ABC| + |\text{Area of } \triangle ACD|$$

We have,

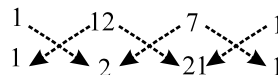


$$\therefore \text{Area of } \triangle ABC = \frac{1}{2} |(1 \times (-3) + 7 \times 2 + 12 \times 1) - (7 \times 1 + 12 \times (-3) + 1 \times 2)|$$

$$\Rightarrow \text{Area of } \triangle ABC = \frac{1}{2} |(-3 + 14 + 12) - (7 - 36 + 2)|$$

$$\Rightarrow \text{Area of } \triangle ABC = \frac{1}{2} |23 + 27| = 25 \text{ sq. units}$$

Also, we have



$$\therefore \text{Area of } \triangle ACD = \frac{1}{2} |(1 \times 2 + 12 \times 21 + 7 \times 1) - (12 \times 1 + 7 \times 2 + 1 \times 21)|$$

$$\Rightarrow \text{Area of } \triangle ACD = \frac{1}{2} |(2 + 252 + 7) - (12 + 14 + 21)|$$

$$\Rightarrow \text{Area of } \triangle ACD = \frac{1}{2} |261 - 47| = 107 \text{ sq. units}$$

$$\therefore \text{Area of quadrilateral } ABCD = 25 + 107 = 132 \text{ sq. units}$$



### Type III : On collinearity of three points

#### FORMULA:

Three points  $(x_1, y_1)$ ,  $(x_2, y_2)$  and  $(x_3, y_3)$  are collinear iff

$$x_1(y_2 - y_3) + x_2(y_3 - y_1) + x_3(y_1 - y_2) = 0$$

$$\text{or, } (x_1y_2 + x_2y_3 + x_3y_1) - (x_1y_3 + x_3y_2 + x_2y_1) = 0$$

**Ex.44** Prove that the points  $(2, -2)$ ,  $(-3, 8)$  and  $(-1, 4)$  are collinear.

**Sol.** Let  $\Delta$  be the area of the triangle formed by the given points.

We have,

$$\therefore \Delta = \frac{1}{2} | \{ 2 \times 8 + (-3) \times 4 + (-1) \times (-2) \} - \{ (-3) \times (-2) + (-1) \times 8 + 2 \times 4 \} |$$

$$\Rightarrow \Delta = \frac{1}{2} | (16 - 12 + 2) - (6 - 8 + 8) |$$

$$\Rightarrow \Delta = \frac{1}{2} | 6 - 6 | = 0$$

Hence, given points are collinear.

**Ex.45** Prove that the points  $(a, b + c)$ ,  $(b, c + a)$  and  $(c, a + b)$  are collinear.

**Sol.** Let  $\Delta$  be the area of the triangle formed by the points  $(a, b + c)$ ,  $(b, c + a)$  and  $(c, a + b)$ .

We have,

$$\therefore \Delta = \frac{1}{2} | \{ a(c + a) + b(a + b) + c(b + c) \} - \{ b(b + c) + c(c + a) + a(a + b) \} |$$

$$\Rightarrow \Delta = \frac{1}{2} | (ac + a^2 + ab + b^2 + bc + c^2) - (b^2 + bc + c^2 + ca + a^2 + ab) |$$

$$\Rightarrow \Delta = 0$$

Hence, the given points are collinear.

### Type IV : On Finding the desired result or unknown when three points are collinear

**Ex.46** For what value of  $k$  are the points  $(k, 2 - 2k)$ ,  $(-k + 1, 2k)$  and  $(-4 - k, 6 - 2k)$  are collinear ?

**Sol.** Given points will be collinear, if area of the triangle formed by them is zero.

We have,

i.e.,

$$| \{ 2k^2 + (-k + 1)(6 - 2k) + (-4 - k)(2 - 2k) \} - \{ (-k + 1)(2 - 2k) + (-4 - k)(2k) + k(6 - 2k) \} | = 0$$

$$\Rightarrow | (2k^2 + 6 - 8k + 2k^2 + 2k^2 + 6k - 8) - (2 - 4k + 2k^2 - 8k - 2k^2 + 6k - 2k^2) |$$

$$\Rightarrow (6k^2 - 2k - 2) - (-2k^2 - 6k + 2) = 0$$

$$\Rightarrow 8k^2 + 4k - 4 = 0$$

$$\Rightarrow 2k^2 + k - 1 = 0 \Rightarrow (2k - 1)(k + 1) = 0$$

$$\Rightarrow k = 1/2 \text{ or } k = -1$$

$$\Rightarrow k = 1/2 \text{ or } k = -1$$

Hence, the given points are collinear for

$$k = 1/2 \text{ or } k = -1.$$

**Ex.47** For what value of  $x$  will the points  $(x, -1)$ ,  $(2, 1)$  and  $(4, 5)$  lie on a line ?

**Sol.** Given points will be collinear if the area of the triangle formed by them is zero.

$$\therefore \text{Area of the triangle} = 0$$

$$\Rightarrow | \{ x \times 1 + 2 \times 5 + 4 \times (-1) \} - \{ (2 \times (-1) + 4 \times 1 + x \times 5) \} | = 0$$

$$\Rightarrow (x + 10 - 4) - (-2 + 4 + 5x) = 0$$

$$\Rightarrow (x + 6) - (5x + 2) = 0$$

$$\Rightarrow -4x + 4 = 0$$

$$\Rightarrow -4x + 4 = 0$$

$$\Rightarrow x = 1$$

Hence, the given points lie on a line, if  $x = 1$ .

**Type V : Mixed problems based upon the concept of area of a triangle**

**Ex.48** If the coordinates of two points A and B are (3, 4) and (5, -2) respectively. Find the coordinates of any point P, if

$$PA = PB \text{ and Area of } \triangle PAB = 10.$$

**Sol.** Let the coordinates of P be (x, y). Then,

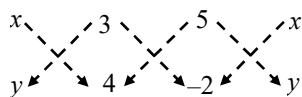
$$PA = PB$$

$$\Rightarrow PA^2 = PB^2$$

$$\Rightarrow (x-3)^2 + (y-4)^2 = (x-5)^2 + (y+2)^2$$

$$\Rightarrow x - 3y - 1 = 0 \quad \dots(1)$$

$$\text{Now, Area of } \triangle PAB = 10$$



$$\Rightarrow \frac{1}{2} |(4x + 3 \times (-2) + 5y) - (3y + 20 - 2x)| = 10$$

$$\Rightarrow |(4x + 5y - 6) - (-2x + 3y + 20)| = 20$$

$$\Rightarrow |6x + 2y - 26| = \pm 20 \Rightarrow 6x + 2y - 26 = \pm 20$$

$$\Rightarrow 6x + 2y - 46 = 0 \text{ or, } 6x + 2y - 6 = 0$$

$$\Rightarrow 3x + y - 23 = 0 \text{ or, } 3x + y - 3 = 0$$

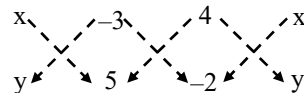
Solving  $x - 3y - 1 = 0$  and  $3x + y - 23 = 0$  we get  $x = 7, y = 2$ .

Solving  $x - 3y - 1 = 0$  and  $3x + y - 3 = 0$ , we get  $x = 1, y = 0$ .

Thus, the coordinates of P are (7, 2) or (1, 0).

**Ex.49** The coordinates of A, B, C are (6, 3), (-3, 5) and (4, -2) respectively and P is any point (x, y). Show that the ratio of the areas of triangle PBC and ABC is  $\left| \frac{x+y-2}{7} \right|$ .

**Sol.** We have,



$$\therefore \text{Area of } \triangle PBC = \frac{1}{2} |(5x + 6 + 4y) - (-3y + 20 - 2x)|$$

$$\Rightarrow \text{Area of } \triangle PBC = \frac{1}{2} |5x + 6 + 4y + 3y - 20 + 2x|$$

$$\Rightarrow \text{Area of } \triangle PBC = \frac{1}{2} |7x + 7y - 14|$$

$$\Rightarrow \text{Area of } \triangle PBC = \frac{7}{2} |x + y - 2|$$

$$\Rightarrow \text{Area of } \triangle PBC = \frac{7}{2} |6 + 3 - 2|$$

[Replacing x by 6 and y = 3  
in Area of  $\triangle PBC$ ]

$$\Rightarrow \text{Area of } \triangle ABC = \frac{49}{2}$$

$$\therefore \frac{\text{Area of } \triangle PBC}{\text{Area of } \triangle ABC} = \frac{\frac{7}{2} |x + y - 2|}{\frac{49}{2}}$$

$$= \frac{|x + y - 2|}{7} = \left| \frac{x + y - 2}{7} \right|$$

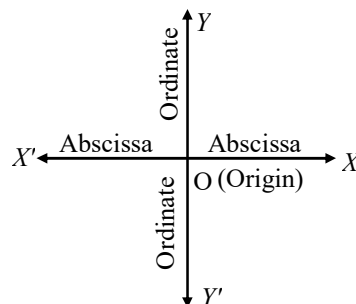
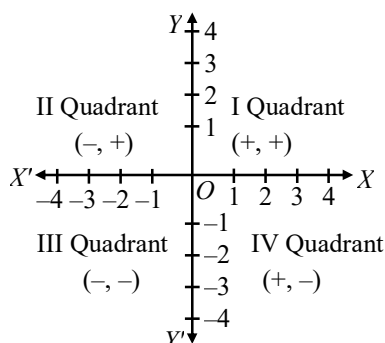
## IMPORTANT POINTS TO BE REMEMBERED

1. The point of intersection of two perpendicular lines is known as origin  $O(0, 0)$ .
2. The Horizontal line  $XOX'$  is called x-axis and the vertical line  $YOY'$  is call y-axis.
3. The plane on which these lines are graphed is known as cartesian Plane and lines are called the co-ordinate axes.
4. These two mutually perpendicular lines divide the cartesian plane into four parts which are called quadrants I, II, III and IV.

5.

Quadrant	Abscissa(x)	Ordinate(y)	Co-ordinate(x,y)
1st	+	+	(+, +)
2nd	-	+	(-, +)
3rd	-	-	(-, -)
4th	+	-	(+, -)

6. In a point  $A(x, y)$ , x-coordinate is known as Abscissa and y-coordinate is known as ordinate.
7. Equation of x-axis is  $y = 0$
8. Equation of y-axis is  $x = 0$
9. Graph of the line  $x = a$  is always parallel to y-axis.
10. Graph of the line  $y = b$  is always parallel to x-axis.
11. Any point on x-axis is  $(x, 0)$  and any point on y-axis is  $(0, y)$
12. Abscissa is +ve to the right of the origin and negative to the left of the origin.
13. Ordinate (y) is +ve above x-axis and -ve below x-axis.
14. Sign convention- While marking a point on the squared paper, the sign convention must be kept in mind.



15. Distance between two points  $(x_1, y_1)$  and  $B(x_2, y_2)$  is  $AB = \sqrt{(x_2 - x_1)^2 + (y_2 - y_1)^2}$

16. Distance of a point  $P(x, y)$  from the origin  $O(0,0)$  is-

$$OP = \sqrt{(x-0)^2 + (y-0)^2} = \sqrt{x^2 + y^2}$$

17. Section formula : the co-ordinates of the point  $P(x, y)$  which divide the join of the points  $A(x, y)$  and  $B(x_2, y_2)$  internally in the ratio  $m_1 : m_2$  are

$$\left( \frac{m_1 x_2 + m_2 x_1}{m_1 + m_2}, \frac{m_1 y_2 + m_2 y_1}{m_1 + m_2} \right)$$

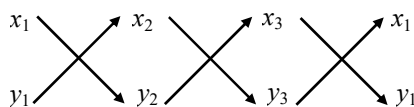
18. The mid-point of a line segment divides the line segment in the ratio 1:1. Therefore, the co-ordinates of the point  $P$  of the join of the points  $A(x_1, y_1)$  and  $B(x_2, y_2)$  are

$$\left( \frac{x_1 + x_2}{2}, \frac{y_1 + y_2}{2} \right)$$

19. Area of  $\Delta ABC$  whose vertices  $A(x_1, y_1)$ ,  $B(x_2, y_2)$  and  $C(x_3, y_3)$  are -

$$\text{area of } \Delta ABC = \frac{1}{2} [x_1 (y_2 - y_3) + x_2 (y_3 - y_1) + x_3 (y_1 - y_2)]$$

OR



OR

$$\text{area of } \Delta ABC = \frac{1}{2} [(x_1 y_2 + x_2 y_3 + x_3 y_1) - (x_1 y_3 + x_3 y_2 + x_2 y_1)]$$

**20.** The points A, B, C are collinear if

area of  $\Delta ABC = 0$ .

**21.** Centroid :  $\left( \frac{x_1 + x_2 + x_3}{3}, \frac{y_1 + y_2 + y_3}{3} \right)$

**22. AREA OF QUADRILATERAL**

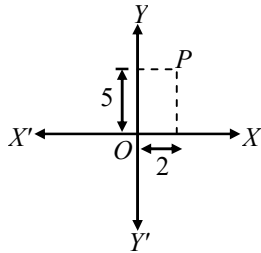
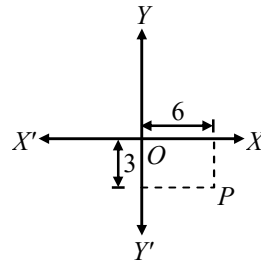
If A  $(x_1, y_1)$ , B  $(x_2, y_2)$ , C  $(x_3, y_3)$  and D  $(x_4, y_4)$  be the vertices of quadrilateral ABCD then area of the quadrilateral ABCD

$$= \frac{1}{2} [x_1y_2 - x_2y_1 + x_2y_3 - x_3y_2 + x_3y_4 - x_4y_3 + x_4y_1 - x_1y_4]$$

## EXERCISE # 1

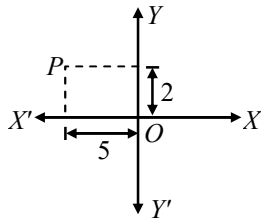
**Q.1** In the adjoining figure find

- (i) abscissa
- (ii) ordinate
- (iii) co-ordinates of point P.



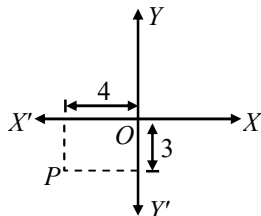
**Q.2** Determine

- (i) abscissa
- (ii) ordinate
- (iii) co-ordinate of point P in this given figure.



**Q.3** Determine

- (i) abscissa
- (ii) ordinate
- (iii) coordinates of point P, in the figure.

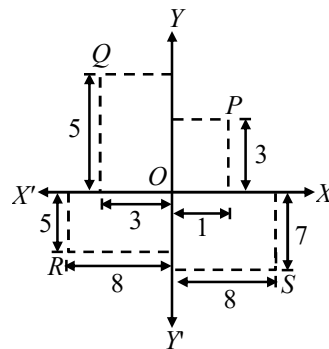


**Q.4** In the given figure find

- (i) abscissa
- (ii) ordinate
- (iii) co-ordinates of point P.

**Q.5** Write down

- (i) abscissa
- (ii) ordinates and
- (iii) co-ordinates of the points P, Q, R and S in the given figure.



**Q.6** Draw X-axis and Y-axis and mark the point A (3, 9), B (4, - 7), C (-8, 9), D (- 3, - 5), E (4, - 2) and F (7, 5)

**Q.7** Draw a triangle PQR whose vertices are P = (1, - 6), Q = (7, 4) and R = (- 4, 4).

**Q.8** Draw a triangle ABC whose vertices A, B, and C are (- 3, 0), (3, 3) and (- 3, 3) respectively.

**Q.9** Draw a rectangle ABCD such that its vertices A, B, C and D are (4, 3), (4, - 2), (- 7, - 2) and (- 7, 3) respectively.

**Q.10** Draw a rectangle KLMN such that its vertices K, L, M, and N are (5, 0), (5, 3), (0, 3) and (0, 0) respectively.

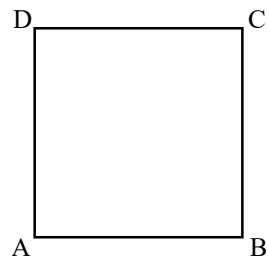
**Q.11** Construct a square ABCD such that its vertices A, B, C, and D are (1, 2), (- 7, 2), (- 7, - 6) and (1, - 6) respectively.

- Q.12** Construct a square PQRS whose vertices P, Q, R and S are  $(0, 0)$ ,  $(-4, 0)$ ,  $(-4, -4)$  and  $(0, -4)$  respectively
- Q.13** Draw a parallelogram ABCD whose vertices A, B, C, and D are  $(-4, 8)$ ,  $(-4, 2)$ ,  $(6, -7)$  and  $(6, -1)$  respectively.
- Q.14** Construct a trapezium PQRS in which vertices P, Q, R and S are  $(3, 0)$ ,  $(7, 9)$ ,  $(-6, 9)$  and  $(-2, 0)$  respectively.
- Q.15** Draw a rhombus ABCD whose vertices A, B, C and D are  $(1, 4.5)$ ,  $(-1, 0)$ ,  $(1, -4.5)$  and  $(3, 0)$  respectively
- Q.16** Find the distance between the following pair of points :
- $(-6, 7)$  and  $(-1, -5)$
  - $(a + b, b + c)$  and  $(a - b, c - b)$
  - $(a \sin \alpha, -b \cos \alpha)$  and  $(-a \cos \alpha, b \sin \alpha)$
  - $(a, 0)$  and  $(0, b)$
- Q.17** Find the value of  $a$  when the distance between the points  $(3, a)$  and  $(4, 1)$  is  $\sqrt{10}$ .
- Q.18** Which point on x-axis is equidistant from  $(5, 9)$  and  $(-4, 6)$ ?
- Q.19** Prove that the points  $(-2, 5)$ ,  $(0, 1)$  and  $(2, -3)$  are collinear.
- Q.20** Three vertices of a parallelogram are  $(a + b, a - b)$ ,  $(2a + b, 2a - b)$ ,  $(a - b, a + b)$ , find the fourth vertex.
- Q.21** If the coordinates of the mid-points of the sides of a triangle are  $(1, 1)$ ,  $(2, -3)$  and  $(3, 4)$ , find its vertices.
- Q.22** Find the centroid of the triangle whose vertices are :
- $(1, 4)$ ,  $(-1, -1)$ ,  $(3, -2)$
  - $(-2, 3)$ ,  $(2, -1)$ ,  $(4, 0)$
- Q.23** Two vertices of a triangle are  $(1, 2)$ ,  $(3, 5)$  and its centroid is at the origin. Find the coordinates of the third vertex.

- Q.24** If  $(-2, 3)$ ,  $(4, -3)$  and  $(4, 5)$  are the mid-points of the sides of a triangle, find the coordinates of its centroid.

- Q.25** Find the area of a triangle whose vertices are
- $(6, 3)$ ,  $(-3, 5)$  and  $(4, -2)$
  - $(at_1^2, 2at_1)$ ,  $(at_2^2, 2at_2)$  and  $(at_3^2, 2at_3)$
  - $(a, c + a)$ ,  $(a, c)$  and  $(-a, c - a)$

- Q.26** Find the co-ordinates of the vertices of the square ABCD (side  $2a$ )



- Taking AB and AD as axis,
  - Taking the centre of the square as origin and axes parallel to the sides AB, AD.
- Q.27** Show that the points  $(-4, -1)$ ,  $(-2, -4)$ ,  $(4, 0)$  and  $(2, 3)$  are the vertices of a rectangle.
- Q.28** Show that the points A  $(1, -2)$ , B  $(3, 6)$ , C  $(5, 10)$  and D  $(3, 2)$  are the vertices of a parallelogram.
- Q.29** Prove that the point A  $(0, 1)$ , B  $(1, 4)$ , C  $(4, 3)$  and D  $(3, 0)$  are the vertices of a square.
- Q.30** Prove that the points  $(3, 0)$ ,  $(6, 4)$  and  $(-1, 3)$  are the vertices of a right angled isosceles triangle.
- Q.31** Prove that  $(2, -2)$ ,  $(-2, 1)$  and  $(5, 2)$  are the vertices of a right angled triangle. Find the area of the triangle and the length of the hypotenuse.
- Q.32** Prove that the points  $(2a, 4a)$ ,  $(2a, 6a)$  and  $(2a + \sqrt{3}a, 5a)$  are the vertices of an equilateral triangle.
- Q.33** Prove that the points  $(2, 3)$ ,  $(-4, -6)$  and  $(1, \frac{3}{2})$  do not form a triangle

- Q.34** An equilateral triangle has two vertices at the points (3, 4) and (− 2, 3), find the coordinates of the third vertex.
- Q.35** Show that the quadrilateral whose vertices are (2, −1), (3, 4), (− 2, 3) and (− 3, − 2) is a rhombus.
- Q.36** Two vertices of an isosceles triangle are (2, 0) and (2, 5). Find the third vertex if the length of the equal sides is 3.
- Q.37** Find the value of k, if the point P (0, 2) is equidistant from (3, k) and (k, 5).
- Q.38** Find the coordinates of the point which divides the line segment joining (− 1, 3), and (4, − 7) internally in the ratio. 3 : 4.
- Q.39** Find the point of trisection of the line segment joining the points :  
 (i) (5, − 6) and (− 7, 5)  
 (ii) (3, − 2) and (− 3, − 4)  
 (iii) (1, 2) and (11, 9).
- Q.40** Three consecutive vertices of a parallelogram are (−2, −1), (1, 0) and (4, 3). Find the fourth vertex.
- Q.41** If A (−1, 3), B (1, −1) and C (5, 1) are the vertices of a triangle ABC, find the length of the median through A.
- Q.42** If the coordinates of the mid-points of the sides of a triangle are (1, 1), (2, −3) and (3, 4), find the vertices of the triangle.
- Q.43** If the mid-point of the line joining (3, 4) and (k, 7) is (x, y) and  $2x + 2y + 1 = 0$  find the value of k.
- Q.44** Determine the ratio in which the straight line  $x - y - 2 = 0$  divides the line segment joining (3, −1) and (8, 9).
- Q.45** Prove that (4, 3), (6, 4), (5, 6) and (3, 5) are the angular points of a square.
- Q.46** Determine the ratio in which the point P (m, 6) divides the join of A (−4, 3) and B (2, 8). Also find the value of m.
- Q.47** Determine the ratio in which the point (− 6, a) divides the join of A (− 3, 1) and B (− 8, 9). Also find the value of a.
- Q.48** Find the area of the quadrilaterals, the coordinates of whose vertices are  
 (i) (− 3, 2), (5, 4), (7, − 6) and (− 5, − 4)  
 (ii) (1, 2), (6, 2), (5, 3) and (3, 4)
- Q.49** The four vertices of a quadrilateral are (1, 2), (−5, 6), (7, −4) and (k, −2) taken in order. If the area of the quadrilateral is zero, find the value of k.
- Q.50** Show that the following sets of points are collinear.  
 (i) (2, 5), (4, 6) and (8, 8)  
 (ii) (1, −1), (2, 1) and (4, 5).
- Q.51** Prove that the points (a, 0), (0, b) and (1, 1) are collinear if,  $\frac{1}{a} + \frac{1}{b} = 1$ .
- Q.52** Prove that the points (3, −2), (4, 0), (6, −3) and (5, −5) are the vertices of a parallelogram.
- Q.53** Find the centre of the circle passing through (5, − 8), (2, − 9) and (2, 1).
- Q.54** Show that the points A (5, 6), B (1, 5), C (2, 1) and D (6, 2) are the vertices of a square.
- Q.55** Find the value of x such that PQ = QR where the coordinates of P, Q and R are (6, − 1), (1, 3) and (x, 8) respectively.
- Q.56** Prove that the points (0, 0), (5, 5) and (− 5, 5) are the vertices of a right isosceles triangle.
- Q.57** Find the centre of the circle passing through (6, −6), (3, −7) and (3, 3).
- Q.58** Two opposite vertices of square are (−1, 2) and (3, 2). Find the coordinates of other two vertices.

**Q.59** The area of a triangle is 5. Two of its vertices are (2, 1) and (3, -2). The third vertex lies on  $y = x + 3$ . Find the third vertex.

**Q.60** If  $a \neq b \neq c$ , prove that the points  $(a, a^2)$ ,  $(b, b^2)$ ,  $(c, c^2)$  can never be collinear.

**Q.61** Four points A (6, 3), B (-3, 5), C (4, -2), and D (x, 3x) are given in such a way that  $\frac{\Delta DBC}{\Delta ABC} = \frac{1}{2}$ , find x.

**Q.62** For what value of a the point (a, 1), (1, -1) and (11, 4) are collinear?

**Q.63** Prove that the points (a, b),  $(a_1, b_1)$  and  $(a - a_1, b - b_1)$  are collinear if  $ab_1 = a_1b$ .

**Q.64** If three points  $(x_1, y_1)$ ,  $(x_2, y_2)$ ,  $(x_3, y_3)$  lie on the same line, prove that

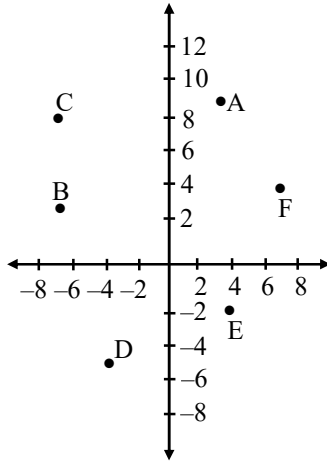
$$\frac{y_2 - y_3}{x_2 x_3} + \frac{y_3 - y_1}{x_3 x_1} + \frac{y_1 - y_2}{x_1 x_2} = 0.$$



# ANSWER KEY

1. (i) 2 (ii) 5 (iii) (2, 5) 2. (i) -5 (ii) 2 (iii) (-5, 2)  
 3. (i) -4 (ii) -3 (iii) (-4, -3) 4. (i) 6 (ii) -3 (iii) (6, -3)  
 5. (i) 1, -3, -8, 8 (ii) 3, 5, -5, -7 (iii) P(1, 3), Q(-3, 5), R(-8, -5), S(8, -7)

6.



16. (i) 13 (ii)  $2b\sqrt{2}$  (iii)  $\sqrt{a^2 + b^2} (\sin\alpha + \cos\alpha)$  (iv)  $\sqrt{a^2 + b^2}$   
 17. 4, -2 18. (3, 0) 20. (-b, b) 21. (2, 10), (0, -4), (4, 2) 22. (i) (1, 1/3), (4/3, 2/3)  
 23. (-4, -7) 24. (2, 5/3) 25. (i) 49/2 sq. units (ii)  $a^2 (t_1 - t_2) (t_2 - t_3) (t_1 - t_3)$  (iii)  $a^2$   
 26. (i) A(0, 0), B(2a, 0), C(2a, 2a), D(0, 2a) (ii) A(-a, -a), B(a, -a), C(a, a), D(-a, a)  
 34.  $\left(\frac{1+\sqrt{3}}{2}, \frac{7-5\sqrt{3}}{2}\right), \left(\frac{1-\sqrt{3}}{2}, \frac{7+5\sqrt{3}}{2}\right)$  36.  $\left(2-\frac{\sqrt{11}}{2}, \frac{5}{2}\right), \left(2+\frac{\sqrt{11}}{2}, \frac{5}{2}\right)$   
 37. 1 38. (8/7, -9/7) & (-16, 33)  
 39. (i) (1, -7/3), (-3, 4/3) (ii) (1, -8/3), (-1, -10/3) (iii) (13/3, 13/3), (23/3, 20/3)  
 40. (1, 2) 41. 5 42. (4, 0), (2, 8), (0, -6) 43.  $k = -15$   
 44. 2 : 3 Internally 46. 3 : 2,  $m = -2/5$  47. 3 : 2,  $a = 29/5$   
 48. (i) 80 sq. units (ii) 11/2 sq. units 49.  $k = 3$   
 53. (2, -4) 55. 5, -3 57. (3, -2)  
 58. (1, 0) and (1, 4) 59. (7/2, 13/2) or (-3/2, 3/2) 61. 11/8 62.  $a = 5$

## EXERCISE # 2

---

- Q.1** Find the distance between the points  $(\cos\theta, \sin\theta)$  and  $(\sin\theta, -\cos\theta)$ .
- Q.2** Find the distance between the points  $(a \cos 35^\circ, 0)$  and  $(0, a \cos 65^\circ)$ .
- Q.3** Find the distance between the points  $(a \cos \theta + b \sin \theta, 0)$  and  $(0, a \sin \theta - b \cos \theta)$ .
- Q.4** If the distance between the points  $(4, p)$  and  $(1, 0)$  is 5, then find  $p$ .
- Q.5** A line segment is of length 10 units. If the coordinates of its one end are  $(2, -3)$  and the abscissa of the other end is 10, then find its ordinate.
- Q.6** Find the perimeter of the triangle formed by the points  $(0, 0)$ ,  $(1, 0)$  and  $(0, 1)$ .
- Q.7** If  $A(2, 2)$ ,  $B(-4, -4)$  and  $C(5, -8)$  are the vertices of a triangle, then find the length of the median through vertex  $C$ .
- Q.8** If three points  $(0, 0)$ ,  $(3, \sqrt{3})$  and  $(3, \lambda)$  form an equilateral triangle, then find  $\lambda$ .
- Q.9** If the points  $(k, 2k)$ ,  $(3k, 3k)$  and  $(3, 1)$  are collinear, then find  $k$ .
- Q.10** Find the coordinates of the point of X-axis which are equidistant from the points  $(-3, 4)$  and  $(2, 5)$ .
- Q.11** If  $(-2, -1)$ ,  $(a, 0)$ ,  $(4, b)$  and  $(1, 2)$  vertices of a parallelogram then find value of  $a$  and  $b$ .
- Q.12** If  $A(5, 3)$ ,  $B(11, -5)$  and  $P(12, y)$  are the vertices of a right triangle right angled at  $P$ , then find  $y$ .
- Q.13** Find the area of the triangle formed by  $(a, b+c)$ ,  $(b, c+a)$  and  $(c, a+b)$ .
- Q.14** If  $(x, 2)$ ,  $(-3, -4)$  and  $(7, -5)$  are collinear, then find  $x$ .
- Q.15** If points  $(t, 2t)$ ,  $(-2, 6)$  and  $(3, 1)$  are collinear then find  $t$ .
- Q.16** If the area of the triangle formed by the points  $(x, 2x)$ ,  $(-2, 6)$  and  $(3, 1)$  is 5 square units, then find  $x$ .
- Q.17** If points  $(a, 0)$ ,  $(0, b)$  and  $(1, 1)$  are collinear, then find  $\frac{1}{a} + \frac{1}{b}$ .
- Q.18** If the centroid of a triangle is  $(1, 4)$  and two of its vertices are  $(4, -3)$  and  $(-9, 7)$ , then find the area of the triangle.
- Q.19** Find the ratio in which line segment joining points  $(-3, -4)$  and  $(1, -2)$  is divided by y-axis.
- Q.20** Find the ratio in which  $(4, 5)$  divides the join of  $(2, 3)$  and  $(7, 8)$ .
- Q.21** The ratio in which the x-axis divides the segment joining  $(3, 6)$  and  $(12, -3)$ .
- Q.22** If the centroid of the triangle formed by the points  $(a, b)$ ,  $(b, c)$  and  $(c, a)$  is at the origin, then find  $a^3 + b^3 + c^3 =$
- Q.23** If the centroid of the triangle formed by  $(7, x)$ ,  $(y, -6)$  and  $(9, 10)$  is at  $(6, 3)$  then find  $(x, y)$ .
- Q.24** The line joining the points  $A(4, -5)$  and  $B(4, 5)$  is divided by the point  $P$  such that  $AP : AB = 2 : 5$ , find the coordinates of  $P$ .
- Q.25** The line segment joining  $A(-3, 1)$  and  $B(5, -4)$  is a diameter of a circle whose centre is  $C$ . Find the coordinates of the point  $C$ .
- Q.26** The mid-point of the line joining  $(a, 2)$  and  $(3, 6)$  is  $(2, b)$ . Find the values of  $a$  and  $b$ .
- Q.27** The mid-point of the line segment joining  $(2a, 4)$  and  $(-2, 3b)$  is  $(1, 2a + 1)$ . Find the values of  $a$  and  $b$ .

**Q.28** The centre of a circle is  $(2, -3)$  and one end of a diameter is  $(1, 4)$ , find the other end.

**Q.29** The point  $P(-4, 1)$  divides the line segment joining the points  $A(2, -2)$  and  $B$  in the ratio  $3 : 5$ . Find the point  $B$ .

**Q.30** If  $A(1, 1)$  and  $B(-2, 3)$  are two points and  $C$  is a point on  $AB$  produced such that  $AC = 3AB$ , find the co-ordinates of  $C$ .

**Q.31** In what ratio does the point  $(-4, 6)$  divide the line segment joining the points  $A(-6, 10)$  and  $B(3, -8)$ ?

**Q.32** The line segment joining  $A\left(-1, \frac{5}{3}\right)$  and  $B(a, 5)$  is divided in the ratio  $1 : 3$  at  $P$ , the point where the line segment  $AB$  intersects  $y$ -axis. Find  
(i) the value of  $a$   
(ii) the co-ordinates of  $P$ .

**Q.33** Find the ratio in which the  $y$ -axis divides the line segment joining the points  $(5, -6)$  and  $(-1, -4)$ . Also find the co-ordinates of the point of intersection.

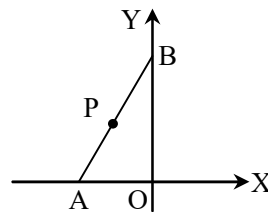
**Q.34** Calculate the ratio in which the line joining  $A(6, 5)$  and  $B(4, -3)$  is divided by the line  $y = 2$ . Also find the co-ordinates of the point of division.

**Q.35** Determine the ratio in which the line  $2x + y - 4 = 0$  divide the line segment joining the points  $A(2, -2)$  and  $B(3, 7)$ . Also find the coordinates of the point of division.

**Q.36**  $A(10, 5)$ ,  $B(6, -3)$  and  $C(2, 1)$  are the vertices of a triangle  $ABC$ .  $L$  is the mid-point of  $AB$  and  $M$  is the mid-point of  $AC$ . Write down the co-ordinates of  $L$  and  $M$ . Show that  $LM = \frac{1}{2}BC$ .

**Q.37** Find the third vertex of a triangle if its two vertices are  $(-1, 4)$  and  $(5, 2)$  and mid-point of one side is  $(0, 3)$ .

**Q.38** In the adjoining figure,  $P(-2, 3)$  is the mid-point of the line-segment  $AB$ . Find the coordinates of  $A$  and  $B$ .



**Q.39** Prove that the coordinates of the centroid of a  $\triangle ABC$ , with vertices  $A(x_1, y_1)$ ,  $B(x_2, y_2)$  and  $C(x_3, y_3)$  are given by

$$\left( \frac{x_1 + x_2 + x_3}{3}, \frac{y_1 + y_2 + y_3}{3} \right)$$

## ANSWER KEY

---

1.  $\sqrt{2}$       2. a      3.  $\sqrt{a^2 + b^2}$       4.  $\pm 4$       5.  $(3, -9)$       6.  $2 + \sqrt{2}$
7.  $\sqrt{85}$       9.  $-\frac{1}{3}$       11.  $a = -2, b = 6,$
12.  $2, -4$       13. 0      14.  $-63$       15.  $\frac{4}{3}$       16.  $\frac{2}{3}$       17. 1
18.  $\frac{183}{2}$       19.  $3 : 1$       20.  $2 : 3$       21.  $2 : 1$       22.  $3abc$       23.  $(5, 2)$
24.  $(4, -1)$       25.  $\left(1, -\frac{3}{2}\right)$       26.  $a = 1, b = 4$       27.  $a = 2, b = 2$
28.  $(3, -10)$       29.  $(-14, 6)$       30.  $(-8, 7)$       31.  $2 : 7$
32. (i) 3 (ii)  $\left(0, \frac{5}{2}\right)$       33.  $5 : 1, \left(0, -\frac{13}{3}\right)$       34.  $3 : 5; \left(\frac{21}{4}, 2\right)$
35.  $2 : 9, \left(\frac{24}{11}, -\frac{4}{11}\right)$       37.  $(-5, 4)$  or  $(1, 2)$       38.  $A(-4, 0), B(0, 6)$