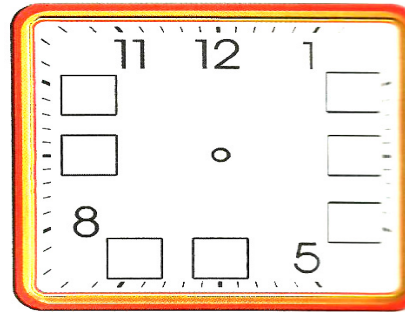



# CLASS I MATHS HW WORKSHEET


SUBMISSION DATE:

Q1 Write the missing numbers on the clock and draw the hands to show a) 9:00 b) 4:00



Q2 Lets find out what Mala does on a week day. Write the time in two ways. One is already done for you.

Mala gets up at



6 o'clock

6.00


She gets ready for school by



She comes back from school at



She goes to play at



She finishes her homework by



She goes to bed at

